



Delhi Development Authority
(Recruitment Cell)
Advertisement No. 01/2020/ Rectt.Cell.

| | | |
|------------------|--|--------------------------------|
| Participant ID | www.HaryanaJobs.in | |
| Participant Name | | |
| Test Center Name | | iON Digital Zone iDZ Sector 34 |
| Test Date | | 05/11/2020 |
| Test Time | | 12:30 PM - 2:30 PM |
| Subject | | Patwari |

Section : General Awareness

Q.1 As on 30th June 2020, who was the chief law officer of the Government of India?

- Ans
- 1. Tushar Mehta
 - 2. Manish Malhotra
 - 3. K. K. Venugopal
 - 4. Aman Lekhi

Question ID : 59445919925
Status : Answered
Chosen Option : 3

Q.2 Who founded the newspaper titled 'Kesari' in the year 1881?

- Ans
- 1. Gopal Krishna Gokhale
 - 2. Bipin Chandra Pal
 - 3. Bal Gangadhar Tilak
 - 4. Lala Lajpat Rai

Question ID : 59445919922
Status : Answered
Chosen Option : 3

Q.3 In the context of law enforcement in India, Cri-MAC is the name of a:

- Ans
- 1. cell to provide legal support in the issues related to fugitive economic offenders.
 - 2. centre for sharing of information on heinous crimes and other issues related to inter-state coordination.
 - 3. special unit of National Security Guard (NSG) for anti-terror operations.
 - 4. task force constituted to suggest measures for international cooperation in curbing trans-border crimes.

Question ID : 59445919923
Status : Answered
Chosen Option : 4

Q.4 Which of the following Harappan sites is NOT located in present day Gujarat?

- Ans
- 1. Rangapur
 - 2. Bhagatrav
 - 3. Nageswara
 - 4. Manda

Question ID : 59445919920
Status : Not Answered
Chosen Option : --

Q.5 In Rajasthan, the river named Jawai is a tributary of:

- Ans
- 1. Ghaggar
 - 2. Sabarmati
 - 3. Banas
 - 4. Luni

Question ID : 59445919932
Status : Answered
Chosen Option : 3

Q.6 The rate at which Reserve Bank of India lends short term money to commercial banks in the event of any shortfall of funds is called:

- Ans
- 1. Reverse Repo Rate
 - 2. Sovereign Rate
 - 3. Repo Rate
 - 4. Prime Lending Rate

www.HaryanaJobs.in

Question ID : 59445919935
Status : Answered
Chosen Option : 3

Q.7 Which of the following mountain ranges has Kalumar Peak as one of its highest points?

- Ans
- 1. Satpura
 - 2. Cardamom hills
 - 3. Vindhya
 - 4. Aravali

Question ID : 59445919931
Status : Not Answered
Chosen Option : --

Q.8 To which of the following regions is the dance form named 'Rasiya' traditionally associated?

- Ans
- 1. Magahi
 - 2. Mithila
 - 3. Awadh
 - 4. Braj

Question ID : 59445919930
Status : Answered
Chosen Option : 4

Q.9 Who among the following introduced the Sufi order named 'Chishti Silsila' in India?

- Ans
- 1. Qutb-ud-Din Bakhtiyar Kaki
 - 2. Shaikh Fariduddin
 - 3. Khwaja Moinuddin
 - 4. Usman Harooni

Question ID : 59445919921
Status : Answered
Chosen Option : 3

Q.10 Which of the following sectors is NOT included in the Indices of Industrial Production prepared by the Government of India?

- Ans
- 1. Electricity
 - 2. Services
 - 3. Mining
 - 4. Manufacturing

Question ID : 59445919934
Status : Answered
Chosen Option : 1

Q.11 In the cricket tournament named Ranji Trophy 2019-20, Jaydev Unadkat played for:

- Ans
- 1. Saurashtra
 - 2. Haryana
 - 3. Tamil Nadu
 - 4. Punjab

Question ID : 59445919926
Status : Answered
Chosen Option : 1

Q.12 Which parts of India has the main distribution of the natural habitat of greater flamingos?

- Ans
- 1. East
 - 2. South-west
 - 3. South
 - 4. North-west

Question ID : 59445919936
Status : Not Answered
Chosen Option : --

Q.13 Who won The Hindu Prize 2019 in Fiction category?

- Ans
- 1. Arundhati Roy
 - 2. Mirza Waheed
 - 3. Chetan Bhagat
 - 4. Kiran Desai

Question ID : 59445919919
Status : Answered
Chosen Option : 2

Q.14 Which of the following is NOT an autoimmune disease?

- Ans
- 1. Rheumatoid Arthritis
 - 2. Hashimoto's thyroiditis
 - 3. Psoriasis
 - 4. Filariasis

Question ID : 59445919937
Status : Answered
Chosen Option : 1

Q.15 In March 2020, Indian Army launched 'Operation Namaste'. The operation was aimed at:

- Ans
- 1. helping the government in its fight against COVID-19.
 - 2. sending the African nationals back who were stranded in India due to outbreak of COVID-19.
 - 3. bringing back the Indian stranded in United States due to outbreak of COVID-19.
 - 4. bringing back the Indians stranded in Italy due to outbreak of COVID-19.

Question ID : 59445919918
Status : Answered
Chosen Option : 3

Q.16 Which of the following monument is NOT located in Qutb Complex in Delhi?

- Ans
- 1. Alai Darwaza
 - 2. Quwwat-ul-Islam Mosque
 - 3. Tomb of Sher Shah Suri
 - 4. Tomb of Ala-ud-din Khalji

Question ID : 59445919928
Status : Answered
Chosen Option : 1

Q.17 The Mineral Laws (Amendment) Bill, 2020 seeks to remove end-user restrictions on which of the following minerals?

- Ans
- 1. Aluminium
 - 2. Coal
 - 3. Iron
 - 4. Copper

Question ID : 59445919924
Status : Answered
Chosen Option : 4

Q.18 With which of the following communities are 'Tusu' songs associated?

- Ans
- 1. Jarawa
 - 2. Onge
 - 3. Santhal
 - 4. Adiyen

Question ID : 59445919929
Status : Not Answered
Chosen Option : --

Q.19 Which of the following Public Sector Banks has ceased to exist as an independent entity since 1st April 2020?

- Ans
- 1. Bank Of Baroda
 - 2. United Bank of India
 - 3. Canara Bank
 - 4. Punjab National Bank

Question ID : 59445919933
Status : Answered
Chosen Option : 2

Q.20 Which country will host the FIFA World Cup 2022?


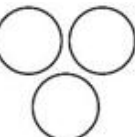


- Ans
- 1. Brazil
 - 2. Spain
 - 3. Qatar
 - 4. Australia

Question ID : 59445919927
Status : Answered
Chosen Option : 3

Section : General Intelligence & Reasoning Ability

Q.1 Which of the following picture shows the relationship between ocean, earth and mars?

Ans

- 1. 
- 2. 
- 3. 
- 4. 

www.HaryanaJobs.in

Question ID : 59445919956
Status : Answered
Chosen Option : 1

Q.2 In a parallelogram ABCD, $AB = CD = 4$, $AD = BC = 3$, then what will be the value of intersects, AC?

- Ans
- 1. 5.4
 - 2. 5
 - 3. 4.4
 - 4. 6

Question ID : 59445919940
Status : Answered
Chosen Option : 2

Q.3 Fill the correct in the gap.

ATZ, DPY, GLX, _____, MDV.

- Ans
- 1. JHW
 - 2. JHU
 - 3. JWH
 - 4. JIW

Question ID : 59445919948
Status : Answered
Chosen Option : 1

Q.4 Kasim weighs less than Mohan.
Kasim weighs more than Ajay.
Of the three friends, Ajay weighs the least.

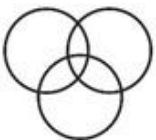
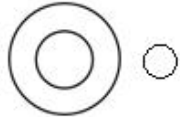
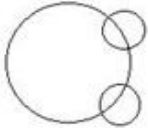

If the first two statements are true, the third statement will be:

- Ans
- 1. Both are correct
 - 2. Both are incorrect
 - 3. Incorrect
 - 4. Correct

Question ID : 59445919939
Status : Answered
Chosen Option : 4

Q.5 Which of the following diagrams indicates the best relation between mammals, bats and whale?

Ans

- 1. 
- 2. 
- 3. 
- 4. 

Question ID : 59445919955
Status : Answered
Chosen Option : 4

Q.6 Answer the question mark:

4, 2, 1, $\frac{1}{2}$, $\frac{1}{4}$, ?

Ans

1. $\frac{1}{3}$

2. $\frac{2}{8}$

3. $\frac{1}{8}$

4. $\frac{2}{3}$

www.HaryanaJobs.in

Question ID : 59445919944

Status : Answered

Chosen Option : 3

Q.7 Fill the correct option in the gap.

AZ, BY, _____, DW, EV.

Ans

1. CX

2. CW

3. CZ

4. CU

Question ID : 59445919947

Status : Answered

Chosen Option : 1

Q.8 Jaya pointing towards a man, told to her friend that this man is the grand father of my daughter, how jaya is related that man?

Ans

1. daughter

2. daughter in law

3. sister

4. mother

Question ID : 59445919951

Status : Answered

Chosen Option : 2

Q.9 If BIRD FLY = AHQC HNA, MAN SING = NBO UKPI then how FROG CROAK will be written in the same pattern?

- Ans 1. EQNF ETQCM
 2. EQNF ETQCO
 3. EQNF ETQDM
 4. EQND ETQMC

Question ID : 59445919945
Status : Answered
Chosen Option : 1

Q.10 If a circle circumference is 25.6 m, how much will be the diameter?

- Ans 1. 9.14 m
 2. 8.14 m
 3. 9.24 m
 4. 8.24 m

Question ID : 59445919941
Status : Answered
Chosen Option : 2

Q.11 Answer the question mark?

frog : skin :: human ?

- Ans 1. liver
 2. brain
 3. lung
 4. eyes

Question ID : 59445919949
Status : Answered
Chosen Option : 3

Q.12 Ramesh have four pencil named as P, Q, R and S, when he arranged them as P is at left side and S is at right side as longest one. Q is in between P and R. Which series is correctly mentioned?

- Ans 1. QSPR
 2. PRSQ
 3. PQRS
 4. QPRS

Question ID : 59445919954
Status : Answered
Chosen Option : 3

Q.13 A wants to go to school from his home, so first he went in north direction for 500 m and moved to his left hand side for 200 m, he again moved to his left for 700 m, in which direction he must go back to reach his home as a shortest distance?

- Ans
- 1. South west
 - 2. North east
 - 3. North west
 - 4. South east

Question ID : 59445919953
Status : Answered
Chosen Option : 1

Q.14 If MAN = NBO, NAME = OBNF, which one represent correctly for SHOP?

- Ans
- 1. TIPN
 - 2. TIQR
 - 3. TIQP
 - 4. TIPQ

Question ID : 59445919943
Status : Answered
Chosen Option : 4

Q.15 Raj indicated towards a photo and said to his friend Rohit, this person is the husband of my father's sister, how that person is related to Raj?

- Ans
- 1. Son
 - 2. Uncle
 - 3. Grandfather
 - 4. Brother

Question ID : 59445919950
Status : Answered
Chosen Option : 2

Q.16 Fill the missing number.

94, 169, 2516, _____, 4936.

- Ans
- 1. 3625
 - 2. 3526
 - 3. 3636
 - 4. 3525

Question ID : 59445919946
Status : Answered
Chosen Option : 1

Q.17 Three are alike in certain way. Find the odd one out.

- Ans 1. NR
 2. TX
 3. GK
 4. XC

Question ID : 59445919957
Status : Answered
Chosen Option : 4

Q.18 Select the odd one from the list:

happiness, cheerful, hatred, blissful

- Ans 1. happiness
 2. blissful
 3. cheerful
 4. hatred

www.HaryanaJobs.in

Question ID : 59445919952
Status : Answered
Chosen Option : 4

Q.19 Find the odds from the given:

Cats = Mew, Crickets = Chirp, Bees = Buzz, Pig = Snort, Donkey = Scream

- Ans 1. Donkey
 2. Pig
 3. Bees
 4. Crickets

Question ID : 59445919938
Status : Answered
Chosen Option : 4

Q.20 Fill the correct alphabets in the missing:

mmn _____ mmnoop _____ oop

- Ans 1. opp, mnn
 2. oop, pmm
 3. oop, mmn
 4. oop, mnn

Question ID : 59445919942
Status : Answered
Chosen Option : 4

Q.1 Product of two positive numbers is 378 and first number is 3 more than the second number. What is the sum of these numbers?

- Ans 1. 39
 2. 33
 3. 45
 4. 21

Question ID : 59445919972
Status : Answered
Chosen Option : 1

Q.2 A school raises its fees by 20 percent. How much approximate discount should they give so as to run the school on no profit and no loss basis?

- Ans 1. 16.50 percent
 2. 20 percent
 3. 16.66 percent
 4. 17 percent

Question ID : 59445919968
Status : Answered
Chosen Option : 3

Q.3 A bag contains 10 paise, 25 paise and 50 paise coins in the ratio of 4 : 2 : 5 amounting to Rs. 34. Find the number of 25 paise coins in the bag.

- Ans 1. 20 coins
 2. 10 coins
 3. 25 coins
 4. 22 coins

Question ID : 59445919961
Status : Answered
Chosen Option : 1

Q.4 How many seconds does a dog take to cover a distance of 400 m, if he runs at a speed of 30 km/hr.?

- Ans 1. 45 sec
 2. 46 sec
 3. 48 sec
 4. 47 sec

Question ID : 59445919976
Status : Answered
Chosen Option : 3

Q.5 X owes Y, Rs. 7440 payable after 1 year 6 months. Also Y owes X, Rs. 7560 payable after 6 months. If they want to settle the account keeping 16 percent per annum as the rate of simple interest, then who should pay and how much?

- Ans
- 1. X pays to Y Rs. 1000
 - 2. Y pays to X Rs. 1000
 - 3. Y pays to X Rs. 2000
 - 4. X pays to Y Rs. 2000

Question ID : 59445919967
Status : Answered
Chosen Option : 1

Q.6 On selling a dining table at 5 percent loss and a sofa set at 15 percent gain, a man gains Rs. 2960. If he sells the dining table at 5 percent gain and the sofa set at 14 percent gain, then he gains Rs. 4000. The actual price of sofa set is:

- Ans
- 1. Rs. 23000
 - 2. Rs. 24000
 - 3. Rs. 25000
 - 4. Rs. 24500

Question ID : 59445919966
Status : Not Answered
Chosen Option : --

Q.7 Find the compound interest on Rs. 20000 at 20 percent per annum for 12 months, compounded half yearly.

- Ans
- 1. Rs. 4000
 - 2. Rs. 4500
 - 3. Rs. 4200
 - 4. Rs. 4400

Question ID : 59445919969
Status : Answered
Chosen Option : 3

Q.8 If p, q, r and s are four consecutive even numbers, then their average is:

- Ans
- 1. $p+3$
 - 2. $p+4$
 - 3. $p+1$
 - 4. $p+2$

Question ID : 59445919964
Status : Answered
Chosen Option : 1

Q.9 The fees of primary section (X) increases by Rs. 40 every year, while the fees of secondary section (Y) increases by Rs. 30 every year. If in 2003, the fees of primary section was Rs. 420 and that of secondary section was Rs. 630, then in which year primary section will have Rs. 40 more fees than the secondary section?

- Ans
- 1. 2025
 - 2. 2020
 - 3. 2028
 - 4. 2030

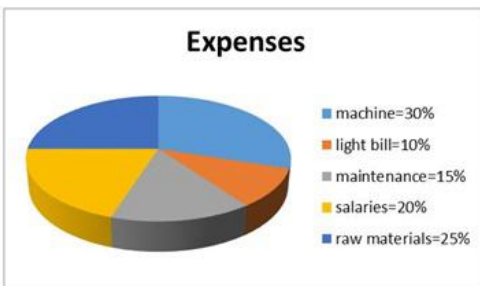
Question ID : 59445919959
Status : Answered
Chosen Option : 3

Q.10 If the side of the square is increased by 10 cm, then the area increases by 500 cm^2 . The side of the square is:

- Ans
- 1. 21 cm
 - 2. 19 cm
 - 3. 25 cm
 - 4. 20 cm

Question ID : 59445919971
Status : Answered
Chosen Option : 2

Q.11 The following diagram shows the expenses of owner of a factory on different heads:



If the earning of the man is Rs. 3,00,000 per month, then the expenditure on salaries is:

- Ans
- 1. Rs. 600000
 - 2. Rs. 6000
 - 3. Rs. 50000
 - 4. Rs. 60,000

Question ID : 59445919977
Status : Answered
Chosen Option : 4

Q.12 The difference between the compound interest and simple interest on a certain sum for 2 years at 10 percent per annum when the interest is compounded annually is Rs. 20. If the interest were compounded half-yearly instead of annually, the difference in two interests best approximated would be:

- Ans
- 1. Rs. 29
 - 2. Rs. 32
 - 3. Rs. 30
 - 4. Rs. 31

Question ID : 59445919970

Status : Answered

Chosen Option : 4

Q.13 In a fruit market there is a discount on apples and pineapples. Therefore, 30 percent of the public purchase pineapples whereas 60 percent of the remaining purchase apples. The left out people purchase other fruits. If the difference between the number of persons who purchase pineapple and those who purchase other fruits is 600, then how many persons came to purchase fruit in the market?

- Ans
- 1. 30000
 - 2. 60000
 - 3. 3000
 - 4. 300000

Question ID : 59445919962

Status : Answered

Chosen Option : 1

Q.14 The quantity of water needed to reduce 18 ml of sanitizer containing 50 percent of alcohol to a lotion containing 30 percent of alcohol is:

- Ans
- 1. 6 ml
 - 2. 10 ml
 - 3. 12 ml
 - 4. 14 ml

www.HaryanaJobs.in

Question ID : 59445919963

Status : Answered

Chosen Option : 3

Q.15 The average speed of a car driver in the onward journey is 25 percent more than that in the return journey. He halts for one hour on reaching the destination. The total time taken for the complete to and fro journey is 9 hours, covering a distance of 400 km. The speed of the driver in the return journey is:

- Ans
- 1. 46 km/hr
 - 2. 44 km/hr
 - 3. 45 km/hr
 - 4. 40 km/hr

Question ID : 59445919975

Status : Answered

Chosen Option : 4

Q.16 LCM of two prime numbers x and y ($x > y$) is 203. The value of $7y - x$ is:

- Ans
- 1. 23
 - 2. 20
 - 3. 19
 - 4. 196

Question ID : 59445919960
Status : Answered
Chosen Option : 4

Q.17 If $2.365 \times 10^x = 0.0002365$, then the value of x is:

- Ans
- 1. -5
 - 2. -3
 - 3. -4
 - 4. -2

Question ID : 59445919958
Status : Answered
Chosen Option : 3

Q.18 X takes thrice as much time as Y takes or four times as much time as Z takes to finish a piece of work. Working together, they can finish the work in 6 days. Y alone can do the same work in:

- Ans
- 1. 14 days
 - 2. 16 days
 - 3. 17 days
 - 4. 15 days

Question ID : 59445919974
Status : Answered
Chosen Option : 3

Q.19 The average marks scored by a student in 6 exams is 96. His highest marks exceed his lowest marks by 12 marks. If these two exams were excluded, the average marks in the remaining exams is 94. The highest marks scored by the student is:

- Ans
- 1. 108
 - 2. 110
 - 3. 105
 - 4. 106

Question ID : 59445919965
Status : Answered
Chosen Option : 4

Q.20 Vikram deposited a certain amount in a fixed deposit at r percent p.a., interest being compounded annually. If the interest accrued for the fourth and fifth years are Rs. 26620 and Rs. 29282, what is the total interest accrued for the first three years?

- Ans
- 1. Rs. 66000
 - 2. Rs. 79860
 - 3. Rs. 72600
 - 4. Rs. 66200

Question ID : 59445919973
Status : Answered
Chosen Option : 3

Section : Hindi Language & Comprehension

Q.1 निम्न शब्दों में से गुणवाचक विशेषण का उदाहरण है:

- Ans
- 1. कैसा
 - 2. चौगुना
 - 3. नुकीला
 - 4. कोई

Question ID : 59445919980
Status : Answered
Chosen Option : 3

Q.2 व्याकरण की दृष्टि से शुद्ध वाक्य का चयन कीजिए:

- Ans
- 1. वहाँ सभी वर्गों के लोग उपस्थित थे।
 - 2. तुम मुझे अपना छोटा सा भाई।
 - 3. दो-दो मील पर एक-एक कुआँ था।
 - 4. प्रत्येक श्रमिक को दो-दो रुपए मिले।

Question ID : 59445919987
Status : Answered
Chosen Option : 1

Q.3 'वह कुल्हाड़ी से वृक्ष काटता है।' में कौन सा कारक है?

- Ans
- 1. सम्बंधकारक
 - 2. सम्प्रदानकारक
 - 3. करणकारक
 - 4. कर्मकारक

Question ID : 59445919985
Status : Answered
Chosen Option : 3

Q.4 विलोम शब्दों का मिलान कीजिए:

- (1) कृपण (क) दाता
- (2) कठोर (ख) सरल
- (3) कुटिल (ग) निष्ठुर
- (4) करुण (घ) कोमल

- Ans
- 1. 1-क, 2-ख, 3-ग, 4-घ
 - 2. 1-क, 2-ग, 3-घ, 4-ख
 - 3. 1-घ, 2-ग, 3-क, 4-ख
 - 4. 1-क, 2-घ, 3-ख, 4-ग

Question ID : 59445919992

Status : Answered

Chosen Option : 4

Q.5 'सुरेश गीत गा रहा था।' उदाहरण है:

- Ans
- 1. पूर्ण भूत का
 - 2. आसन्न भूत का
 - 3. सामान्य भूत का
 - 4. अपूर्ण भूत का

Question ID : 59445919986

Status : Answered

Chosen Option : 4

Q.6 दिए गए पर्याय समूहों में से कौन सा सुमेलित नहीं है?

- Ans
- 1. पक्षी - खग, अण्डज
 - 2. मेघ - निरद, अम्बुद
 - 3. रात्रि - कृष्णा, इला
 - 4. वृक्ष - तरु, गाछ

Question ID : 59445919990

Status : Answered

Chosen Option : 2

Q.7 निम्न में से 'नकुल' का तद्भव शब्द है:

- Ans
- 1. नेउता
 - 2. नेवला
 - 3. नीवू
 - 4. नीम

Question ID : 59445919982

Status : Answered

Chosen Option : 1

Q.8 निम्न में से कौन सा शब्द अपने विभक्ति रहित रूप में दोनों वचनों में समान रहता है?

- Ans
- 1. शाखा
 - 2. साधु
 - 3. बात
 - 4. सड़क

Question ID : 59445919984
Status : Answered
Chosen Option : 3

Q.9 'अत्यावश्यक' उदाहरण है:

- Ans
- 1. यण् संधि
 - 2. अयादि संधि
 - 3. दीर्घ संधि
 - 4. गुण संधि

www.HaryanaJobs.in

Question ID : 59445919978
Status : Answered
Chosen Option : 4

Q.10 निम्न में से पुलिङ्ग शब्द का चयन कीजिए:

- Ans
- 1. लज्जा
 - 2. संस्था
 - 3. मंत्रणा
 - 4. शशि

Question ID : 59445919983
Status : Answered
Chosen Option : 4

Q.11 'शैतान के कान काटना' का अर्थ होगा:

- Ans
- 1. बड़ा झगड़ालू होना
 - 2. छेड़ की बात कहना
 - 3. बहादुरों का सामना होना
 - 4. क्रोध चढ़ना

Question ID : 59445919989
Status : Answered
Chosen Option : 3

Q.12 'गृहागत' में समास है:

- Ans
- 1. अपादानतत्पुरुष
 - 2. कर्मतत्पुरुष
 - 3. करणतत्पुरुष
 - 4. सम्बंधतत्पुरुष

Question ID : 59445919979
Status : Not Answered
Chosen Option : --

Q.13 निम्न में से कौन सा विलोम युग्म सही नहीं है?

- Ans
- 1. उग्र - सौम्य
 - 2. कीर्ति - अपकीर्ति
 - 3. उद्धत - तत्पर
 - 4. उत्तीर्ण - अनुत्तीर्ण

Question ID : 59445919991
Status : Answered
Chosen Option : 3

Q.14 'इक नागिन अरु पंख लगाई' लोकोक्ति की समानार्था लोकोक्ति है:

- Ans
- 1. आ बैल मुझे मार
 - 2. ऊँट के गले में बिल्ली
 - 3. आपा तजे तो हरि को भजे
 - 4. एक करेला दूसरे नीम चढ़ा

Question ID : 59445919988
Status : Answered
Chosen Option : 1

Q.15 'बोतल' किस भाषा का शब्द है?

- Ans
- 1. पश्तो
 - 2. हिंदी
 - 3. पुर्तगाली
 - 4. तुर्की

Question ID : 59445919981
Status : Not Answered
Chosen Option : --

Comprehension:

दिए गये गद्यांश के आधार पर प्रश्न के उत्तर दीजिए।

संसार के मानव समुदाय में वही व्यक्ति स्थान और सम्मान पा सकता है, वही जीवित कहा जा सकता है जिसके हृदय और मस्तिष्क ने समुचित विकास पाया हो और जो अपने व्यक्तित्व द्वारा मनुष्य समाज से रागात्मक के अतिरिक्त बौद्धिक सम्बंध स्थापित कर सकने में समर्थ हो। एक स्वतंत्र व्यक्तित्व के विकास की सबको आवश्यकता है, कारण, बिना इसके न मनुष्य अपनी इच्छा शक्ति और संकल्प को अपना कह सकता है और न अपने किसी कार्य को न्याय-अन्याय की तुला पर तोल ही सकता है।

नारी का मानसिक विकास पुरुषों के मानसिक विकास से भिन्न परंतु अधिक द्रुत, स्वभाव अधिक कोमल और प्रेम-घृणादि भाव अधिक तीव्र तथा स्थायी होते हैं। इन्हीं विशेषताओं के अनुसार उसका व्यक्तित्व विकास पाकर समाज के उन अभावों की पूर्ति करता रहता है जिनकी पूर्ति पुरुष-स्वभाव द्वारा सम्भव नहीं। दोनों के व्यक्तित्व, अपनी पूर्णता में समाज के एक ऐसे रिक्तस्थान को भर देते हैं जिससे विभिन्न सामाजिक सम्बंधों में सामंजस्य उत्पन्न होकर उन्हें पूर्ण कर देता है।

SubQuestion No : 16

Q.16 नारी के व्यक्तित्व में निम्न में से कौन सा गुण नहीं है जिससे वह समाज के उन अभावों की पूर्ति करती है, जो पुरुष नहीं कर सकता?

- Ans
- 1. प्रेम-घृणादि का तीव्र तथा स्थायी भाव
 - 2. दृढ़ एवं कठोर व्यक्तित्व
 - 3. कोमल स्वभाव
 - 4. द्रुत मानसिक विकास

Question ID : 59445919996

Status : Answered

Chosen Option : 2

Comprehension:

दिए गये गद्यांश के आधार पर प्रश्न के उत्तर दीजिए।

संसार के मानव समुदाय में वही व्यक्ति स्थान और सम्मान पा सकता है, वही जीवित कहा जा सकता है जिसके हृदय और मस्तिष्क ने समुचित विकास पाया हो और जो अपने व्यक्तित्व द्वारा मनुष्य समाज से रागात्मक के अतिरिक्त बौद्धिक सम्बंध स्थापित कर सकने में समर्थ हो। एक स्वतंत्र व्यक्तित्व के विकास की सबको आवश्यकता है, कारण, बिना इसके न मनुष्य अपनी इच्छा शक्ति और संकल्प को अपना कह सकता है और न अपने किसी कार्य को न्याय-अन्याय की तुला पर तोल ही सकता है।

नारी का मानसिक विकास पुरुषों के मानसिक विकास से भिन्न परंतु अधिक द्रुत, स्वभाव अधिक कोमल और प्रेम-घृणादि भाव अधिक तीव्र तथा स्थायी होते हैं। इन्हीं विशेषताओं के अनुसार उसका व्यक्तित्व विकास पाकर समाज के उन अभावों की पूर्ति करता रहता है जिनकी पूर्ति पुरुष-स्वभाव द्वारा सम्भव नहीं। दोनों के व्यक्तित्व, अपनी पूर्णता में समाज के एक ऐसे रिक्तस्थान को भर देते हैं जिससे विभिन्न सामाजिक सम्बंधों में सामंजस्य उत्पन्न होकर उन्हें पूर्ण कर देता है।

SubQuestion No : 17

Q.17 मानव समुदाय में कैसा व्यक्ति स्थान और सम्मान नहीं पा सकता है?

- Ans
- 1. जिसके व्यक्तित्व का मनुष्य समाज से बौद्धिक सम्बंध हो।
 - 2. जिसके हृदय और मस्तिष्क ने समुचित विकास पाया हो।
 - 3. जिसमें अपने कार्य को न्याय-अन्याय की तुला पर तोलने की क्षमता न हो।
 - 4. जिसके व्यक्तित्व का मनुष्य समाज से रागात्मक सम्बंध हो।

Question ID : 59445919994

Status : Answered

Chosen Option : 3

Comprehension:

दिए गये गद्यांश के आधार पर प्रश्न के उत्तर दीजिए।

www.HaryanaJobs.in

संसार के मानव समुदाय में वही व्यक्ति स्थान और सम्मान पा सकता है, वही जीवित कहा जा सकता है जिसके हृदय और मस्तिष्क ने समुचित विकास पाया हो और जो अपने व्यक्तित्व द्वारा मनुष्य समाज से रागात्मक के अतिरिक्त बौद्धिक सम्बंध स्थापित कर सकने में समर्थ हो। एक स्वतंत्र व्यक्तित्व के विकास की सबको आवश्यकता है, कारण, बिना इसके न मनुष्य अपनी इच्छा शक्ति और संकल्प को अपना कह सकता है और न अपने किसी कार्य को न्याय-अन्याय की तुला पर तोल ही सकता है।

नारी का मानसिक विकास पुरुषों के मानसिक विकास से भिन्न परंतु अधिक द्रुत, स्वभाव अधिक कोमल और प्रेम-घृणादि भाव अधिक तीव्र तथा स्थायी होते हैं। इन्हीं विशेषताओं के अनुसार उसका व्यक्तित्व विकास पाकर समाज के उन अभावों की पूर्ति करता रहता है जिनकी पूर्ति पुरुष-स्वभाव द्वारा सम्भव नहीं। दोनों के व्यक्तित्व, अपनी पूर्णता में समाज के एक ऐसे रिक्तस्थान को भर देते हैं जिससे विभिन्न सामाजिक सम्बंधों में सामंजस्य उत्पन्न होकर उन्हें पूर्ण कर देता है।

SubQuestion No : 18

Q.18 'द्रुत' का पर्यायवाची नहीं है:

- Ans
- 1. त्वरित
 - 2. विलंब
 - 3. क्षिप्र
 - 4. तीव्र

Question ID : 59445919998

Status : Answered

Chosen Option : 4

Comprehension:

दिए गये गद्यांश के आधार पर प्रश्न के उत्तर दीजिए।

संसार के मानव समुदाय में वही व्यक्ति स्थान और सम्मान पा सकता है, वही जीवित कहा जा सकता है जिसके हृदय और मस्तिष्क ने समुचित विकास पाया हो और जो अपने व्यक्तित्व द्वारा मनुष्य समाज से रागात्मक के अतिरिक्त बौद्धिक सम्बंध स्थापित कर सकने में समर्थ हो। एक स्वतंत्र व्यक्तित्व के विकास की सबको आवश्यकता है, कारण, बिना इसके न मनुष्य अपनी इच्छा शक्ति और संकल्प को अपना कह सकता है और न अपने किसी कार्य को न्याय-अन्याय की तुला पर तोल ही सकता है।

नारी का मानसिक विकास पुरुषों के मानसिक विकास से भिन्न परंतु अधिक द्रुत, स्वभाव अधिक कोमल और प्रेम-घृणादि भाव अधिक तीव्र तथा स्थायी होते हैं। इन्हीं विशेषताओं के अनुसार उसका व्यक्तित्व विकास पाकर समाज के उन अभावों की पूर्ति करता रहता है जिनकी पूर्ति पुरुष-स्वभाव द्वारा सम्भव नहीं। दोनों के व्यक्तित्व, अपनी पूर्णता में समाज के एक ऐसे रिक्तस्थान को भर देते हैं जिससे विभिन्न सामाजिक सम्बंधों में सामंजस्य उत्पन्न होकर उन्हें पूर्ण कर देता है।

SubQuestion No : 19

Q.19 स्वतंत्र व्यक्तित्व के विकास की आवश्यकता क्यों है?

- Ans
- 1. बिना इसके मनुष्य अपनी इच्छा शक्ति और संकल्प को अपना नहीं कह सकता।
 - 2. बिना इसके मनुष्य जीवित नहीं रह सकता।
 - 3. बिना इसके मनुष्य का धार्मिक विकास नहीं हो सकता।
 - 4. बिना इसके मनुष्य का शारिरिक विकास नहीं हो सकता।

Question ID : 59445919995

Status : Answered

Chosen Option : 1

Comprehension:

दिए गये गद्यांश के आधार पर प्रश्न के उत्तर दीजिए।

संसार के मानव समुदाय में वही व्यक्ति स्थान और सम्मान पा सकता है, वही जीवित कहा जा सकता है जिसके हृदय और मस्तिष्क ने समुचित विकास पाया हो और जो अपने व्यक्तित्व द्वारा मनुष्य समाज से रागात्मक के अतिरिक्त बौद्धिक सम्बंध स्थापित कर सकने में समर्थ हो। एक स्वतंत्र व्यक्तित्व के विकास की सबको आवश्यकता है, कारण, बिना इसके न मनुष्य अपनी इच्छा शक्ति और संकल्प को अपना कह सकता है और न अपने किसी कार्य को न्याय-अन्याय की तुला पर तोल ही सकता है।

नारी का मानसिक विकास पुरुषों के मानसिक विकास से भिन्न परंतु अधिक द्रुत, स्वभाव अधिक कोमल और प्रेम-धृणादि भाव अधिक तीव्र तथा स्थायी होते हैं। इन्हीं विशेषताओं के अनुसार उसका व्यक्तित्व विकास पाकर समाज के उन अभावों की पूर्ति करता रहता है जिनकी पूर्ति पुरुष-स्वभाव द्वारा सम्भव नहीं। दोनों के व्यक्तित्व, अपनी पूर्णता में समाज के एक ऐसे रिक्तस्थान को भर देते हैं जिससे विभिन्न सामाजिक सम्बंधों में सामंजस्य उत्पन्न होकर उन्हें पूर्ण कर देता है।

SubQuestion No : 20

Q.20 सामाजिक सम्बंधों में सामंजस्य किस प्रकार उत्पन्न किया जा सकता है?

- Ans
- 1. नारी और पुरुष के स्वभाव के द्वारा
 - 2. नारी और पुरुष के व्यक्तित्व की पूर्णता के द्वारा
 - 3. नारी और पुरुष की मिश्रित शक्ति के द्वारा
 - 4. नारी और पुरुष के मानसिक विकास के द्वारा

Question ID : 59445919997

Status : Answered

Chosen Option : 2

Section : English Language & Comprehension

Q.1 Select the most appropriate option to fill in the blank.

Agatha tried to laugh off the accident _____ you could see that she was very upset.

- Ans
- 1. but
 - 2. even so
 - 3. if
 - 4. yet

Question ID : 59445920005

Status : Answered

Chosen Option : 4

Q.2 Select the most appropriate synonym of the given word.

ENRAGE

- Ans
- 1. oppose
 - 2. frighten
 - 3. anger
 - 4. repel

www.HaryanaJobs.in

Question ID : 59445919999

Status : Answered

Chosen Option : 3

Q.3 Select the most appropriate option to fill in the blank.

When you meet the President, if tea _____ to you, you should politely refuse.

- Ans
- 1. will be offered
 - 2. was being offered
 - 3. was offered
 - 4. is offered

Question ID : 59445920010
Status : Answered
Chosen Option : 4

Q.4 Select the most appropriate option to fill in the blank.

The victims of the accident _____ got better as days went by.

- Ans
- 1. regularly
 - 2. unhurriedly
 - 3. gradually
 - 4. constantly

Question ID : 59445920002
Status : Answered
Chosen Option : 3

Q.5 Select the most appropriate option to fill in the blank.

Why didn't Mary tell me that she _____ a party for me?

- Ans
- 1. had planned
 - 2. had been planned
 - 3. planned
 - 4. was planned

Question ID : 59445920009
Status : Answered
Chosen Option : 2

Q.6 Select the most appropriate option to fill in the blank.

The chewing gum releases nicotine in the body which _____ the need to smoke a cigarette.

- Ans
- 1. shortens
 - 2. shrinks
 - 3. lessens
 - 4. reduces

Question ID : 59445920003
Status : Answered
Chosen Option : 4

Q.7 Select the most appropriate word for the given group of words.

Gather together a large amount or number of material or things over a period of time.

- Ans 1. Amass
 2. Collection
 3. Pile
 4. Store

Question ID : 59445920006
Status : Answered
Chosen Option : 1

Q.8 Select the most appropriate option to fill in the blank.

Pritha doesn't like you. You've got to _____ the fact that you're just not her type.

- Ans 1. get on with
 2. bear with
 3. face up to
 4. carry through

Question ID : 59445920004
Status : Answered
Chosen Option : 2

Q.9 Identify the segment in the sentence which contains a grammatical error.

When Helen got bitten on the leg (A)/ by a poisonous snake, (B)/ she ran out off the house (C)/ screaming. (D)

- Ans 1. When Helen got bitten on the leg
 2. screaming
 3. by a poisonous snake,
 4. she ran out off the house

Question ID : 59445920013
Status : Answered
Chosen Option : 4

Q.10 Identify the segment in the sentence which contains a grammatical error.

Terrorists planted a bomb (A)/ in the Istanbul airport. (B)/ Fortunately it was discovered (C)/ before it was exploded (D).

- Ans 1. Terrorists planted a bomb
 2. Fortunately it was discovered
 3. before it was exploded
 4. in the Istanbul airport

Question ID : 59445920012
Status : Answered
Chosen Option : 3

Q.11 Select the most appropriate antonym of the given word.

OVERDUE

- Ans 1. punctual
 2. schedule
 3. late
 4. well timed

Question ID : 59445920000
Status : Answered
Chosen Option : 4

Q.12 Select the most appropriate word for the given group of words.

The natural home or environment of an animal, plant, or other organism.

- Ans 1. Habitat
 2. Environment
 3. Territory
 4. Domain

Question ID : 59445920007
Status : Answered
Chosen Option : 1

Q.13 Select the most appropriate antonym of the given word.

MYSTERIOUS

- Ans 1. honest
 2. straightforward
 3. plain
 4. calm

Question ID : 59445920001
Status : Answered
Chosen Option : 2

Q.14 Identify the segment in the sentence which contains a grammatical error.

There is a spare bus (A)/ near the auditorium (B)/ in the case(C)/ too many people turn up(D).

- Ans 1. in the case
 2. too many people turn up.
 3. There is a spare bus
 4. near the auditorium

Question ID : 59445920011
Status : Answered
Chosen Option : 1

Q.15 Select the most appropriate option to fill in the blank.

I saw the advertisement and decided to contact the agency for _____ further details.

- Ans
- 1. an
 - 2. the
 - 3. no article
 - 4. a

Question ID : 59445920008

Status : Answered

Chosen Option : 2

Comprehension:

Read the passage below and answer the following question.

What colour makes tree frogs so vibrantly green? The blue beneath their skin, of course. Those are the findings of a new study, which reveal that a unique protein complex that reflects blue light is responsible for an unusual green—helping them blend in to their surroundings and evade predators.

Scientists came across the complex while trying to understand how hundreds of tree frog species can accumulate large amounts of a toxic green pigment known as biliverdin. In most animals, biliverdin is so dangerous that it is immediately broken down or excreted. In humans, it forms when red blood cells break down and causes the greenish colour sometimes seen in bruises. But in these frogs, it builds up to what should be intolerable levels.

When the researchers isolated the pigment in eight species, they found it stayed stable—and innocuous—by binding with another protein called aserpine. The biliverdin-serpine complex was found throughout the body, in the lymph, muscles, and skin. And because frog skin is mostly yellow, it looks bright green wherever the protein is present.

SubQuestion No : 16

Q.16 What reflects blue light?

- Ans
- 1. A protein complex
 - 2. The blue skin of the frog
 - 3. The surroundings
 - 4. The trees the frogs live in

Question ID : 59445920015

Status : Answered

Chosen Option : 1

Comprehension:

Read the passage below and answer the following question.

What colour makes tree frogs so vibrantly green? The blue beneath their skin, of course. Those are the findings of a new study, which reveal that a unique protein complex that reflects blue light is responsible for an unusual green—helping them blend in to their surroundings and evade predators.

Scientists came across the complex while trying to understand how hundreds of tree frog species can accumulate large amounts of a toxic green pigment known as biliverdin. In most animals, biliverdin is so dangerous that it is immediately broken down or excreted. In humans, it forms when red blood cells break down and causes the greenish colour sometimes seen in bruises. But in these frogs, it builds up to what should be intolerable levels.

When the researchers isolated the pigment in eight species, they found it stayed stable—and innocuous—by binding with another protein called aserpine. The biliverdin-serpine complex was found throughout the body, in the lymph, muscles, and skin. And because frog skin is mostly yellow, it looks bright green wherever the protein is present.

SubQuestion No : 17

Q.17 Which word in the text can be an opposite of 'toxic'?

- Ans
- 1. Intolerable
 - 2. Innocuous
 - 3. Dangerous
 - 4. Stable

Question ID : 59445920019

Status : Answered

Chosen Option : 2

Comprehension:

Read the passage below and answer the following question.

What colour makes tree frogs so vibrantly green? The blue beneath their skin, of course. Those are the findings of a new study, which reveal that a unique protein complex that reflects blue light is responsible for an unusual green—helping them blend in to their surroundings and evade predators.

Scientists came across the complex while trying to understand how hundreds of tree frog species can accumulate large amounts of a toxic green pigment known as biliverdin. In most animals, biliverdin is so dangerous that it is immediately broken down or excreted. In humans, it forms when red blood cells break down and causes the greenish colour sometimes seen in bruises. But in these frogs, it builds up to what should be intolerable levels.

When the researchers isolated the pigment in eight species, they found it stayed stable—and innocuous—by binding with another protein called aserpine. The biliverdin-serpine complex was found throughout the body, in the lymph, muscles, and skin. And because frog skin is mostly yellow, it looks bright green wherever the protein is present.

SubQuestion No : 18

Q.18 In humans, what happens to biliverdin?

- Ans
- 1. It breaks down red blood cells
 - 2. It is seen in bruises
 - 3. It gets accumulated and becomes toxic
 - 4. It is broken down or excreted

Question ID : 59445920016

Status : Answered

Chosen Option : 2

Comprehension:

Read the passage below and answer the following question.

What colour makes tree frogs so vibrantly green? The blue beneath their skin, of course. Those are the findings of a new study, which reveal that a unique protein complex that reflects blue light is responsible for an unusual green—helping them blend in to their surroundings and evade predators.

Scientists came across the complex while trying to understand how hundreds of tree frog species can accumulate large amounts of a toxic green pigment known as biliverdin. In most animals, biliverdin is so dangerous that it is immediately broken down or excreted. In humans, it forms when red blood cells break down and causes the greenish colour sometimes seen in bruises. But in these frogs, it builds up to what should be intolerable levels.

When the researchers isolated the pigment in eight species, they found it stayed stable—and innocuous—by binding with another protein called aserpine. The biliverdin-serpine complex was found throughout the body, in the lymph, muscles, and skin. And because frog skin is mostly yellow, it looks bright green wherever the protein is present.

SubQuestion No : 19

Q.19 The biliverdin is blue, but the frog appears bright green because:

- Ans
- 1. The serpine is yellow
 - 2. The biliverdin-serpine complex is green
 - 3. The frog takes its colour from the leaves.
 - 4. The frog is yellow and combines with blue from biliverdin

Question ID : 59445920018

Status : Answered

Chosen Option : 4

Comprehension:

Read the passage below and answer the following question.

www.HaryanaJobs.in

What colour makes tree frogs so vibrantly green? The blue beneath their skin, of course. Those are the findings of a new study, which reveal that a unique protein complex that reflects blue light is responsible for an unusual green—helping them blend in to their surroundings and evade predators.

Scientists came across the complex while trying to understand how hundreds of tree frog species can accumulate large amounts of a toxic green pigment known as biliverdin. In most animals, biliverdin is so dangerous that it is immediately broken down or excreted. In humans, it forms when red blood cells break down and causes the greenish colour sometimes seen in bruises. But in these frogs, it builds up to what should be intolerable levels.

When the researchers isolated the pigment in eight species, they found it stayed stable—and innocuous—by binding with another protein called aserpine. The biliverdin-serpine complex was found throughout the body, in the lymph, muscles, and skin. And because frog skin is mostly yellow, it looks bright green wherever the protein is present.

SubQuestion No : 20

Q.20 Why does biliverdin accumulation in frogs not become dangerous?

- Ans
- 1. It helps them evade predators
 - 2. It is washed out by the body
 - 3. It combines with a nontoxic protein called serpine
 - 4. It is present throughout the body

Question ID : 59445920017

Status : Answered

Chosen Option : 3

Q.1 Which among the following uses registers to hold data that is being processed?

- Ans
- 1. Central processing unit
 - 2. Control unit
 - 3. Memory unit
 - 4. Arithmetic Logic Unit

Question ID : 59445920023
Status : Answered
Chosen Option : 2

Q.2 Which shortcut key from the following can be used to decrease the font to the next smaller point size available in the Font size list box in Microsoft Word?

- Ans
- 1. Ctrl + Shift + >
 - 2. Ctrl + Shift + +
 - 3. Ctrl + Shift + F
 - 4. Ctrl + Shift + <

Question ID : 59445920029
Status : Answered
Chosen Option : 4

Q.3 Which of the following shortcut key is used to insert hyperlink in MS-Excel?'

- Ans
- 1. Ctrl+ K
 - 2. Ctrl+ V
 - 3. Alt+ V
 - 4. Alt+ K

Question ID : 59445920027
Status : Not Answered
Chosen Option : --

Q.4 _____ is an operating system, in which each program can control CPU for as long as it needs it.

- Ans
- 1. Real time operating system
 - 2. Single user operating system
 - 3. Multi user operating system
 - 4. Cooperative multitasking operating system

Question ID : 59445920033
Status : Answered
Chosen Option : 4

Q.5 A _____ is a pre-formatted container on a slide for content (text, graphics, or video) in MS PowerPoint?

- Ans
- 1. Cascade
 - 2. Watermark
 - 3. Placeholder
 - 4. Macros

Question ID : 59445920031
Status : Answered
Chosen Option : 3

Q.6 In MS PowerPoint, the shortcut Ctrl + M helps the user to?

- Ans
- 1. Open a new blank presentation
 - 2. Apply bold to the selected text
 - 3. Centre aligns the current selection
 - 4. Insert a new slide

Question ID : 59445920032
Status : Not Answered
Chosen Option : --

Q.7 What is the correct way of typing a formula in Microsoft Excel 2019?

- Ans
- 1. It should always begin with an * (ampersand) sign
 - 2. It should always begin with an = (equal) sign
 - 3. It should always begin with an # (hash) sign
 - 4. It should always begin with an - (minus) sign

Question ID : 59445920025
Status : Answered
Chosen Option : 2

Q.8 Which among the following features enables computers to perform multiple tasks at the same time?

- Ans
- 1. Automation
 - 2. Speed
 - 3. Versatility
 - 4. Diligence

Question ID : 59445920020
Status : Answered
Chosen Option : 3

Q.9 According to Information Technology Act 2000, Which of the following is not included in the definition of Information?

- Ans 1. Operating System
 2. Data bases
 3. Codes
 4. Software

Question ID : 59445920036
Status : Answered
Chosen Option : 1

Q.10 Which of the following is the program that interprets commands given by the user?

- Ans 1. Communications
 2. Shell
 3. Thread
 4. File modification

www.HaryanaJobs.in

Question ID : 59445920034
Status : Answered
Chosen Option : 1

Q.11 A _____ is an expensive and a large computer capable of processing data simultaneously for large number of users.

- Ans 1. Analog computer
 2. Special purpose computer
 3. Mainframe computer
 4. Hybrid computer

Question ID : 59445920022
Status : Answered
Chosen Option : 4

Q.12 Which of the following is a national citizen engagement platform where people can share ideas in the matters of policy and governance?

- Ans 1. MyGov
 2. PayGov
 3. Digital locker
 4. Aadhar

Question ID : 59445920038
Status : Answered
Chosen Option : 1

Q.13 How can we add a Chart to the presentation in MS PowerPoint?

- Ans
- 1. Insert > Illustration > Chart
 - 2. Design > Illustration > chart
 - 3. Insert > Macros > Chart
 - 4. Layout > object > chart

Question ID : 59445920030
Status : Not Answered
Chosen Option : --

Q.14 Which are the correct steps to use mail merge in MS Word?

- Ans
- 1. Mailing Tab > Preview group > Start mail merge
 - 2. Home Tab > write & insert fields group > mail merge
 - 3. Design Tab > Draw borders group > mail merge
 - 4. Mailing Tab > start mail merge group > Start mail merge

Question ID : 59445920028
Status : Not Answered
Chosen Option : --

Q.15 Which among the following is false with respect to First generation of computers?

- Ans
- 1. Generates large amount of heat
 - 2. Use of vacuum tubes to make circuits
 - 3. More reliable and less prone to hardware failure
 - 4. Use of machine language and symbols in instructions

Question ID : 59445920021
Status : Answered
Chosen Option : 3

Q.16 _____ Reference change when a formula is copied to another cell in MS EXCEL.

- Ans
- 1. Static reference
 - 2. Relative reference
 - 3. Absolute Reference
 - 4. Anonymous reference

Question ID : 59445920026
Status : Answered
Chosen Option : 3

Q.17 Which among the following memory is used in Digital camera?

- Ans
- 1. Virtual memory
 - 2. Flash memory
 - 3. Main memory
 - 4. Cache memory

Question ID : 59445920024
Status : Answered
Chosen Option : 2

Q.18 The post-industrial society is designated as?

- Ans
- 1. Modern Society
 - 2. Information Society
 - 3. Technology Society
 - 4. Agricultural Society

Question ID : 59445920035
Status : Answered
Chosen Option : 2

Q.19 Which of the following is not a feature of Digital Signature?

- Ans
- 1. Redundancy
 - 2. Non- Repudiation
 - 3. Integrity
 - 4. Authentication

www.HaryanaJobs.in

Question ID : 59445920037
Status : Answered
Chosen Option : 2

Q.20 Which among the following is not a use of Bluetooth?

- Ans
- 1. Wireless control and communication between mobile and hands-free headsets
 - 2. To connect web servers with the search engines
 - 3. Bridge multiple industrial Ethernet networks
 - 4. With Object Exchange (OBEX), to transfer files, contact details and calendar appointments between multiple devices

Question ID : 59445920039
Status : Answered
Chosen Option : 2