



Participant ID:	HaryanaJobs.in
Participant Name:	
Test Center Name:	iON Digital Zone iDZ 1 GT Karnal Road
Test Date:	14/11/2018
Test Time:	8:30 AM - 10:30 AM
Subject:	TGT SOCIAL SCIENCE FEMALE

Section : Mental Ability

Q.1 Study the following information carefully and answer the given questions.

For a recruitment process in an ACCOUNTING organization, the candidates need to possess the following qualifications criteria:

- He/she must be a graduate in commerce with at least 60% marks.
- He/she must be at least 24 years of age and not more than 40 years as on 1-7-2016.
- He/she must have a post-qualification work experience of at least 2 years.
- He/she should have secured 55% marks in the selection process.

However, if the candidate fulfills the above-mentioned criteria except:

(A) at (i), and if the candidate is not a graduate in commerce but has a post-graduation degree in finance with minimum of 60% marks, he/she should be referred to the Finance Manager of the organization.

(B) at (iii), and if the candidate fulfills all the eligibility criteria of post-qualification work experience but has secured 75% marks in the selection process, he/she may be referred to the Trainee Accountant.

Based on the above information, study carefully whether following candidates are eligible for the recruitment process and mark your answer as follows. You are not to assume anything other than the information provided in each question. All the cases are given to you as on 1-7-2016.

Snehilata's date of birth is 6.2.1990. She has done her graduation and post-graduation in Commerce and secured 61% and 63% marks respectively. She has a post-qualification work experience as a Senior Accountant of 3.5 years. She has secured 58.5% marks in the selection process.

Ans  1. The candidate is to be selected

2.

The candidate may be referred to the Finance Manager

3. The candidate is not to be selected

4.

The candidate may be referred to the Trainee Accountant

Question ID : 1626538

Q.2 Select the odd pair from the following.

Ans  1. Austria : Beijing

2. Canada : Ottawa

3. Cuba : Havana

4. Japan : Tokyo

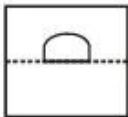
Question ID : 1626531

Q.3 If the transparent paper is folded at the dotted line, what will be the resulting figure?

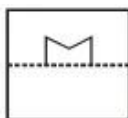


Ans

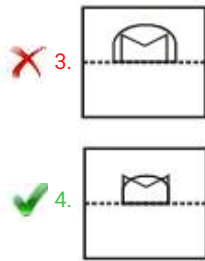
1.



2.



Question ID : 16265310



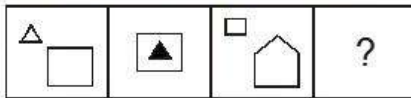
Q.4 Find the odd pair of numerical that does NOT hold same relation as the rest.

Question ID : 16265318


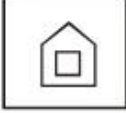
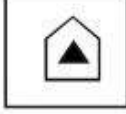

- Ans
- ✗ 1. 9 - 3
  - ✗ 2. 8 - 4
  - ✓ 3. 10 - 3
  - ✗ 4. 6 - 6

Q.5 What will come in place of question mark in the below series?

Question ID : 1626535



Ans





- ✗ 1. 
- ✗ 2. 
- ✗ 3. 
- ✓ 4. 

Q.6 Spot the option figure that has the below figure embedded as part of it.

Question ID : 1626537



Ans

- ✗ 1. 
- ✗ 2. 
- ✗ 3. 
- ✓ 4. 

Q.7

Identify the most appropriate option.

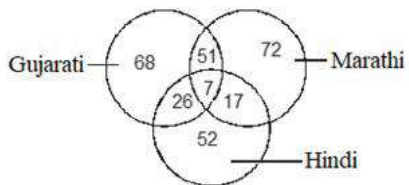
Question ID : 16265311

A computer must have:

- Ans
- 1. Processor
  - 2. Printer
  - 3. Gaming consoles
  - 4. CD/DVD player

Q.8 Study the following Venn diagram carefully and answer the question.

Question ID : 16265312



How many persons speak only two languages?

- Ans
- 1. 68
  - 2. 94
  - 3. 72
  - 4. 52

Q.9 If A stands for +, B stands for -, C stands for  $\times$ , then what is the value of  $(6C5)A(14C2)B4$ ?

Question ID : 16265314

- Ans
- 1. 34
  - 2. 27
  - 3. 62
  - 4. 54

Q.10 The total of the ages of Anjali, Ankitha and Banu is 60 years. What was the total of their ages four years ago?

Question ID : 16265316

- Ans
- 1. 50 years
  - 2. 48 years
  - 3. 75 years
  - 4. 62 years

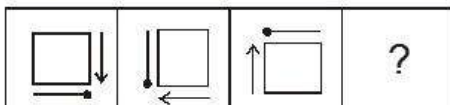
Q.11 Choose the words-pair in which the words are differently related than in other pairs of words.

Question ID : 16265317

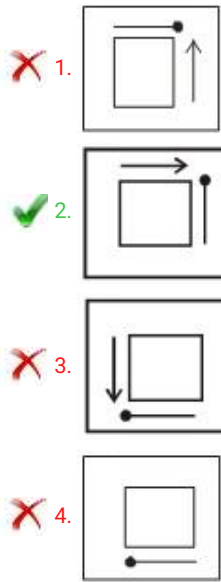
- Ans
- 1. Unhappy : Pleasure
  - 2. Moist : Drench
  - 3. Wish : Desire
  - 4. Error : Blunder

Q.12 What will come in place of question mark in the below series?

Question ID : 1626534



Ans



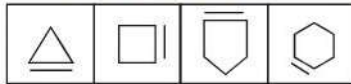
Q.13 Sadhana introduces Ramu as "The son of the brother of her father's wife". How is Ramu related to Sadhana?





Question ID : 16265313

- Ans  1. Son  
 2. Cousin  
 3. Father  
 4. Uncle

Q.14 Identify the image from options that is similar to the below set of figures.

Question ID : 1626532



- Ans  1.   
 2.   
 3.   
 4. 

Q.15 What would be the next term in the below number series?

Question ID : 16265319

2, 8, 18, 32, 50, 72, ?

- Ans  1. 100  
 2. 98  
 3. 115  
 4. 110

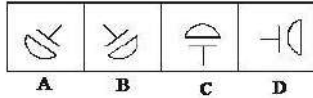
Q.16 You encounter an angry customer at shopping mall quarreling with the staff of the store for unhygienic products. What will be your most appropriate step?

Question ID : 1626539

- Ans  1. Carry on with your work  
 2. Throw out all the products of the mall  
 3.  
 Bring the information to the notice of the mall authorities to take necessary action about hygiene of their products  
 4.  
 Make an agitation and provoke all the customers to walk out of store

Q.17 Given below are a few images. Identify the odd image among the options.

Question ID : 1626533



- Ans  1. A  
 2. B  
 3. C  
 4. D

Q.18 What would be the next term in the below series of terms?

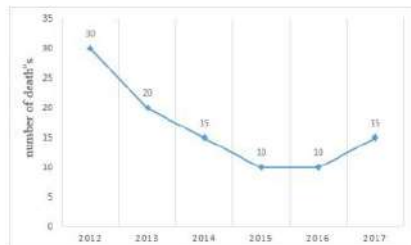
Question ID : 16265320

WL, TO, PS, KX, ?

- Ans  1. GF  
 2. DK  
 3. ED  
 4. EL

Q.19 The following graph shows information about the death rate because of dengue fever in a tribal village 'Z' for the past 6 years.

Question ID : 1626536



During which period the death rate due to dengue fever has increased?

- Ans  1. 2014-2015  
 2. 2012-2014  
 3. 2015-2016  
 4. 2016-2017

Q.20 In an examination, a student scores 4 marks for every correct answer and loses 1 mark for every wrong answer. If he attempts all 80 questions and secures 200 marks, the number of questions he attempts correctly is:

Question ID : 16265315

- Ans  1. 74  
 2. 62  
 3. 56  
 4. 50

Q.1 The National Authority Chemicals Weapons Convention (NACWC) is \_\_\_\_\_.

Question ID : 16265339

Ans  1.

an office in the Cabinet Secretariat, Government of India

2.

an office under the Prime Minister's Office (PMO)

3.

part of the Department of Defence Production

4. an autonomous authority

Q.2 In which year did the British East India Company acquire a charter from Queen Elizabeth I granting it the sole right to trade with the east?

Question ID : 16265321

Ans  1. 1600

2. 1612

3. 1628

4. 1598

Q.3 Who won the 'Player of the Final' title in the ACC Women's Asia Cup T20 2018 cricket tournament?

Question ID : 16265327

Ans  1. Harmanpreet Kaur

2. Rumana Ahmed

3. Fahima Khatun

4. Jhulan Goswami

Q.4 Which of the following is NOT true with reference to the NITI Aayog?

Question ID : 16265340

Ans  1. It replaced the Planning Commission.

2.

It provides policy inputs to the Government of India.

3. It was formed on January 1, 2015.

4. It was formed by an Act of Parliament.

Q.5 The contraction of human heart chambers is called \_\_\_\_\_.

Question ID : 16265335

Ans  1. Systole

2. Heartbeat

3. Stroke

4. Diastole

Q.6 In which year did James Watson and Francis Crick discovered the double-helix structure of Deoxyribonucleic acid (DNA)?

Question ID : 16265338

Ans  1. 1949

2. 1960

3. 1955

4. 1953

Q.7 The \_\_\_\_\_ river forms the traditional boundary between North India and South India.

Question ID : 16265332

Ans  1. Godavari

- 2. Tapti
- 3. Narmada
- 4. Krishna

Q.8 The Financial Stability and Development Council is chaired by the \_\_\_\_\_.

Question ID : 16265334

- Ans
- 1. Finance Secretary
  - 2. Governor, Reserve Bank of India
  - 3. Chief Economic Advisor
  - 4. Union Finance Minister

Q.9 The Prime Minister's Science, Technology and Innovation Advisory Council (PM-STIAC) consisting of members was constituted on 28th August 2018.

Question ID : 16265337

- Ans
- 1. 15
  - 2. 11
  - 3. 10
  - 4. 21

Q.10 The Mauryan pillar found at Sarnath, popularly known as the Lion Capital, did NOT contain the figure of \_\_\_\_\_.

Question ID : 16265330

- Ans
- 1. Elephant
  - 2. Cow
  - 3. Horse
  - 4. Bull

Q.11 'Mission Retro-Fitment' is related to the Union Ministry of \_\_\_\_\_.

Question ID : 16265323

- Ans
- 1. Agriculture and Farmers Welfare
  - 2. Railways
  - 3. Drinking Water and Sanitation
  - 4. Defence

Q.12 Which of the following is an example of homogeneous mixtures?

Question ID : 16265336

- Ans
- 1. Oil and Water
  - 2. Sugar in water
  - 3. Salt and Sulphur
  - 4. Sodium chloride and Iron filings

Q.13 The Carnatic Wars were fought between \_\_\_\_\_.

Question ID : 16265322

- Ans
- 1. the British and the Marathas
  - 2. the British and the French
  - 3. the Mughals and the British
  - 4. the French and the Portuguese

Q.14 Who among the following is a leading Indian Boxer?

Question ID : 16265328

- Ans
- 1. Pawan Kumar
  - 2. Sandeep Tomar
  - 3. Sathish Kumar Sivalingam
  - 4. Amit Panghal

Q.15 The casting of \_\_\_\_\_ statues was popular at all the major centres of the Indus Valley Civilisation.

Question ID : 16265329

- Ans
- 1. Bronze
  - 2. Wood
  - 3. Silver
  - 4. Iron

Q.16 The rank of the Chief of the Army Staff in India is \_\_\_\_\_.

Question ID : 16265326

- Ans
- 1. Lieutenant General
  - 2. Major General
  - 3. Field Marshal
  - 4. General

Q.17 Match the following types of soil with its widely known feature.

Question ID : 16265331

f. Black	q. common salt is obtained
d. Laterite	t. Infertile
a. Saline	k. prevalent in Deccan Plateau
m. Arid	p. used for cutting bricks

- Ans
- 1. f-k, d-p, a-q, m-t
  - 2. d-t, f-k, a-p, m-q
  - 3. m-q, d-p, f-k, a-t
  - 4. a-t, f-q, d-p, m-k

Q.18 One single health insurance policy that takes care of the hospitalization expenses of the entire family is commonly referred to as \_\_\_\_\_.

Question ID : 16265333

- Ans
- 1. Family Plan
  - 2. Family Floater
  - 3. Group Mediciclaim
  - 4. Family Umbrella

Q.19 What is the name of the Government healthcare scheme that was renamed in November 2016, for making available generic medicines at affordable prices?

Question ID : 16265324

- Ans
- 1. Pradhan Mantri Jan Aushadhi Mission
  - 2. Pradhan Mantri Bhartiya Janaushadhi Pariyojana
  - 3. Pradhan Mantri Bhartiya Aushadhi Yojana
  - 4. Pradhan Mantri Aushadhi Yojana

Q.20 Who was holding the additional charge of Chairperson of the National Commission for Women after Smt. Lalitha Kumaramangalam demitted office on 28-September-2017?

Question ID : 16265325



- Ans  1. Ms. Mamta Sharma  
 2. Dr. Girija Vyas  
 3. Ms. Rekha Sharma  
 4. Ms. Sushma Sahu

Section : Arithmetic Ability

Q.1 The value of  $\frac{(625)^{6.25} \times (25)^{2.6}}{(5^4)^{6.75} \times (\sqrt{5})^{2.4}} \times \frac{(0.49)^4 \times (0.343)^4}{(0.2401)^5}$  is:

Question ID : 16265341

- Ans  1. 25  
 2. 0.35  
 3. 175  
 4. 0.25

Q.2 The value of  $\frac{7}{5-\frac{3}{2}} \times \frac{4-\frac{3}{2}}{3-\frac{2}{2}} - \frac{5}{14}$  of  $\left[ \frac{3\frac{1}{2}-2\frac{1}{2}}{2\frac{5}{21}-2} \text{ of } 1\frac{1}{5} + \frac{7}{10} \right]$  lies between:

Question ID : 16265343

- Ans  1.  $4\frac{1}{2}$  and  $5\frac{1}{2}$   
 2.  $2\frac{1}{2}$  and  $3\frac{1}{2}$   
 3.  $3\frac{1}{2}$  and  $4\frac{1}{2}$   
 4.  $1\frac{1}{2}$  and  $2\frac{1}{2}$

Q.3 A dealer marks an article 40% above its cost price and allows 12% discount on its marked price. Later on, he sells it by giving another cash discount of ₹ 39 and still he earns a profit of 18%. What is the cost price of the article?

Question ID : 16265348

- Ans  1. ₹ 700  
 2. ₹ 680  
 3. ₹ 720  
 4. ₹ 750

Q.4 There are some children in a camp and their average weight is 24 kg. If 5 children of average weight 18 kg join the camp or if 10 children of average weight  $24\frac{3}{4}$  kg leave the camp, the average weight in both cases remains equal. Initially, what is the number of children in the camp?

Question ID : 16265349

- Ans  1. 18  
 2. 16  
 3. 12  
 4. 15

Q.5 16 L. of a solution containing 15% acid are mixed with 20 L. of another solution containing 16% acid. 4 L. of water was then mixed with the resulting solution. What is the percentage of water in the final solution?

Question ID : 16265346

- Ans  1. 86  
 2. 82  
 3. 80  
 4. 88

Q.6

Question ID : 16265342

The value of  $\left(\sqrt{1 + \frac{\sqrt{3}}{2}} + \sqrt{1 - \frac{\sqrt{3}}{2}}\right) \div \frac{1 + \sqrt{1 - \frac{2}{4}}}{\frac{\sqrt{3}}{2}}$  is:

- Ans
- 1.  $\sqrt{3}$
  - 2.  $2\sqrt{3}$
  - 3.  $\frac{1}{2}$
  - 4. 1

Q.7 A can do a piece of work in 10 days, B can do it in 15 days and C can do it in 20 days. They started the work together. A leaves off after 2 days and B leaves off after 4 days from the beginning. C will complete the remaining work in:

Question ID : 16265357

- Ans
- 1.  $10\frac{2}{3}$  days
  - 2.  $6\frac{2}{3}$  days
  - 3.  $5\frac{1}{3}$  days
  - 4.  $5\frac{2}{3}$  days

Q.8 The ratio of speeds of A and C is 5 : 11. B covered a distance of 450 km in 6 hours. The speed of A is two-thirds that of B. The distance (in km) covered by C in 3.6 hours is:

Question ID : 16265356

- Ans
- 1. 270
  - 2. 396
  - 3. 290
  - 4. 388

Q.9 The ratio of mean proportional between 0.8 and 9.8 and the third proportional to 0.7 and 2.8 is:

Question ID : 16265350

- Ans
- 1. 1 : 4
  - 2. 2 : 7
  - 3. 2 : 3
  - 4. 1 : 3

Q.10 A and B can do a piece of work in 20 days. After working for 5 days together, C assisted them and the work was completed in next 10 days. If C does as much work in 4 days as B does in 3 days, how long B and C together will take to complete the same work?

Question ID : 16265358

- Ans
- 1.  $13\frac{1}{3}$  days
  - 2.  $17\frac{1}{7}$  days
  - 3.  $13\frac{2}{3}$  days
  - 4.  $17\frac{2}{7}$  days

Q.11 The compound interest on a certain sum for 2 years at 10% per annum, interest compounded yearly, is ₹ 6,300. What will be the compound interest on the same sum for  $3\frac{1}{4}$  years at the same rate? (nearest to one ₹)

Question ID : 16265352

- Ans
- 1. ₹ 10,892
  - 2. ₹ 10,882

3. ₹ 10,829

4. ₹ 10,928

Q.12 Let  $x$  be the greatest number which when divides 1288, 8139, 17200 the remainder in each case is the same. What is the sum of digits of  $x$ ?

Question ID : 16265344

Ans  1. 11

2. 8

3. 6

4. 5

Q.13 The ratio of lateral surface area of a cone and that of hemisphere with equal height and equal radius is:

Question ID : 16265354

Ans  1. 2 : 3

2. 1 : 2

3.  $2 : \sqrt{3}$

4.  $1 : \sqrt{2}$

Q.14 The monthly incomes of A and B are in the ratio 6 : 5 and expenses are in the ratio 9 : 8. If the income of B is equal to the expenses of A, then the ratio of savings of A and B is:

Question ID : 16265351

Ans  1. 9 : 5

2. 5 : 9

3. 4 : 3

4. 3 : 4

Q.15 If goods are purchased for ₹ 480 and one-third are sold at a loss of 10%, then at what percentage profit should the remaining be sold so as to gain 20% on the whole transaction?

Question ID : 16265347

Ans  1. 42

2. 28

3. 40

4. 35

Q.16 The area of field in the shape of a trapezium is equal to the area of another field in the shape of an equilateral triangle. If the parallel sides of the first field are 70 m and 170 m and non-parallel sides are 130 m each, then the side (in m) of the triangular field is:

Question ID : 16265353

Ans  1.  $80\sqrt{27}$

2.  $40\sqrt{27}$

3.  $40(27)^{\frac{1}{4}}$

4.  $80(27)^{\frac{1}{4}}$

Q.17 The rate at which water flows in a river is  $33\frac{1}{3}\%$  of the speed of a boat in still water. If the boat travels down the river for  $3\frac{1}{2}$  hours and then returns back the river for 3 hours, it will be 33.6 km short of its starting point. What is the speed (in km) of the boat in still water?

Question ID : 16265355

Ans  1. 10.8

2. 13.2

3. 12.8

4. 12.6

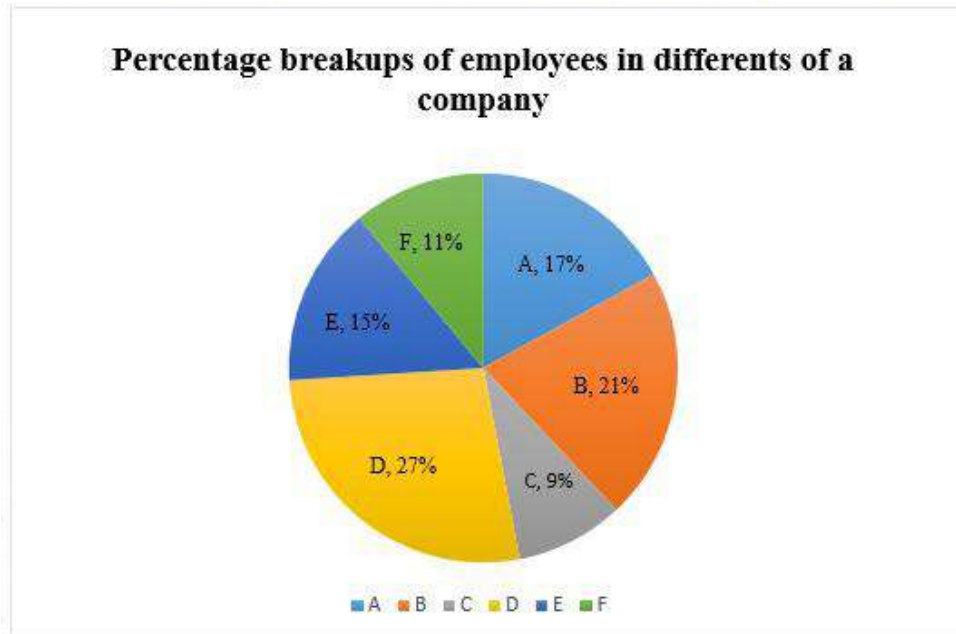
Q.18 In a class 60% of the students are boys and rest are girls. If 35% of the number of boys and 60% of the number of girls get scholarship and the number of girls who do not get scholarship is 32, then the number of boys who do not get scholarship is:

Question ID : 16265345

- Ans  1. 78  
 2. 60  
 3. 84  
 4. 42

Comprehension:

Study the following Pie-chart and table and answer the questions.



Total number of employees = 6300

**Ratio of Males and Female employees**

Department	Male	Female
A	11	6
B	10	11
C	4	3
D	13	14
E	7	8
F	5	6

SubQuestion No : 19

Q.1 The ratio of the number of male employees in departments B, D and E together to the number of female employees in A, E and F together is:

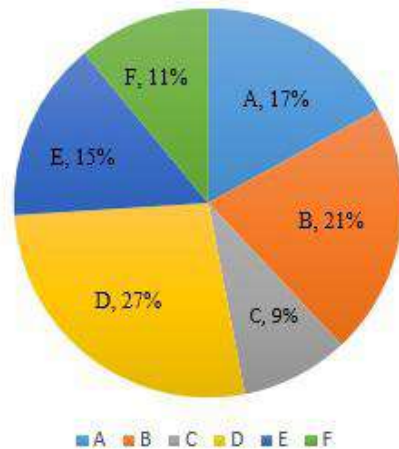
Question ID : 16265360

- Ans  1. 31 : 21  
 2. 3 : 2  
 3. 3 : 4  
 4. 63 : 43

Comprehension:

Study the following Pie-chart and table and answer the questions.

**Percentage breakups of employees in different departments of a company**



Total number of employees = 6300

**Ratio of Males and Female employees**

Department	Male	Female
A	11	6
B	10	11
C	4	3
D	13	14
E	7	8
F	5	6

SubQuestion No : 20

Q.2  
0 Total number of employees in department E is what percent less than the total number of female employees in departments C and D?

Question ID : 16265361

- Ans
- 1. 15
  - 2. 19
  - 3. 16
  - 4. 14

Section : General English

Q.1 Select the most appropriate synonym of the given word.

Question ID : 16265371

IMMUNE

- Ans
- 1. vulnerable
  - 2. resistant

3. susceptible

4. helpless

Q.2 Select the most appropriate option to fill in the blank.

Question ID : 16265367

The communists lost \_\_\_\_\_ the conservatives \_\_\_\_\_ the first free elections \_\_\_\_\_ Croatia.

Ans  1. in ; by ; at

2. for ; with ; in

3. by ; to ; for

4. to ; in ; in

Q.3 Select the most appropriate option to fill in the blank.

Question ID : 16265365

I was working on my Mathematics \_\_\_\_\_ Taru and Kavya were playing chess.

Ans  1. instead

2. however

3. meanwhile

4. therefore

Q.4 Select the option which is NOT an antonym of another word by way of adding the prefix 'dis-'.

Question ID : 16265373

Ans  1. disqualify

2. disinterested

3. disregard

4. distinguished

Q.5 Select the most appropriate option to fill in the blank.

Question ID : 16265362

Jayati and Madhav were wearing their raincoats. Therefore, when the rain came, they \_\_\_\_\_ wet.

Ans  1. do not get

2. didn't get

3. haven't got

4. aren't getting

Q.6 From the options given below choose the sentence that is NOT correct.

Question ID : 16265376

Ans  1.

The robot, developed by Diligent Robotics has gone into service at three hospitals in Texas as part of pilot programme.

2.

Diligent believes Moxi can free up nursing staff for other duties.

3.

Moxi is a "socially intelligent" hospital robot that can autonomously pick up and deliver medical supplies.

4.

Moxi take on non-patient-facing logistical tasks and reduce trips by nurses to supply rooms,

Q.7 Select the most appropriate option to fill in the blank.

Question ID : 16265363

Yesterday, I noticed that when the teacher was teaching, you \_\_\_\_\_ to her.

Ans  1. do not listen

- 2. have not listened
- 3. are not listening
- 4. were not listening

Q.8 Select the most appropriate option to fill in the blank.

No one \_\_\_\_\_ that the intensity of the floods in Kerala would be so great that it would demolish village after village.

Question ID : 16265369

- Ans
- 1. examined
  - 2. involved
  - 3. anticipated
  - 4. watched

Q.9 Select the most appropriate antonym of the given word.

Question ID : 16265372

SUBSIDE

- Ans
- 1. drop
  - 2. sink
  - 3. stand
  - 4. fall

Q.10 Select the most appropriate option to fill in the blank.

A country \_\_\_\_\_ striking natural beauty \_\_\_\_\_ a stunning Adriatic coastline, Croatia is very popular as a tourist destination.

Question ID : 16265366

- Ans
- 1. of ; with
  - 2. of ; on
  - 3. for ; at
  - 4. with ; in

Q.11 Select the most appropriate option to fill in the blank.

I don't like to drive in the Delhi traffic \_\_\_\_\_ I use Metro and auto.

Question ID : 16265364

- Ans
- 1. even if
  - 2. otherwise
  - 3. because
  - 4. so

Q.12 Arrange parts of the sentence in meaningful and grammatically correct order.

Question ID : 16265374

- A. recommend that
- B. should be introduced
- C. Researchers at the US National Library of Medicine
- D. 'no selfie zones'
- E. at dangerous spots to reduce deaths

- Ans
- 1. CEBAD
  - 2. CBEDA
  - 3. CDAEB
  - 4. CADBE

Q.13

Select the most appropriate synonym of the given word.

Question ID : 16265370

RECKON

- Ans
- 1. imagine
  - 2. examine
  - 3. explain
  - 4. observe

Q.14 In the following sentence four words/phrases have been underlined. One of them is incorrect.

Archaeologists in the Netherlands have discovered a 2,000-year-old stretch of Roman road and the remains of a Roman village at the town of Katwijk, who once marked the northern boundary of the Roman Empire.

Question ID : 16265375

- Ans
- 1. have discovered
  - 2. who once marked
  - 3. and the remains of
  - 4. at the town of

Q.15 Select the most appropriate option to fill in the blank.

Question ID : 16265368

You can still \_\_\_\_\_ the video that she has uploaded on the You Tube.

- Ans
- 1. penetrate
  - 2. access
  - 3. infiltrate
  - 4. attack

Comprehension:



Read the following passage and answer the questions based on it.

The occurrence of a new insect pest, Fall Armyworm (FAW), has been recently reported in Karnataka and also parts of Andhra Pradesh, Telangana, Tamil Nadu, Maharashtra and Gujarat. The pest has been detected mainly in maize fields.

FAW is not new to the scientific community. This highly-destructive and invasive pest has been seen in the Americas since several decades, but its prevalence outside was noted for the first time in West Africa in early 2016. Since then, it has spread to 44 countries across the continent.

The adult moth of the pest migrates very fast — almost 100 km every night. It can, therefore, invade new areas quickly. Also, each female moth is capable of laying 1,500 eggs on an average. The entire lifecycle — from egg to new adult moth that lays fresh eggs — is completed in about 30 days during the summer months. The pest thrives on a wide spectrum of host crop plants: maize, sorghum, rice, sugarcane, soyabean, vegetables, etc.

Yet, FAW can be effectively managed through an integrated pest management (IPM) approach.

The FAW moth lays eggs on the plant's foliage (leaves). The egg stage lasts for only 2-3 days in warmer weather. The next larval stage is the most dangerous one whose entire duration is from 14 to 30 days, depending on the temperature and humidity conditions. The destruction of leaves, stems or flowers of the crop plants by the larva through feeding happens mostly at this stage. Once the larval stage is completed, the growing moth pupates in the soil — for 8-9 days. The nocturnal egg-laying adults live for about 10 days, while most active during warm and humid evenings.

Scientists at the University of Agricultural Sciences, Bengaluru have scientifically validated the incidence of FAW in maize fields across various districts of Karnataka. There have been isolated reports of the pest's presence in the maize-growing areas of other states, too. Fortunately, it has not caused any significant destruction as yet. But the fact that the moth can travel several hundred kilometers and lay eggs profusely during its lifespan calls for serious concern.

In such a scenario, policymakers — more so, in the states where the pest has already been detected — need to nip the problem in the bud. A mass awareness campaign is necessary to build awareness among farmers and extension workers on how to recognize the various stages of the insect and manage/control it with the right IPM interventions. An effective IPM strategy would need to incorporate host plant resistance (through breeding), biological and cultural control, and use of environmentally-safer chemical and bio-pesticides for crop protection. Spraying of chemicals should be avoided. Cultural control practices can work, especially when the FAW problem is still localised to particular geographies/crops. The eggs laid by the moths are discernible to the naked eye. Farmers can be trained to recognize and destroy the egg masses, so as to prevent the caterpillars from emerging.

Q.1  
6 “Since then, it has spread to 44 countries across the continent.” Which continent is being referred to here?

- Ans
- 1. South America
  - 2. North America
  - 3. Asia
  - 4. Africa

Comprehension:

Read the following passage and answer the questions based on it.

The occurrence of a new insect pest, Fall Armyworm (FAW), has been recently reported in Karnataka and also parts of Andhra Pradesh, Telangana, Tamil Nadu, Maharashtra and Gujarat. The pest has been detected mainly in maize fields.

FAW is not new to the scientific community. This highly-destructive and invasive pest has been seen in the Americas since several decades, but its prevalence outside was noted for the first time in West Africa in early 2016. Since then, it has spread to 44 countries across the continent.

The adult moth of the pest migrates very fast — almost 100 km every night. It can, therefore, invade new areas quickly. Also, each female moth is capable of laying 1,500 eggs on an average. The entire lifecycle — from egg to new adult moth that lays fresh eggs — is completed in about 30 days during the summer months. The pest thrives on a wide spectrum of host crop plants: maize, sorghum, rice, sugarcane, soyabean, vegetables, etc.

Yet, FAW can be effectively managed through an integrated pest management (IPM) approach.

The FAW moth lays eggs on the plant's foliage (leaves). The egg stage lasts for only 2-3 days in warmer weather. The next larval stage is the most dangerous one whose entire duration is from 14 to 30 days, depending on the temperature and humidity conditions. The destruction of leaves, stems or flowers of the crop plants by the larva through feeding happens mostly at this stage. Once the larval stage is completed, the growing moth pupates in the soil — for 8-9 days. The nocturnal egg-laying adults live for about 10 days, while most active during warm and humid evenings.

Scientists at the University of Agricultural Sciences, Bengaluru have scientifically validated the incidence of FAW in maize fields across various districts of Karnataka. There have been isolated reports of the pest's presence in the maize-growing areas of other states, too. Fortunately, it has not caused any significant destruction as yet. But the fact that the moth can travel several hundred kilometers and lay eggs profusely during its lifespan calls for serious concern.

In such a scenario, policymakers — more so, in the states where the pest has already been detected — need to nip the problem in the bud. A mass awareness campaign is necessary to build awareness among farmers and extension workers on how to recognize the various stages of the insect and manage/control it with the right IPM interventions. An effective IPM strategy would need to incorporate host plant resistance (through breeding), biological and cultural control, and use of environmentally-safer chemical and bio-pesticides for crop protection. Spraying of chemicals should be avoided. Cultural control practices can work, especially when the FAW problem is still localised to particular geographies/crops. The eggs laid by the moths are discernible to the naked eye. Farmers can be trained to recognize and destroy the egg masses, so as to prevent the caterpillars from emerging.

Q.1  
7 The FAW attacks a number of crops. However which is the crop where it has been mainly detected?

Question ID : 16265380

- Ans
- 1. Soyabean
  - 2. Rice
  - 3. Sugarcane
  - 4. Maize

Comprehension:

Read the following passage and answer the questions based on it.

The occurrence of a new insect pest, Fall Armyworm (FAW), has been recently reported in Karnataka and also parts of Andhra Pradesh, Telangana, Tamil Nadu, Maharashtra and Gujarat. The pest has been detected mainly in maize fields.

FAW is not new to the scientific community. This highly-destructive and invasive pest has been seen in the Americas since several decades, but its prevalence outside was noted for the first time in West Africa in early 2016. Since then, it has spread to 44 countries across the continent.

The adult moth of the pest migrates very fast — almost 100 km every night. It can, therefore, invade new areas quickly. Also, each female moth is capable of laying 1,500 eggs on an average. The entire lifecycle — from egg to new adult moth that lays fresh eggs — is completed in about 30 days during the summer months. The pest thrives on a wide spectrum of host crop plants: maize, sorghum, rice, sugarcane, soyabean, vegetables, etc.

Yet, FAW can be effectively managed through an integrated pest management (IPM) approach.

The FAW moth lays eggs on the plant's foliage (leaves). The egg stage lasts for only 2-3 days in warmer weather. The next larval stage is the most dangerous one whose entire duration is from 14 to 30 days, depending on the temperature and humidity conditions. The destruction of leaves, stems or flowers of the crop plants by the larva through feeding happens mostly at this stage. Once the larval stage is completed, the growing moth pupates in the soil — for 8-9 days. The nocturnal egg-laying adults live for about 10 days, while most active during warm and humid evenings.

Scientists at the University of Agricultural Sciences, Bengaluru have scientifically validated the incidence of FAW in maize fields across various districts of Karnataka. There have been isolated reports of the pest's presence in the maize-growing areas of other states, too. Fortunately, it has not caused any significant destruction as yet. But the fact that the moth can travel several hundred kilometers and lay eggs profusely during its lifespan calls for serious concern.

In such a scenario, policymakers — more so, in the states where the pest has already been detected — need to nip the problem in the bud. A mass awareness campaign is necessary to build awareness among farmers and extension workers on how to recognize the various stages of the insect and manage/control it with the right IPM interventions. An effective IPM strategy would need to incorporate host plant resistance (through breeding), biological and cultural control, and use of environmentally-safer chemical and bio-pesticides for crop protection. Spraying of chemicals should be avoided. Cultural control practices can work, especially when the FAW problem is still localised to particular geographies/crops. The eggs laid by the moths are discernible to the naked eye. Farmers can be trained to recognize and destroy the egg masses, so as to prevent the caterpillars from emerging.

Q.1  
8 How can the farmers best stop caterpillars from emerging?

- Ans
- 1. By biological and cultural control
  - 2. By using host place resistance
  - 3. By destroying the eggs seen on the plants
  - 4. By spraying the fields with chemicals

Comprehension:

Read the following passage and answer the questions based on it.

The occurrence of a new insect pest, Fall Armyworm (FAW), has been recently reported in Karnataka and also parts of Andhra Pradesh, Telangana, Tamil Nadu, Maharashtra and Gujarat. The pest has been detected mainly in maize fields.

FAW is not new to the scientific community. This highly-destructive and invasive pest has been seen in the Americas since several decades, but its prevalence outside was noted for the first time in West Africa in early 2016. Since then, it has spread to 44 countries across the continent.

The adult moth of the pest migrates very fast — almost 100 km every night. It can, therefore, invade new areas quickly. Also, each female moth is capable of laying 1,500 eggs on an average. The entire lifecycle — from egg to new adult moth that lays fresh eggs — is completed in about 30 days during the summer months. The pest thrives on a wide spectrum of host crop plants: maize, sorghum, rice, sugarcane, soyabean, vegetables, etc.

Yet, FAW can be effectively managed through an integrated pest management (IPM) approach.

The FAW moth lays eggs on the plant's foliage (leaves). The egg stage lasts for only 2-3 days in warmer weather. The next larval stage is the most dangerous one whose entire duration is from 14 to 30 days, depending on the temperature and humidity conditions. The destruction of leaves, stems or flowers of the crop plants by the larva through feeding happens mostly at this stage. Once the larval stage is completed, the growing moth pupates in the soil — for 8-9 days. The nocturnal egg-laying adults live for about 10 days, while most active during warm and humid evenings.

Scientists at the University of Agricultural Sciences, Bengaluru have scientifically validated the incidence of FAW in maize fields across various districts of Karnataka. There have been isolated reports of the pest's presence in the maize-growing areas of other states, too. Fortunately, it has not caused any significant destruction as yet. But the fact that the moth can travel several hundred kilometers and lay eggs profusely during its lifespan calls for serious concern.

In such a scenario, policymakers — more so, in the states where the pest has already been detected — need to nip the problem in the bud. A mass awareness campaign is necessary to build awareness among farmers and extension workers on how to recognize the various stages of the insect and manage/control it with the right IPM interventions. An effective IPM strategy would need to incorporate host plant resistance (through breeding), biological and cultural control, and use of environmentally-safer chemical and bio-pesticides for crop protection. Spraying of chemicals should be avoided. Cultural control practices can work, especially when the FAW problem is still localised to particular geographies/crops. The eggs laid by the moths are discernible to the naked eye. Farmers can be trained to recognize and destroy the egg masses, so as to prevent the caterpillars from emerging.

Q.1  
9 The main purpose of this article is to:


Question ID : 16265378

Ans  1.

Highlight the problems created by FAW in different countries

 2.

Create awareness that effective measures can solve the pest problem

 3. Explain the life cycle of the pest FAW

 4.

Show how India has dealt with the pest problem

---

Comprehension:



Read the following passage and answer the questions based on it.

The occurrence of a new insect pest, Fall Armyworm (FAW), has been recently reported in Karnataka and also parts of Andhra Pradesh, Telangana, Tamil Nadu, Maharashtra and Gujarat. The pest has been detected mainly in maize fields.

FAW is not new to the scientific community. This highly-destructive and invasive pest has been seen in the Americas since several decades, but its prevalence outside was noted for the first time in West Africa in early 2016. Since then, it has spread to 44 countries across the continent.

The adult moth of the pest migrates very fast — almost 100 km every night. It can, therefore, invade new areas quickly. Also, each female moth is capable of laying 1,500 eggs on an average. The entire lifecycle — from egg to new adult moth that lays fresh eggs — is completed in about 30 days during the summer months. The pest thrives on a wide spectrum of host crop plants: maize, sorghum, rice, sugarcane, soyabean, vegetables, etc.

Yet, FAW can be effectively managed through an integrated pest management (IPM) approach.

The FAW moth lays eggs on the plant's foliage (leaves). The egg stage lasts for only 2-3 days in warmer weather. The next larval stage is the most dangerous one whose entire duration is from 14 to 30 days, depending on the temperature and humidity conditions. The destruction of leaves, stems or flowers of the crop plants by the larva through feeding happens mostly at this stage. Once the larval stage is completed, the growing moth pupates in the soil — for 8-9 days. The nocturnal egg-laying adults live for about 10 days, while most active during warm and humid evenings.

Scientists at the University of Agricultural Sciences, Bengaluru have scientifically validated the incidence of FAW in maize fields across various districts of Karnataka. There have been isolated reports of the pest's presence in the maize-growing areas of other states, too. Fortunately, it has not caused any significant destruction as yet. But the fact that the moth can travel several hundred kilometers and lay eggs profusely during its lifespan calls for serious concern.

In such a scenario, policymakers — more so, in the states where the pest has already been detected — need to nip the problem in the bud. A mass awareness campaign is necessary to build awareness among farmers and extension workers on how to recognize the various stages of the insect and manage/control it with the right IPM interventions. An effective IPM strategy would need to incorporate host plant resistance (through breeding), biological and cultural control, and use of environmentally-safer chemical and bio-pesticides for crop protection. Spraying of chemicals should be avoided. Cultural control practices can work, especially when the FAW problem is still localised to particular geographies/crops. The eggs laid by the moths are discernible to the naked eye. Farmers can be trained to recognize and destroy the egg masses, so as to prevent the caterpillars from emerging.

Q.2  
0 What is the correct sequence of a moth's life cycle?

Question ID : 16265381

- A. eating of leaves, stems and flowers by the larva
- B. emerging of the adult moth
- C. laying of eggs on the plant' leaves
- D. pupating underground

- Ans
- 1. ABCD
  - 2. BDAC
  - 3. CADB
  - 4. DCBA

Section : General Hindi

Comprehension:

नीचे दिये गए गद्यांश को पढ़कर पूछे गये प्रश्नों के उत्तर दीजिए।

डॉ. नगेंद्र की पुस्तक सुमित्रानंदन पंत (1938) शुक्ल जी के जीवन काल में ही प्रकाशित हो गई थी। उन्होंने छायावाद की तकनीक पर विचार करने के लिए इस पुस्तक की प्रशंसा भी की थी। डॉ. नगेंद्र ने छायावाद को 'स्थूल के प्रति सूक्ष्म का विद्रोह' कहा और उसे केवल 'शैली' मानना उचित नहीं समझा। डॉ. नगेंद्र ने साकेत: एक अध्ययन (1939) भी लिखा। इन दोनों पुस्तकों में पंत और मैथिलीशरण गुप्त की काव्य की सहृदयता के साथ समीक्षा की गई है। डॉ. नगेंद्र ने पंत के काव्य में विचारों की भूमिका को सबसे महत्वपूर्ण माना है, उनके इंद्रियबोध की संवेदनशीलता को रेखांकित किया है। साकेत को डॉ. नगेंद्र ने 'जीवनवादी' काव्य कहा है।

SubQuestion No : 1

Q.1 डॉ. नगेंद्र ने पंत के काव्य में किसकी भूमिका को सबसे महत्वपूर्ण माना है?

Question ID : 16265388

- Ans
- 1. भाव
  - 2. विचार
  - 3. भाषा
  - 4. रस

Comprehension:

नीचे दिये गए गद्यांश को पढ़कर पूछे गये प्रश्नों के उत्तर दीजिए।

डॉ. नगेंद्र की पुस्तक सुमित्रानंदन पंत (1938) शुक्ल जी के जीवन काल में ही प्रकाशित हो गई थी। उन्होंने छायावाद की तकनीक पर विचार करने के लिए इस पुस्तक की प्रशंसा भी की थी। डॉ. नगेंद्र ने छायावाद को 'स्थूल के प्रति सूक्ष्म का विद्रोह' कहा और उसे केवल 'शैली' मानना उचित नहीं समझा। डॉ. नगेंद्र ने साकेत: एक अध्ययन (1939) भी लिखा। इन दोनों पुस्तकों में पंत और मैथिलीशरण गुप्त की काव्य की सहृदयता के साथ समीक्षा की गई है। डॉ. नगेंद्र ने पंत के काव्य में विचारों की भूमिका को सबसे महत्वपूर्ण माना है, उनके इंद्रियबोध की संवेदनशीलता को रेखांकित किया है। साकेत को डॉ. नगेंद्र ने 'जीवनवादी' काव्य कहा है।

SubQuestion No : 2

Q.2 'सुमित्रानंदन पंत' पुस्तक की प्रशंसा किसने की?

Question ID : 16265385

Ans

1. सुमित्रानंदन पंत
2. निराला
3. रामचन्द्र शुक्ल
4. मैथिलीशरण गुप्त

Comprehension:

नीचे दिये गए गद्यांश को पढ़कर पूछे गये प्रश्नों के उत्तर दीजिए।

डॉ. नगेंद्र की पुस्तक सुमित्रानंदन पंत (1938) शुक्ल जी के जीवन काल में ही प्रकाशित हो गई थी। उन्होंने छायावाद की तकनीक पर विचार करने के लिए इस पुस्तक की प्रशंसा भी की थी। डॉ. नगेंद्र ने छायावाद को 'स्थूल के प्रति सूक्ष्म का विद्रोह' कहा और उसे केवल 'शैली' मानना उचित नहीं समझा। डॉ. नगेंद्र ने साकेत: एक अध्ययन (1939) भी लिखा। इन दोनों पुस्तकों में पंत और मैथिलीशरण गुप्त की काव्य की सहृदयता के साथ समीक्षा की गई है। डॉ. नगेंद्र ने पंत के काव्य में विचारों की भूमिका को सबसे महत्वपूर्ण माना है, उनके इंद्रियबोध की संवेदनशीलता को रेखांकित किया है। साकेत को डॉ. नगेंद्र ने 'जीवनवादी' काव्य कहा है।

SubQuestion No : 3

Q.3 किस रचना को डॉ. नगेंद्र ने 'जीवनवादी' काव्य कहा?

Question ID : 16265387

Ans

- 1. कुरुक्षेत्र
- 2. कामायनी
- 3. पल्लव
- 4. साकेत

Comprehension:

नीचे दिये गए गद्यांश को पढ़कर पूछे गये प्रश्नों के उत्तर दीजिए।

डॉ. नगेंद्र की पुस्तक सुमित्रानंदन पंत (1938) शुक्ल जी के जीवन काल में ही प्रकाशित हो गई थी। उन्होंने छायावाद की तकनीक पर विचार करने के लिए इस पुस्तक की प्रशंसा भी की थी। डॉ. नगेंद्र ने छायावाद को 'स्थूल के प्रति सूक्ष्म का विद्रोह' कहा और उसे केवल 'शैली' मानना उचित नहीं समझा। डॉ. नगेंद्र ने साकेत: एक अध्ययन (1939) भी लिखा। इन दोनों पुस्तकों में पंत और मैथिलीशरण गुप्त की काव्य की सहृदयता के साथ समीक्षा की गई है। डॉ. नगेंद्र ने पंत के काव्य में विचारों की भूमिका को सबसे महत्वपूर्ण माना है, उनके इंद्रियबोध की संवेदनशीलता को रेखांकित किया है। साकेत को डॉ. नगेंद्र ने 'जीवनवादी' काव्य कहा है।

SubQuestion No : 4

Q.4 गद्यांश में उल्लिखित 'सुमित्रानंदन पंत' पुस्तक के लेखक हैं:

Question ID : 16265384

Ans

- 1. डॉ. नगेंद्र
- 2. रामचन्द्र शुक्ल
- 3. मैथिलीशरण गुप्त
- 4. सुमित्रानंदन पंत

Comprehension:

नीचे दिये गए गद्यांश को पढ़कर पूछे गये प्रश्नों के उत्तर दीजिए।

डॉ. नगेंद्र की पुस्तक सुमित्रानंदन पंत (1938) शुक्ल जी के जीवन काल में ही प्रकाशित हो गई थी। उन्होंने छायावाद की तकनीक पर विचार करने के लिए इस पुस्तक की प्रशंसा भी की थी। डॉ. नगेंद्र ने छायावाद को 'स्थूल के प्रति सूक्ष्म का विद्रोह' कहा और उसे केवल 'शैली' मानना उचित नहीं समझा। डॉ. नगेंद्र ने साकेत: एक अध्ययन (1939) भी लिखा। इन दोनों पुस्तकों में पंत और मैथिलीशरण गुप्त की काव्य की सहृदयता के साथ समीक्षा की गई है। डॉ. नगेंद्र ने पंत के काव्य में विचारों की भूमिका को सबसे महत्वपूर्ण माना है, उनके इंद्रियबोध की संवेदनशीलता को रेखांकित किया है। साकेत को डॉ. नगेंद्र ने 'जीवनवादी' काव्य कहा है।

SubQuestion No : 5

Q.5 डॉ. नगेंद्र ने 'स्थूल के प्रति सूक्ष्म का विद्रोह' किसे कहा?

Question ID : 16265386

- Ans
- 1. नयी कविता
  - 2. छायावाद
  - 3. प्रयोगवाद
  - 4. प्रगतिवाद

Q.6 निम्नलिखित में व्यक्तिवाचक संज्ञा कौन सी है?

Question ID : 16265391

- Ans
- 1. गाय
  - 2. मकान
  - 3. चाँदी
  - 4. जापान

Q.7 'स्वाभाविक' का विलोम होगा:

Question ID : 162653100

- Ans
- 1. अस्वाभाविक
  - 2. प्राकृतिक
  - 3. भाविक
  - 4. पराभाविक

Q.8 'यमुना' का पर्यायवाची है:

Question ID : 16265399

- Ans
- 1. मन्दाकिनी
  - 2. तरंगिणी

✓ 3. कृष्णा

✗ 4. सुरसरिता

Q.9 निम्नलिखित में तद्भव शब्द कौन सा है?

Question ID : 16265390

Ans ✓ 1. भला

✗ 2. व्यतीत

✗ 3. बिन्दु

✗ 4. वृद्ध

Q.10 निम्नलिखित में कौन सा शब्द पुलिङ्ग है?

Question ID : 16265396

Ans ✓ 1. आभार

✗ 2. आँख

✗ 3. इच्छा

✗ 4. आहट

Q.11 'अतएव' का संधि-विच्छेद होगा:

Question ID : 16265394

Ans ✓ 1. अतः + एव

✗ 2. अत + एव

✗ 3. अते + व

✗ 4. अता + एव

Q.12 'अलग-अलग अवयवों को एक में जोड़ना' के लिए एक शब्द होगा:

Question ID : 162653101

Ans ✗ 1. विग्रह

✗ 2. विखंडन

✗ 3. विश्लेषण

✓ 4. संश्लेषण

Q.13 निम्नलिखित में शुद्ध वर्तनी वाला शब्द है:

Question ID : 162653102

Ans ✓ 1. प्रादेशिक

✗ 2. प्रादेशीक

✗ 3. प्रदेशीक

✗ 4. प्रदेशिक

Q.14 उत्तम पुरुष सर्वनाम है:

Question ID : 16265392

Ans ✗ 1. तुम

✓ 2. मैं

- 3. वह
- 4. आप

Q.15 'बराबर' में समास है:

Question ID : 16265395

- Ans
- 1. द्विगु
  - 2. तत्पुरुष
  - 3. अव्ययीभाव
  - 4. द्वंद्व

Q.16 'अभियोग' में उपसर्ग है:

Question ID : 16265397

- Ans
- 1. अ
  - 2. आ
  - 3. अभि
  - 4. योग

Q.17 'भतीजा' में प्रत्यय है:

Question ID : 16265398

- Ans
- 1. जा
  - 2. भ
  - 3. तीजा
  - 4. ज

Q.18 निम्नलिखित में कौन सा शब्द तत्सम है?

Question ID : 16265389

- Ans
- 1. रजनी
  - 2. यहाँ
  - 3. रानी
  - 4. रात

Q.19 निम्नलिखित में कौन सा शब्द अव्यय है?

Question ID : 16265393

- Ans
- 1. नीला
  - 2. सुडौल
  - 3. आगामी
  - 4. तथा

Q.20 'मैंने पुस्तकालय जाना है।' वाक्य में अशुद्ध है:

Question ID : 162653103

- Ans
- 1. है।
  - 2. जाना

3. पुस्तकालय

4. मैंने

Section : Subject Related

Q.1 Which Congress session formalized the demand for 'Purna Swaraj' or 'Full Independence' for India?

Question ID : 162653111

Ans  1. Calcutta session, 1917

2. Delhi session, 1923

3. Lahore session, 1929

4. Lahore session, 1909

Q.2 When did the Convention abolished monarchy and declared France as a Republic?

Question ID : 162653107

Ans  1. 10<sup>th</sup> August, 1793

2. 2<sup>nd</sup> August, 1793

3. 21<sup>st</sup> September, 1792

4. 9<sup>th</sup> July, 1794

Q.3 Who was the leading English manufacturer who sought to build a cooperative community called 'New Harmony' in Indiana (USA)?

Question ID : 162653113

Ans  1. Louis Blanc

2. Daniel Johnson

3. Friedrich Engels

4. Robert Owen

Q.4 Who among the followings mobilized the Headmen and Cultivators of Chaurasee Des, moving at night from village to village, urging people to rebel against the British?

Question ID : 162653110

Ans  1. Shah Mal

2. Suraj Mal

3. Birjis Qadr

4. Maulvi Ahmadullah Shah

Q.5 What was the young and fragile idea that could NOT survive the instabilities of the interwar Europe?

Question ID : 162653121

Ans  1. Radicalism

2. Conservative dictatorship

3. Democracy

4. Socialism

Q.6 Who proposed the form of government that was based on a social contract between people and their representatives?


Question ID : 162653106

Ans  1. Jean-Jacques Rousseau

2. David Hume

3. Montesquieu



 4. John Locke





Q.7 Reacting against the colonial policies and to organize the business activities when did the Indian Merchants and Industrialists formed the Indian Industrial and Commercial Congress?

Question ID : 162653112

- Ans
-  1. 1927
  -  2. 1923
  -  3. 1920
  -  4. 1921





Q.8 Mention the name of the book that was written by Charlotte Beraüt who secretly recorded the people's dreams in her diary and later published it as a book.

Question ID : 162653119

- Ans
-  1. Villette
  -  2. Inside the Third Reich
  -  3. Third Reich of Dreams
  -  4. The rise and fall of Third Reich





Q.9 Which of the following was the demand of the liberals in Russia along with peasants and workers in 1905?

Question ID : 162653115

- Ans
-  1. Democracy
  -  2. Constitution
  -  3. Land of peasants
  -  4. Land of landlords





Q.10 The programme of the Nazis where in the properties of the Jews were vandalised and looted, houses of Jews were attacked, synagogues were burnt, and men arrested was referred to as:

Question ID : 162653120

- Ans
-  1. The art of propaganda
  -  2. The National Socialist Programme
  -  3. The Nuremberg Laws 1935
  -  4. The Night of Broken Glass in November 1938





Q.11 Who were mockingly called as 'November Criminals'?

Question ID : 162653122

- Ans
-  1. Socialists, Catholics and Democrats
  -  2. Jews, Gypsies and Physically enabled
  -  3. Socialists, Nazis and Democrats
  -  4. Radicals, Liberals and Conservatives

Q.12 Via which of the following Indian coasts was a vibrant sea trade to the Gulf and Red Sea ports operated through the main pre-colonial ports?

Question ID : 162653105

- Ans
-  1. Hoogly in Bengal
  -  2. Masulipatnam on Coromandel coast
  -  3. Surat on Gujarat coast
  -  4. Bombay

Q.13 In which year was the Tripartite pact between Italy, Japan and Germany signed?

Question ID : 162653123

- Ans
-  1. 1941

2. 1938

3. 1940

4. 1939

Q.14 Who had led the revolution that brought down the Russian Monarchy in February 1917?

Question ID : 162653116

Ans  1. Military

2. Land lords

3. Tsar

4. Petrograd

Q.15 In 1851, who described Awadh as "a cherry that will drop into our mouth one day"?

Question ID : 162653109

Ans  1. Lord William Bentick

2. John Macpherson

3. Lord Dalhousie

4. Richard Wellesley

Q.16 What was the percentage of women factory labour force in Russia by 1914?

Question ID : 162653114

Ans  1. 28 percent

2. 31 percent

3. 38 percent

4. 35 percent

Q.17 With regard to the French Revolution, which among the following had reworked the sovereign nation state by redefining the idea of freedom from the bondage into a movement?

Question ID : 162653108

Ans  1. Nobles

2. Jacobians

3. Socialists

4. Colonised people

Q.18 In 1772 who was the company official who had ventured to say that "the demand for Indian textiles could never reduce, since no other nation produced goods of the same quality"?

Question ID : 162653104

Ans  1. Warren Hastings

2. Robert Clive

3. Cornwallis

4. Henry Patullo

Q.19 Many Indians got inspired by the Russian Revolution and wrote on the Soviet Socialism. Who among the following authors wrote, in Hindi, in 1920-21, on Russian Revolution, Lenin's life and thoughts, and later the Red Revolution?

Question ID : 162653118

Ans  1. Jawaharlal Nehru

2. R.S. Avasthi

3. S.D. Vidyalkar

4. Rabindranath Tagore

Q.20 Marx believed that to free themselves from the capitalist exploitation, workers had to construct a \_\_\_\_\_ society where all property was socially controlled.

Question ID : 162653117

- Ans
- 1. revolutionary socialist
  - 2. capitalist
  - 3. radically socialist
  - 4. socialist cooperative

Section : Subject Related

Q.1 Agenda 21 is the declaration signed by world leaders at \_\_\_\_\_, which took place at Rio de Janeiro, Brazil.

Question ID : 162653142

- Ans
- 1. UNDP
  - 2. UNCED
  - 3. UNFPA
  - 4. UNODC

Q.2 What is the total length of the coastline of India's mainland, including Andaman and Nicobar?

Question ID : 162653134

- Ans
- 1. 11,290.7 km
  - 2. 7,516.6 km
  - 3. 7,520.8 km
  - 4. 7,546.7 km

Q.3 The place where Northeast and Southeast trade winds converge is called as:

Question ID : 162653130

- Ans
- 1. Oceanic continental convergence zone
  - 2. Continental convergence zone
  - 3. Inter tropical convergence zone
  - 4. Oceanic and oceanic convergence zone

Q.4 The part of Himalayas lying between Sutlej and Kali rivers is known as:

Question ID : 162653135

- Ans
- 1. Punjab Himalayas
  - 2. Himachal Himalayas
  - 3. Kumaon Himalayas
  - 4. Assam Himalayas

Q.5 The change of population in a particular area between two points of time is known as:

Question ID : 162653138

- Ans
- 1. Migration
  - 2. Natural growth of population
  - 3. Growth of population
  - 4. Growth percentage of population

Q.6 The axis of the Earth, which is an imaginary line, makes an angle of \_\_\_\_\_ with its orbital plane.

Question ID : 162653126

- Ans
- 1. 64 degree
  - 2. 66 degree

3. 68 degree

4. 65 degree

Q.7 What among the following is essential for the sustained quality of life and global peace?

Question ID : 162653141

Ans  1. Production of resources

2. Distribution of resources

3. Utility of resources

4. Equitable distribution of resources

Q.8 India lies in the region of \_\_\_\_\_ winds.

Question ID : 162653132

Ans  1. north easterlies

2. periodic

3. westerlies

4. local

Q.9 What is the name of the periodic development of a warm ocean current along the coast of Peru as a temporary replacement of Peruvian current?

Question ID : 162653129

Ans  1. Jet stream

2. El nino

3. Westerly winds

4. Coriolis force

Q.10 Black soils are generally poor in \_\_\_\_\_ content.

Question ID : 162653136

Ans  1. Lime

2. Magnesium

3. Phosphoric

4. Potash

Q.11 What is name of the boundary between India and the Antarctic plate marked by the oceanic ridge running in roughly W-E and merging into spreading site, a little south of New Zealand?

Question ID : 162653128

Ans  1. Convergent boundary

2. Transform boundary

3. Ocean convergent boundary

4. Divergent boundary

Q.12 The temperate forests and grasslands give way to what type of vegetation at high altitudes, which is generally more than 3,600 m above sea level?

Question ID : 162653137

Ans  1. Tundra vegetation

2. Perennial grasses

3. Shrubs

4. Alpine vegetation

Q.13 What is the local time difference between Dwarka in Gujarat to Dibrugarh in Assam?

Question ID : 162653127

Ans

- 1. 1 hour 45 minutes
- 2. 1 hour 05 minutes
- 3. 1 hour 15 minutes
- 4. 1 hour 19 minutes

Q.14 Which of the following is the name the three stages of demographic transition theory?

Question ID : 162653139

- Ans
- 1. Rural agrarian, literacy, high death rates
  - 2. High birth rates, literacy, low birth rates
  - 3. High death rates, literacy, high birth rates
  - 4. Rural agrarian, demographic transition, urban industrial

Q.15 Identify the diversion channels built by the people of Western Himalayan region for agriculture.

Question ID : 162653143

- Ans
- 1. Tankas
  - 2. Kuls and guls
  - 3. Khadins
  - 4. Johads

Q.16 How can swimmers float in the water of the Dead Sea in Israel?

Question ID : 162653133

- Ans
- 1. Due to lack of salinity
  - 2. Due to the presence of calcium
  - 3. Because of presence of potassium
  - 4. Because of presence of increased amounts of salt

Q.17 Who suggested that the movement responsible for the drifting of the continents was caused by pole-fleeing force and tidal force?

Question ID : 162653125

- Ans
- 1. Arthur Holmes' Convection Current Theory
  - 2. Continental Drift Theory by Frank Bursley Taylor
  - 3. Abraham Ortelius Theory
  - 4. Wegener's Continental Drift Theory

Q.18 Which of the famous constellations can be seen during summer in the early part of the night?

Question ID : 162653124

- Ans
- 1. Orion
  - 2. Ursa Major
  - 3. Leo Major
  - 4. Great Bear

Q.19 What is the main aim of the National Population Policy, 2000?

Question ID : 162653140

- Ans
- 1. Developing child-oriented programmes
  - 2. An Adolescents programme

3. Developing female-oriented programmes

4.

Making family welfare as people-centred programme

Q.20 What is Continentality?

Question ID : 162653131

Ans  1.

The experience of extreme weather conditions due to higher altitudes

2.

The experience of extreme weather conditions due to lower altitudes

3.

The experience of extreme weather conditions due to distance from rivers

4.

The experience of extreme weather conditions due to distance from the sea

Section : Subject Related

Q.1 Which among the following is the highest quality hard coal?

Question ID : 162653145

Ans  1. Bituminous

2. Anthracite

3. Hematite

4. Lignite

Q.2 What is the name of the National Highway no.1?

Question ID : 162653151

Ans  1. Sher Shah Suri Marg

2. Durgapur expressway

3. Dibrugarh to Tuipang Road

4. APCRDA 'Greenway'

Q.3 The industries that produce raw materials for the other industries are known as:

Question ID : 162653163

Ans  1. Unorganised sectors

2. Small scale industries

3. Basic industries

4. Footloose industries

Q.4 Which one of the following is the nuclear power plant in Karnataka?

Question ID : 162653153

Ans  1. Tarapur

2. Kalpakkam

3. Kaiga

4. Naraura

Q.5 What is the length of the pipeline that was constructed to connect Salaya (Gujarat) with Mathura (UP)?

Question ID : 162653152

Ans  1. 1248 km

2. 1256 km

3. 1265 km

4. 1289 km

Q.6 Identify the state in which the three paddy crops, Aus, Aman and Boro, are grown.

Question ID : 162653146

Ans  1. Uttar Pradesh

2. Haryana

3. Telangana

4. Assam

Q.7 On the basis of ownership, industries are classified into:

Question ID : 162653150

Ans  1. Metallurgical, mechanical and electrical

2. Small scale and large scale

3.

Agricultural-based, forest-based, mineral-based

4.

Public sector, private sector, and joint and cooperative sector

Q.8 The only country in the world to officially proclaim the Gross National Happiness as the measure of the country's progress is:

Question ID : 162653161

Ans  1. Indonesia

2. Singapore

3. India

4. Bhutan

Q.9 Which port is known as 'Queen of Arabian Sea'?

Question ID : 162653159

Ans  1. Kochchi port

2. Marmagao port

3. Kandla port

4. Mumbai port

Q.10 Who among the following is the leading producer of coffee?

Question ID : 162653148

Ans  1. Brazil

2. Columbia

3. Sri Lanka

4. India

Q.11 What was the purpose of the Industrial Policy Resolution of 1956?

Question ID : 162653162

Ans  1. Trade policy

2. Sustained development

3. Small scale industries

✓ 4. Regional equality

Q.12 While determining the poverty line in India, a minimum requirement of food was taken into consideration. What is the average requirement of calories per person per day in rural areas?

Question ID : 162653155

- Ans
- ✓ 1. 2400 calories
  - ✗ 2. 2300 calories
  - ✗ 3. 2100 calories
  - ✗ 4. 2200 calories

Q.13 The major criterion considered by the World Development Report – 2006, published by the World Bank to classify the countries, is:

Question ID : 162653160

- Ans
- ✗ 1. Gross Domestic Product (GDP)
  - ✗ 2. National income
  - ✓ 3. Per capita income
  - ✗ 4. Health

Q.14 Name the programme that promises 100 days of guaranteed wage employment to all rural households who volunteer to do unskilled manual work?

Question ID : 162653156

- Ans
- ✗ 1. PMRY
  - ✗ 2. PMEGP
  - ✓ 3. NREGA
  - ✗ 4. REGP

Q.15 Minerals occur in \_\_\_\_\_ in igneous and metamorphic rocks.

Question ID : 162653144

- Ans
- ✓ 1. lodes
  - ✗ 2. beds
  - ✗ 3. layers
  - ✗ 4. residual mass

Q.16 Jute grows well on which type of soil?

Question ID : 162653147

- Ans
- ✗ 1. Black soil
  - ✗ 2. Red soil
  - ✓ 3. Alluvial soil
  - ✗ 4. Yellow soil

Q.17 Disasters are classified into four types. Floods come under which type of disaster?

Question ID : 162653154

- Ans
- ✗ 1. Terrestrial
  - ✗ 2. Biological
  - ✓ 3. Aquatic
  - ✗ 4. Atmospheric

Q.18 To signify the achievements of the Green Revolution, a stamp was released by the then Prime Minister Mrs. Indira Gandhi. This stamp was entitled as:

Question ID : 162653157

- Ans
- ✓ 1. 'Wheat Revolution' in July 1968
  - ✗ 2. 'Green Revolution' in June 1967



3. 'Rice Revolution' in September 1965

4. 'Yellow Revolution' in March 1966

Q.19 The stocks of wheat and rice are procured by the government to have a buffer stock. This is done via:

Question ID : 162653158

Ans  1. Banks

2. Public distribution system

3. Cooperative societies

4. Food Corporation of India

Q.20 In which year was the Salem steel plant in Tamil Nadu commissioned?

Question ID : 162653149

Ans  1. 1992

2. 1952

3. 1982

4. 1972

Section : Subject Related

Q.1 What is the significance of the civil rights movement in the USA that was carried on between 1954-1968?

Question ID : 162653176

Ans  1. It was a movement against black power

2.

It was a movement against communal discrimination

3.

It was a movement against religious discrimination

4.

It was a movement against racially discriminatory laws

Q.2 All those private sector establishments and the public sector establishments that employ 10 or more hired workers are called:

Question ID : 162653164

Ans  1. Formal sector establishments

2. Trade unions

3. Private sector establishments

4. Public sector establishments

Q.3 A situation when it becomes a burden for the lender to repay the loan and needs to borrow a new loan to pay the existing is called \_\_\_\_\_.

Question ID : 162653169

Ans  1. Demand Draft

2. Debt Trap

3. Terms of Credit

4. Medium of exchange

Q.4 Changing the allegiance from the party, on whose ticket one gets elected, to some other party is known as:

Question ID : 162653179

Ans  1. Defection

2. Alien

3. Loyalist

4. Partisan

Q.5 Who founded the Bahujan Samaj Party in 1984?

Question ID : 162653178

- Ans
- 1. Mahatma Phule
  - 2. Kanshi Ram
  - 3. Sahu Maharaj
  - 4. Periyar Ramaswami Naicker

Q.6 An asset that a borrower owns and uses the same as a guarantee to a lender until the loan is repaid is known as:

Question ID : 162653166

- Ans
- 1. Deposit
  - 2. Guarantee
  - 3. Collateral
  - 4. Mortgage

Q.7 Which among the following countries is an example of two-party system?

Question ID : 162653180

- Ans
- 1. India
  - 2. United Kingdom
  - 3. China
  - 4. Belgium

Q.8 Who was the founder of Grameen Banks in Bangladesh?

Question ID : 162653167

- Ans
- 1. Mary Houghton
  - 2. Babul Saha
  - 3. Prof. Mohammad Yunus
  - 4. Mr. Bhuvanendra Takoor

Q.9 Between 1970 and 1993, how many times did the Belgium leaders amend their constitution and in relation to what?

Question ID : 162653171

- Ans
- 1. 4 times; To enable everyone to live in unity
  - 2. 5 times; Autonomy
  - 3. 3 times; Unity in diversity
  - 4. 2 times; Equal representation

Q.10 What is the essential feature of a barter system?

Question ID : 162653165

- Ans
- 1. Availability of goods
  - 2. Demand for goods
  - 3. Desire for the goods
  - 4. Double coincidence of wants

Q.11 Those social differences that create possibilities of deep social differences are called:

Question ID : 162653177

- Ans
- 1. Diversity

- 2. Overlapping differences
- 3. Crosscutting differences
- 4. Social division

Q.12 Name the language spoken by the majority of the population in Belgium's capital city.

Question ID : 162653172

- Ans
- 1. Spanish
  - 2. French
  - 3. Dutch
  - 4. German

Q.13 All the candidates contesting elections have to provide information to the election commission regarding the details of their property and criminal cases pending against them. Such a declaration is called:

Question ID : 162653182

- Ans
- 1. Documents
  - 2. Affirmation
  - 3. Affidavit
  - 4. Election manifesto

Q.14 In which year's elections the Janata Dal had promised the implementation of Mandal Commission Report in its Manifesto?

Question ID : 162653173

- Ans
- 1. 1962
  - 2. 1989
  - 3. 1990
  - 4. 1972

Q.15 How many members are there in a typical SHG?

Question ID : 162653168

- Ans
- 1. 15 to 25
  - 2. 10 to 20
  - 3. 10 to 15
  - 4. 15 to 20

Q.16 Identify the country from the following, which has 'coming together' federation.

Question ID : 162653174

- Ans
- 1. India
  - 2. Spain
  - 3. USA
  - 4. Belgium

Q.17 What is the name of the Israel's legislature?

Question ID : 162653181

- Ans
- 1. Knesset
  - 2. Duma
  - 3. Parliament
  - 4. National Assembly

Q.18 When was the The Treaty of Chaguaramas signed by the independent islands of West Indies to establish joint authorities?

Question ID : 162653175

- Ans
- 1. 1968

2. 1973

3. 1962

4. 1971

Q.19 In which form of power sharing do we find the arrangement of the system of checks and balances?

Question ID : 162653170

Ans  1.

Power sharing among different social groups

2.

Power sharing among different political parties

3. Horizontal form of power sharing

4. Vertical form of power sharing

Q.20 What is the guiding principle of the political party CPI?

Question ID : 162653183

Ans  1. Hindutva

2. Religious minorities

3. Marxism – Leninism

4. Gandhian Secularism

Section : Subject Related

Q.1 Who said this "The Constituent Assembly alone can produce a Constitution indigenous to the country and truly and fully representing the will of the people"

Question ID : 162653191

Ans  1. Jawaharlal Nehru

2. Mahatma Gandhi

3. Dr. B.R. Ambedkar

4. Dr. Sarvepalli RadhaKrishnan

Q.2 Studies on dignity and freedom of citizens in democracy show that:

Question ID : 162653185

Ans  1.

Promoting dignity and inequalities among individuals

2. Promoting dignity and individual freedom

3.

Promoting dignity among men and inequalities among women

4. Promoting inequalities among communities

Q.3 What does IRDP stand for?

Question ID : 162653190

Ans  1. Integrated Rural Democracy Project

2. Integrated Rural Development Project

3. Integrated Rural Development Programme

4.

International Rural Development Programme

Q.4 When did General Pervez Musharraf lead a military coup in Pakistan?

Question ID : 162653184

Ans  1. March 1996

2. October 1999

3. August 1997

4. June 1989

Q.5 What does BAMCEF stand for?

Question ID : 162653188

Ans  1.

Bangladesh Muslim Community Employers Federation

2.

Backward and Muslim Community Employees Federation

3.

Bhutan Mineral Corporation Employer Federation

4.

Backward and Minority Communities Employees Federation

Q.6 After the April 2006 popular movement, who was chosen as the new Prime Minister of Nepal by SPA?

Question ID : 162653187

Ans  1. Baburam Bhattarai

2. Girija Prasad Koirala

3. King Gyanendra

4. Madhav Kumar Nepal

Q.7 The Supreme court can declare any law of legislature as invalid and can determine the constitutional validity of any law or action of the executive in the country when it is challenged. This is called as:

Question ID : 162653192

Ans  1. Integrated judiciary

2. Guardian

3. Judicial review

4. Impeachment

Q.8 Which type of challenge do established democracies face?

Question ID : 162653186

Ans  1. Elimination of democracy

2. Instituting democratic government

3. Transition of democracy

4. Expansion of democracy

Q.9 Which among the following is the constitutional amendment act on Panchayat Raj Institutions?

Question ID : 162653189

Ans  1. 64<sup>th</sup> amendment act

2. 73<sup>rd</sup> amendment act

3. 46<sup>th</sup> amendment act

4. 74<sup>th</sup> amendment act

Q.10 For the enforcement of the fundamental rights, the Supreme Court and High Courts have the power to issue directions, orders or \_\_\_\_\_.

Question ID : 162653193

- Ans
- 1. public interest litigations
  - 2. petitions
  - 3. laws
  - 4. writs

Q.11 The document that sets the standards of Curriculum is:

Question ID : 162653201

- Ans
- 1. Syllabus
  - 2. Organizational curriculum
  - 3. Theory of curriculum
  - 4. Curriculum frame work

Q.12 Visual and hearing impairment child comes under:

Question ID : 162653203

- Ans
- 1. Intellectually challenged child
  - 2. Special child
  - 3. Handicapped child
  - 4. Locomotor impaired child

Q.13 Which country has long history of formal education institution?

Question ID : 162653195

- Ans
- 1. Australia
  - 2. England
  - 3. India
  - 4. America

Q.14 "Vocabulary development" is an essential component of:

Question ID : 162653200

- Ans
- 1. Writing skills
  - 2. Listening skill
  - 3. Reading instructions
  - 4. Language skills

Q.15 Reading and writing learners learn best:

Question ID : 162653197

- Ans
- 1. When they are reciting in class
  - 2. When they are attending regular tests
  - 3. When they are interacting with texts
  - 4. When art is integrated in learning

Q.16 Who is an auditory learner from the following?

Question ID : 162653196

- Ans
- 1. Who is interacting with texts
  - 2.

Who will jump at the chance to participate in a hands-on activity

3.

Who prefers to see the information for learning

4.

Who remembers the information, reciting it back to the presenter

Q.17 Which is the most influential factor with regard to gender identity in early childhood?

Question ID : 162653194

Ans

1. School environment

2. Parents, family members and care givers

3. Other children

4. Movies and books

Q.18 In addition to academic needs, following is required for adolescent students:

Question ID : 162653198

Ans

1. To equip with latest teaching gadgets

2.

To Address emotional and motivational needs

3. To explain gender discrimination

4. Beautiful learning environment

Q.19 The real goal of education is:

Question ID : 162653202

Ans

1. Get good prospects

2. Become good citizen

3. Learning to learn

4. Gaining awareness

Q.20 "Gender" is a social difference whereas "sex" is a:

Question ID : 162653199

Ans

1. Cultural difference

2. Traditional difference

3. Biological difference

4. Sensitive difference

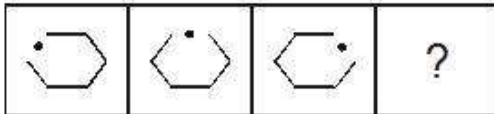


Participant ID:	<b>HaryanaJobs.in</b>
Participant Name:	
Test Center Name:	iON Digital Zone iDZ 2 Sector 62
Test Date:	15/10/2018
Test Time:	8:30 AM - 10:30 AM
Subject:	TGT SOCIAL SCIENCE FEMALE

Section : Mental Ability

Q.1 नीचे दी गई श्रृंखला में अगली आकृति क्या होगी?

Question ID : 16794319185



Ans

- 1.
- 2.
- 3.
- 4.

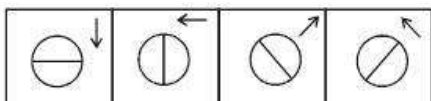
Q.2 खेल के प्रतियोगिता में छह बच्चे भाग लेते हैं। प्रत्येक बच्चे को हर दूसरे के साथ खेलना चाहिए। कुल कितने खेल खेले जाएंगे?

Question ID : 16794319196

- Ans
- 1. 15
  - 2. 20
  - 3. 10
  - 4. 12

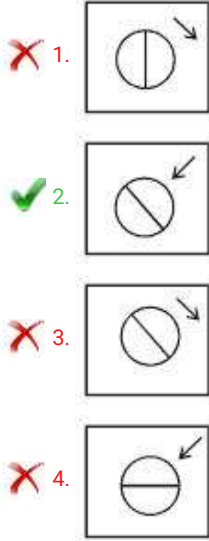
Q.3 नीचे की गई आकृतियों के समान विकल्प की पहचान करें।

Question ID : 16794319183



Ans





Q.4 विद्या राजेश की बहन है। राजेश के पिता की मां विद्या से किस तरह संबंधित है?

Question ID : 16794319194

- Ans
1. दादी  
 2. मां  
 3. मौसी/मामी  
 4. चचेरी बहन

Q.5 वह शब्द-युग्म चुनें जिसमें शब्द अन्य युग्म की तुलना में अलग-अलग संबंधित हैं।


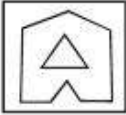


Question ID : 16794319198

- Ans
1. जीभ : स्वाद  
 2. नाक : सुगंध  
 3. कान : बधिर  
 4. आंख : देखना

Q.6 आकृति में विकल्प आकृति को चिन्हित करें जिसे नीचे दी गई आकृति में सन्निकट किया गया है।

Question ID : 16794319188



- Ans
1.   
 2.   
 3.   
 4. 

Q.7 नीचे दी गई जानकारी को ध्यानपूर्वक पढ़ें और दिए गए प्रश्नों का उत्तर दें।

एक लेखा संगठन में भर्ती प्रक्रिया के लिए, उम्मीदवारों के लिए

निम्नलिखित योग्यता मानदंड की आवश्यकता है:

- न्यूनतम 60% अंकों के साथ वाणिज्य में स्नातक।
- 1-7-2016 को उम्र कम से कम 24 साल और 40 साल से अधिक नहीं।
- उम्मीदवारों को शिक्षा के बाद कम से कम 2 वर्ष का कार्य अनुभव होना चाहिए।
- उन्हें चयन प्रक्रिया में 55% अंक प्राप्त करना चाहिए था।

हालांकि, यदि उम्मीदवार उपर्युक्त मानदंडों को पूरा करता है तो इस छोड़कर:

(A) (i) के मामले में यदि उम्मीदवार वाणिज्य में स्नातक नहीं है लेकिन उसके पास वित्त में 60% अंक के साथ स्नातकोत्तर की डिग्री है, उसे संस्थान के वित्त प्रबंधन से संपर्क करना चाहिए।

(B) (iii) के मामले में यदि उम्मीदवार शिक्षा के बाद कम से कम 2 वर्ष का कार्य अनुभव के पात्रता मापदंड को पूरा करता है, इतना ही नहीं वह चयन प्रक्रिया में 75% अंक अर्जित किया है, उसे प्रशिक्षु अकाउंटेंट के लिए संदर्भित किया जा सकता है।

उपरोक्त सूचना के आधार पर तय करें कि क्या निम्नलिखित उम्मीदवार चयन प्रक्रिया में पात्र हैं, और उपयुक्त विकल्प का चयन करें। आपको प्रश्न में दी गई जानकारी के अलावा कुछ और नहीं सोचना है। आपको दिए गए सभी मामले 1-7-2016 के हैं।

अनुराग कुमार के पास शिक्षा के बाद 6 वर्ष का कार्य अनुभव है। उसका जन्मदिन 05-4-1992 है। उसने चयन प्रक्रिया में 62% अंक अर्जित किया है। उसने स्नातक वाणिज्य से किया है और 76% अंक अर्जित किया है।

Ans  1. वित्त प्रबंधक संदर्भित किया जा सकता है

2. चयन होना चाहिए

3. चयन नहीं होना चाहिए

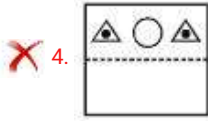
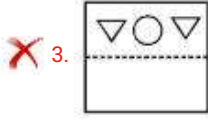
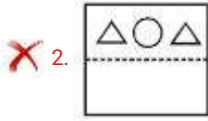
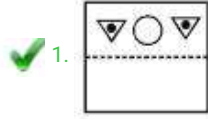
4.

प्रशिक्षु अकाउंटेंट संदर्भित किया जा सकता है

Q.8 यदि निम्न पारदर्शी कागज बिंदीदार रेखा पर मोड़ दिया जाता है, तो परिणाम आकृति क्या होगी?



Ans



Q.9 उस संख्या की पहचान करें जो नीचे दी गई श्रृंखला में ? की जगह आएगी।

Question ID : 16794319200

3, 6, 12, 24, ?, 96, 192

Ans ✗ 1. 50

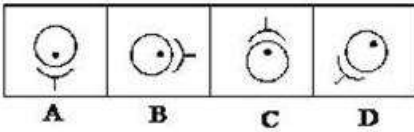
✗ 2. 82

✓ 3. 48

✗ 4. 67

Q.10 नीचे कुछ छवियां दी गई हैं। विषम छवि की पहचान करें।

Question ID : 16794319184



Ans ✗ 1. A

✗ 2. B

✓ 3. D

✗ 4. C

Q.11 सबसे उपयुक्त विकल्प की पहचान करें।

Question ID : 16794319192

एक पेड़ में क्या होना चाहिए?

Ans ✗ 1. फूल

✗ 2. सींग

✓ 3. जड़

✗ 4. फल

Q.12 आप एक प्रवेश परीक्षा लिख रहे हैं। यदि आपको लगता है कि प्रश्नपत्र का उत्तर लिखना बहुत मुश्किल है, तो आपका तार्किक कदम क्या होना चाहिए?

Question ID : 16794319190

Ans ✗ 1.

निरीक्षक और आयोजक को बताएं कि प्रश्न निश्चित रूप से पाठ्यक्रम से बाहर है।

✓ 2.

प्रश्नपत्र को हल करने का प्रयास करें और जितना आप जानते हैं उतने प्रश्न शांत मन के साथ हल करें।

✗ 3.

आंदोलन करें और उम्मीदवारों को परीक्षा कक्ष से बाहर निकलने के लिए उकसाएं।

✗ 4.

परीक्षा कक्ष में अपने सह-प्रतिभागियों से कुछ जानने का प्रयास करें।

Q.13 नीचे दी गई श्रृंखला में अगला अक्षर समूह क्या होगा?

Question ID : 16794319201

MY, NW, OU, PS

Ans ✗ 1. PV

✗ 2. KC

✗ 3. RS

✓ 4. QQ

Q.14 यदि L का अर्थ +, M का अर्थ -, N का अर्थ ×, P का अर्थ ÷ है, तो 6N3L48P8M10 का मान कितना होगा?

Question ID : 16794319195

Ans ✗ 1. 15

✓ 2. 16

✗ 3. 20

✗ 4. 18

Q.15 अर्जुन बालू से 4 साल बड़ा है और चंदू से 4 साल छोटा है, जबकि बालू और दिनेश जुड़वा हैं। चंदू दिनेश से कितने साल बड़ा है?

Question ID : 16794319197

Ans ✗ 1. 6

✗ 2. 10

✗ 3. 12

✓ 4. 8

Q.16 नीचे दी गई श्रृंखला में अगली आकृति क्या होगी?

Question ID : 16794319186



A

B

C

D

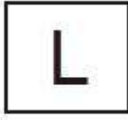
Ans

✗ 1. I

✓ 2. I

✗ 3. M

✗ 4.



Q.17 चार दिए गए शब्द-युग्म के बीच विषम शब्द-युग्म का चयन करें।

Question ID : 16794319182

Ans

✗ 1. यू.के. : पाउंड

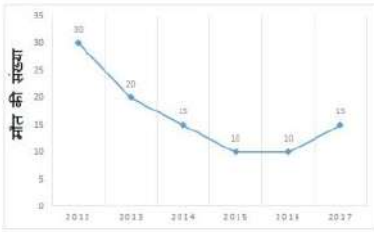
✓ 2. तुर्की : डॉलर

✗ 3. यू.ए.ई. : दिरहम

✗ 4. इराक : दिनार

Q.18 निम्नलिखित ग्राफ में पिछले 6 वर्षों से जनजातीय गांव 'जेड' में डेंगू बुखार की वजह से मृत्यु दर के बारे में जानकारी दी गई है।

Question ID : 16794319187



वर्ष 2014 और 2015 के दौरान गांव 'जेड' में डेंगू के कारण मौतों की संख्या कितनी है?

Ans

✓ 1. 25

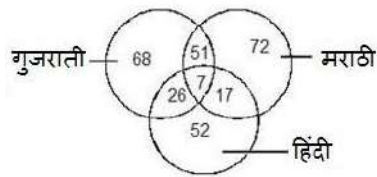
✗ 2. 10

✗ 3. 15

✗ 4. 20

Q.19 निम्नलिखित वेन आरेख ध्यानपूर्वक अध्ययन करें और प्रश्न का उत्तर दें।

Question ID : 16794319193



कितने लोग गुजराती और मराठी बोलते हैं लेकिन हिंदी नहीं बोलते हैं?

Ans

✗ 1. 140

✓ 2. 51

✗ 3. 58

✗ 4. 196

Q.20 शेष विकल्पों की तुलना में एक अलग रिश्ते को साझा करने वाली संख्याओं की विषम युग्म का पता लगाएं।

Question ID : 16794319199

Ans

✗ 1. 6 : 218

✗ 2. 7 : 345

✗ 3. 9 : 731

✓ 4. 11 : 1331

Section : General Awareness

Q.1 उचित विकल्प चुनकर रिक्त स्थान की पूर्ति करें।

Question ID : 16794319213

\_\_\_\_\_ भारत और पाकिस्तान के बीच बार्ता के बाद 1960 में हस्ताक्षरित सिंधु जल संधि का भी एक हस्ताक्षरकर्ता था।

Ans

1. विश्व आर्थिक मंच  
 2. विश्व बैंक  
 3. प्रकृति संरक्षण के लिए अंतर्राष्ट्रीय संघ  
 4. अंतरराष्ट्रीय मुद्रा कोष

Q.2 भारत के निम्नलिखित पूर्व प्रधान मंत्रियों को अपने संबंधित कार्यकाल के आधार पर कालक्रमबद्ध करें:

Question ID : 16794319204

1. वि.पी. सिंह
2. एच.डी. देवेगौडा
3. आई.के. गुजराल
4. चरण सिंह
5. चंद्र शेखर

Ans

1. 3-2-1-5-4  
 2. 3-2-5-1-4  
 3. 2-3-5-1-4  
 4. 4-1-5-2-3

Q.3 उचित विकल्प चुनकर रिक्त स्थान की पूर्ति करें।

Question ID : 16794319216

दूध का \_\_\_\_\_ यह सुनिश्चित करता है कि विटामिन (A/D) उन उपभोक्ताओं तक पहुंचे जो कम मलाई वाला दूध खरीदते हैं।

Ans

1. पास्तुरीकरण  
 2. एकरूपता  
 3. किलाबंदी  
 4. मानकीकरण

Q.4 उचित विकल्प चुनकर रिक्त स्थान की पूर्ति करें।

Question ID : 16794319203

साक्षात् युग पर आधारित राष्ट्रीय दिनांकिका, जिसमें चैत्र पहला महीना है, कुछ आधिकारिक उद्देश्यों के लिए साल \_\_\_\_\_ में अपनाई गई थी।

Ans

1. 1956  
 2. 1957  
 3. 1959  
 4. 1958

Q.5 उचित विकल्प चुनकर रिक्त स्थान की पूर्ति करें।

Question ID : 16794319214

केंद्र सरकार ने 1 जून \_\_\_\_\_ से प्रभावी रूप से राष्ट्रीय कंपनी नियम अधिकरण गठित किया था।

Ans

1. 2014  
 2. 2016  
 3. 2015  
 4. 2013

Q.6 उचित विकल्प चुनकर रिक्त स्थान की पूर्ति करें।

Question ID : 16794319221

UNCLOS यूनाइटेड नेशन्स \_\_\_\_\_ के लिए सागर के कानून का संक्षिप्त रूप है।

- Ans
- 1. कंसोर्टियम
  - 2. कमिशन
  - 3. कन्वेंशन
  - 4. कैम्पेन

Q.7 उचित विकल्प चुनकर रिक्त स्थान की पूर्ति करें।

Question ID : 16794319208

एशियाई खेलों का \_\_\_\_\_ संस्करण इंडोनेशिया में आयोजित किया गया था।

- Ans
- 1. सोलहवाँ
  - 2. अठारहवाँ
  - 3. पंद्रहवाँ
  - 4. सत्रहवाँ

Q.8 भारतीय संसद में \_\_\_\_\_ शामिल नहीं है।

Question ID : 16794319206

- Ans
- 1. राष्ट्रपति
  - 2. राज्य सभा
  - 3. मंत्रिमंडल
  - 4. लोक सभा

Q.9 उचित विकल्प चुनकर रिक्त स्थान की पूर्ति करें।

Question ID : 16794319207

लोकसभा सचिवालय \_\_\_\_\_ के अंतिम नियंत्रण में कार्य करता है।

- Ans
- 1. अध्यक्ष, लोकसभा
  - 2. लोकसभा के महासचिव
  - 3. राष्ट्रपति
  - 4. मंत्री, संसदीय मामलों

Q.10 2018 अगस्त के अंत में, केंद्रीय मंत्रिमंडल में रेल मंत्री कौन थे?

Question ID : 16794319205

- Ans
- 1. डी.वी. सदानंद गोवडा
  - 2. सुरेश प्रभु
  - 3. पियूष गोयल
  - 4. नितिन जे. गडकरी

Q.11 निम्नलिखित में से प्लास्टिक के गलत गुणधर्म का पता लगाएं।

Question ID : 16794319217

Ans

- 1. अग्नि के खराब संचालक
- 2. बिजली के अच्छे संचालक
- 3. पानी के लिए गैर प्रतिक्रियाशील
- 4. मजबूत और नमनीय

Q.12 उचित विकल्प चुनकर रिक्त स्थान की पूर्ति करें।

Question ID : 16794319210

विश्व दर्शनशास्त्र दिवस नवंबर के हर \_\_\_\_\_ गुरुवार को मनाया जाता है।

- Ans
- 1. दुसरे
  - 2. तिसरे
  - 3. चौथे
  - 4. पहले

Q.13 विश्व पर्यावरण दिवस - 2018 का विषय क्या था?

Question ID : 16794319220

- Ans
- 1. सोचिये. खाइये. बचाइये
  - 2. लोगों को प्रकृति से जोड़ना
  - 3. प्लास्टिक प्रदूषण मारो
  - 4. अपनी आवाज उठाओ सागर स्तर नहीं

Q.14 Fill in the blank with the most appropriate option.

Question ID : 16794319219

In 2018, scientists have directly observed definitive evidence of ice on the Moon's surface particularly with the help of the data collected by \_\_\_\_\_.

- Ans
- 1. Clementine
  - 2. Lunar Reconnaissance Orbiter
  - 3. Chandrayaan-1
  - 4. Lunar Prospector

Q.15 Which of the following statement is incorrect in regard to Geographical Indication (GI) of Goods?

Question ID : 16794319212

- Ans
- 1. Is covered as an element of Intellectual Property Rights
  - 2. Is related to place of origin of goods
  - 3. Does not possess the qualities of the product that are due to the origin
  - 4. Is a sign used on products having specific origin

Q.16 उचित विकल्प चुनकर रिक्त स्थान की पूर्ति करें।

Question ID : 16794319218

भारत के गगनयान अंतरिक्ष मिशन का उद्देश्य पांच-सात दिनों के लिए अंतरिक्ष में \_\_\_\_\_ दल भेजना है।

- Ans
- 1. दो व्यक्ति
  - 2. एक व्यक्ति



3. तीन व्यक्ति

4. चार व्यक्ति

Q.17 1829 में भारत के किस गवर्नर जनरल ने सती के रिवाज को खत्म करने के लिए कानून बनाया था?

Question ID : 16794319211

Ans  1. लॉर्ड कॉर्नवालिस

2. लॉर्ड विलियम बेंटिनक

3. लॉर्ड कर्जन

4. लॉर्ड वॉरेन हेस्टिंग्स

Q.18 उचित विकल्प चुनकर रिक्त स्थान की पूर्ति करें।

Question ID : 16794319209

\_\_\_\_\_ ने महिला हॉकी विश्वचषक 2018 की मेजबानी की।

Ans  1. अर्जेंटीना

2. नीदरलैंड

3. इंग्लैंड

4. स्पेन

Q.19 Fill in the blank with the most appropriate option.

Question ID : 16794319215

The acronym STT stands for 'Securities \_\_\_\_\_ Tax'.

Ans  1. Transfer

2. Trading

3. Transaction

4. Transit

Q.20 बिहार और ओडिशा, बंगाल प्रेसीडेंसी से अलग-अलग प्रांतों के रूप में कौन से वर्ष में अलग हुए?

Question ID : 16794319202

Ans  1. 1931

2. 1912

3. 1921

4. 1935

Section : Arithmetic Ability

Q.1 A, B से 25% कम है जबकि C, D से 25% अधिक है यदि D, A से 10% कम है, तो निम्न में से कौनसा सत्य है?

Question ID : 16794319227

Ans  1.  $16 A = 9 C$

2.  $27 C = 32 B$

3.  $16 C = 9 A$

4.  $32 C = 27 B$

Q.2

किसी आयताकार बोर्ड की लंबाई उसकी चौड़ाई से 15 सेमी अधिक है। यदि लंबाई 9 सेमी बढ़ा दी जाए और चौड़ाई 6 सेमी कम कर दी जाए, तो बोर्ड का क्षेत्रफल पहले जितना ही रहता है। बोर्ड की आरंभिक लंबाई और चौड़ाई में क्या अनुपात है?

Question ID : 16794319235

- Ans
- 1. 12 : 7
  - 2. 21 : 16
  - 3. 7 : 6
  - 4. 4 : 3

Q.3 बारह संख्याएँ हैं। पहले चार संख्याओं का औसत 40.5 और पिछली पांच संख्याओं का औसत 42.8 है। छठी संख्या पांचवी संख्या से 0.2 कम और सातवी संख्या से 0.6 बड़ी है। यदि जमी बारह संख्याओं का औसत 43.2 है, तो पांचवीं और सातवीं संख्याओं का औसत क्या है?

Question ID : 16794319226

- Ans
- 1. 47.4
  - 2. 48.2
  - 3. 46.8
  - 4. 46.1

Q.4  $1\frac{2}{5} + 1\frac{2}{3} + 1\frac{1}{3} \div 2\frac{13}{20} \times \frac{1}{2} + \frac{1}{2} \text{ of } \frac{1}{2}$  का मान बराबर है:

Question ID : 16794319224

- Ans
- 1.  $\frac{1}{4}$
  - 2.  $\frac{1}{2}$
  - 3. 4
  - 4. 2

Q.5 माना कि  $x$  चार अंकों की एक बड़ी से बड़ी संख्या है जिसे 6, 9, 12, 15 और 18, से भाग देने पर प्रत्येक दशा में शेषफल 4 प्राप्त होता है। जब  $x$  को 14 से भाग दिया जाए तो शेषफल होगा:

Question ID : 16794319225

- Ans
- 1. 8
  - 2. 6
  - 3. 11
  - 4. 10

Q.6 यदि  $a = \frac{\sqrt{5}-2}{\sqrt{5}+2}$  और  $b = \frac{\sqrt{5}+2}{\sqrt{5}-2}$ , हैं तो  $\frac{a^2-ab+b^2}{a^2+ab+b^2}$  निकटतम है:

Question ID : 16794319223

- Ans
- 1. 0.89
  - 2. 0.09
  - 3. 0.59
  - 4. 0.99

Q.7 A, B से 60% अधिक कार्यदक्ष है। A एक काम को 10 दिन में कर सकता है। दोनों मिलकर 5 दिन काम करते हैं। B अकेला शेष काम को पूरा करेगा:

Question ID : 16794319237

- Ans
- 1.  $3\frac{1}{3}$  दिन में
  - 2. 3 दिन में
  - 3. 2 दिन में

✗ 4.  $5\frac{1}{3}$  दिन में

Q.8 राखी ने अपनी मासिक आय का 15% एक अनाथाश्रम में दान करने का निश्चय किया। आखरी क्षण में उसने अपना निश्चय बदल दिया और 2700 की एक राशी दान दी जो दान में दी जानेवाली पहली राशी से 20% अधिक है। जिस राशी को दान में पहले देने का निश्चय किया था उनका 10% क्या है?

Question ID : 16794319228

- Ans
- ✗ 1. ₹ 255
  - ✗ 2. ₹ 240
  - ✗ 3. ₹ 270
  - ✓ 4. ₹ 225

Q.9 एक लंब वृत्तीय बेलन और एक लंब वृत्तीय शंकु की ऊंचाइयों बराबर हैं और उनके आधार की चिज्याएँ भी बराबर हैं। बेलन और शंकु के बसक पृष्ठीय क्षेत्रफलों में 8 : 5 का अनुपात है। यदि प्रत्येक की ऊंचाई 8 सेमी है तो शंकु का आयतन (सेमी<sup>3</sup> में) है:

Question ID : 16794319234

- Ans
- ✗ 1.  $288\pi$
  - ✗ 2.  $108\pi$
  - ✓ 3.  $96\pi$
  - ✗ 4.  $192\pi$

Q.10  $\frac{(1.8)^3 + (4.5)^3 + (3.7)^3 - 13.5 \times 6.66}{(1.8)^2 + (4.5)^2 + 13.69 - 8.1 - 16.65 - 3 \times 2.22}$  का मान है:

Question ID : 16794319222

- Ans
- ✗ 1. 1
  - ✓ 2. 10
  - ✗ 3. 0.1
  - ✗ 4. 100

Q.11 एक डीलर वस्तुओं को उनके अंकित मूल्य पर 10% की छूट लेकर खरीदता है और उन्हें 15% लाभ पर बेच देता है। यदि वह वस्तुओं को ₹ 2070 में बेचता है, तो वस्तुओं का अंकित मूल्य है:

Question ID : 16794319230

- Ans
- ✗ 1. ₹ 1600
  - ✗ 2. ₹ 1800
  - ✓ 3. ₹ 2000
  - ✗ 4. ₹ 2400

Q.12 सुजाता दो वस्तुओं को ₹ 480 में खरीदती है और एक को 28% हानी पर तथा दूसरी को 12% लाभ पर बेचती है। यदि दोनों वस्तुओं का विक्रयमूल्य समान है, तो उनके क्रयमूल्यों में क्या अंतर है?

Question ID : 16794319229

- Ans
- ✓ 1. ₹ 100
  - ✗ 2. ₹ 180
  - ✗ 3. ₹ 80
  - ✗ 4. ₹ 90

Q.13 एक घोल में अम्ल और पानी का अनुपात 7 : 5 है। घोल का  $\frac{1}{7}$  भाग को निकालकर उसमें उतना ही पानी मिला दिया जाता है। इस प्रकार प्राप्त घोल में पानी और अम्ल का क्या अनुपात है?

Question ID : 16794319232

- Ans
- ✗ 1. 2 : 3
  - ✓ 2. 1 : 1
  - ✗ 3. 3 : 2
  - ✗ 4. 5 : 7

Q.14 64 किमी/घं की गति से चलते हुए, एक रेलगाड़ी सामान्यतः 25 घंटे अपने गंतव्य पर पहुंच जाती है। समय में 9 घंटे की कमी करने के लिए उसकी गति में कितने प्रतिशत की वृद्धि की जाए?

Question ID : 16794319238

Ans

1.  $54\frac{1}{4}$

2.  $56\frac{1}{4}$

3. 50

4. 54

Q.15 एक व्यक्ति को नाव द्वारा धारा के अनुकूल 15 किमी की दूरी तय करने के लिए  $3\frac{3}{4}$  घंटे लगते हैं और धारा के प्रतिकूल 5 किमी की दूरी तय करने में  $2\frac{1}{2}$  घंटे लगते हैं। उसको शांत जल में नाव द्वारा 18 किमी की दूरी तय करने के लिए कितना समय (घंटे में) लगेगा?

Question ID : 16794319239

Ans

1. 6

2. 4

3.  $3\frac{3}{5}$

4.  $5\frac{1}{2}$

Q.16 अभि ने ₹ x की एक राशी 10% वार्षिक दर पर  $1\frac{1}{2}$  वर्ष के लिए उधार ली जबकि ब्याज वार्षिक संयोजित था। अभित ने भी उतनी ही राशी उसी दर पर उसी समय के लिए उधार ली पर ब्याज अर्धवार्षिक संयोजित था। यदि उन दोनों के द्वारा दी गई ब्याज की राशियों में ₹ 40.95, का अंतर है, तो x का मान क्या है?

Question ID : 16794319233

Ans

1. ₹ 16000

2. ₹ 15600

3. ₹ 15800

4. ₹ 15400

Q.17 ₹ 5451 की एक राशी A, B तथा C में  $\frac{2}{3} : \frac{4}{5} : \frac{5}{6}$  के अनुपात में बांटी जाती थी पर गलती से उसको  $\frac{3}{2} : \frac{5}{4} : \frac{5}{6}$  के अनुपात में बांट दिया गया। इसके परिणाम स्वरूप:

Question ID : 16794319231

Ans

1. B और C के भागों में कोई अंतर नहीं हुआ

2. B को ₹ 117 कम मिले

3. A को ₹ 480 अधिक मिले

4. C को ₹ 319 कम मिले

Q.18 तीन पुरुष और 4 महिलाएँ मिलकर एक काम को 7 दिन में पूरा कर सकते हैं, जबकि उसी काम को 5 पुरुष और एक महिला मिलकर 14 दिन में पूरा कर सकते हैं। काम को 2 दिन में पूरा करने के लिए 7 पुरुषों के साथ कितनी महिलाओं को काम करना होगा?

Question ID : 16794319236

Ans

1. 8

2. 1

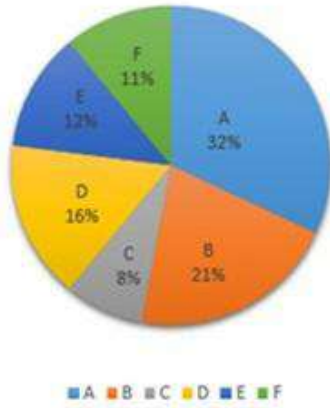
3. 7

4. 12

Comprehension:

निम्न पाई-चार्ट और सारणी को अध्ययन करके उत्तर दीजिए:

कंपनी 'X' के विभिन्न नगरों में कर्मचारियों का प्रतिशतता के अनुसार बंटन



कर्मचारियों की कुल संख्या = 3600

नगर	पुरुष	:	महिलाएँ
A	5	:	4
B	4	:	3
C	7	:	9
D	5	:	7
E	11	:	13
F	6	:	5

SubQuestion No : 19

Q.1 नगर B तथा E में कुल मिलाकर पुरुष कर्मचारियों की संख्या का नगर B, D तथा F में कुल महिला कर्मचारियों की संख्या का अनुपात है।

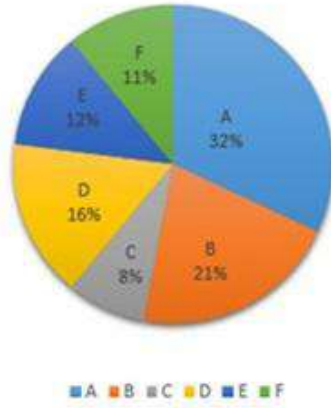
Question ID : 16794319241

- Ans
- 1. 4 : 5
  - 2. 5 : 6
  - 3. 3 : 4
  - 4. 2 : 3

Comprehension:

निम्न पाई-चार्ट और सारणी को अध्ययन करके उत्तर दीजिए:

कंपनी 'X' के विभिन्न नगरों में कर्मचारियों का प्रतिशतता के अनुसार बंटन



कर्मचारियों की कुल संख्या = 3600

नगर	पुरुष	:	महिलाएँ
A	5	:	4
B	4	:	3
C	7	:	9
D	5	:	7
E	11	:	13
F	6	:	5

SubQuestion No : 20

Q.2 नगर A में महिला कर्मचारियों की संख्या, नगर C तथा E में कुल कर्मचारियों की संख्या से लगभग कितने प्रतिशत है?

Question ID : 16794319242

- Ans
- 1. 27.6%
  - 2. 28.9%
  - 3. 30.2%
  - 4. 28.4%

Section : General English

Q.1 In the following sentence, some part of the sentence may contain an error. Identify which part it is and indicate it. If the statement is error-free, choose 'no error'.

A rice crop / soaked by acid rain / can be saved / if it is rinsed with clean water / No error

Question ID : 16794319250

- Ans
- 1. can be saved

2. if it is rinsed with clean water

3. No error

4. soaked by acid rain

Q.2 Change the voice of the below sentence.

Question ID : 16794319248

Sheila replied, "The blue saree suits you the best".

Ans  1.

Sheila replied that the blue saree suited me the best.

2.

Sheila preferred the blue saree to all the others.

3.

Sheila thought the blue saree was most suitable.

4.

Sheila expressed her preference for the blue saree.

Q.3 Rearrange the sentence fragments below in the correct order to form a meaningful sentence.

Question ID : 16794319246

- A) The law has halted the development of
- B) The oil and gas industry has complained that
- C) Millions of acres of land

Ans  1. ABC

2. BAC

3. CAB

4. ACB

Q.4 Fill in the blank with the most appropriate option.

Question ID : 16794319253

Before \_\_\_\_\_ money, banks have to assess the risks involved.

Ans  1. lend

2. lending

3. borrowing

4. they lent

Q.5 Substitute the phrase below with one word from the options provided.

Question ID : 16794319257

Something no longer in use

Ans  1. Obsolete

2. Primitive

3. Absolute

4. Desolate

Q.6 Fill in the blank with the most appropriate option.

Question ID : 16794319251

I cut my finger while slicing onions and it became badly \_\_\_\_\_.

Ans  1. infected

- 2. affected
- 3. effected
- 4. diseased

Q.7 In the following question, choose the option that best expresses the meaning of the word provided.

Question ID : 16794319244

Disrupt

- Ans
- 1. Disturb
  - 2. Spoil
  - 3. Throw
  - 4. Tear

Q.8 Fill in the blank with the most appropriate option.

Question ID : 16794319252

She has always gone \_\_\_\_\_ creative hobbies like knitting and pottery.

- Ans
- 1. into
  - 2. by
  - 3. through
  - 4. in for

Q.9 Fill in the blank with the most appropriate option.

Question ID : 16794319243

"Fifty years ago, we could not see limits to what we could \_\_\_\_\_ into the ocean, or what we could take out" (Dr. Sylvia Earle, Oceanographer).

- Ans
- 1. recycle
  - 2. put
  - 3. accept
  - 4. dispose

Q.10 Substitute the phrase below with one word from the options provided.

Question ID : 16794319256

Words written on a tomb

- Ans
- 1. Epigraph
  - 2. Soliloquy
  - 3. Epithet
  - 4. Epitaph

Q.11 Choose the option that best defines the word in capital letters.

Question ID : 16794319255

ALACRITY

- Ans
- 1. Anxious awareness of danger
  - 2. Unwilling to spend money
  - 3. Brisk and cheerful readiness
  - 4. Lacking fairness or justice

Q.12

Question ID : 16794319254



Which of the options is closest in meaning to the word below?

Punctilious

- Ans  1. unceremonious  
 2. scrupulous  
 3. punctual  
 4. informal

Q.13 In the following question, choose the option that is opposite in meaning to the word provided.

Question ID : 16794319245

Conversant

- Ans  1. Ignorant  
 2. Quiet  
 3. Knowledgeable  
 4. Talkative

Q.14 Change the voice of the below sentence.

Question ID : 16794319247

The force of the wind turned the leaves upside down.

- Ans  1.  
The leaves were turned upside down by the force of the wind.  
 2.  
Turning the leaves upside down was caused by the force of the wind.  
 3. The leaves turning upside down.  
 4.  
The force of the wind turning the leaves upside down.

Q.15 What oft quoted phrase would apply to someone who says, "I don't need anyone to help me get where I want to go."?

Question ID : 16794319249

- Ans  1. No man is an island.  
 2. Not man is one island.  
 3. No man is on an island.  
 4. No men are islands.

**Comprehension:**

Read the following passage and answer the questions given after it.

India is urbanising faster than its urban planners can handle. We are building roads, bridges, fly-overs, factories, commercial complexes and also building and renovating our homes and residential properties. But we do not pay sufficient heed to the construction and demolition (C&D) waste we generate, for example, bricks, concrete, stones, hard core subsoil, topsoil, timber, glass, gypsum, ceramics and also plastics. Neglecting this waste has consequences for public health as well as the environment.

There is no agreement on the volume of C&D waste. The Ministry of Environment, Forests and Climate Change in 2010, put the annual estimate of C&D waste at 10-12 million tonnes. The Central Pollution Control Board settled for 12 million tonnes in 2011, but its Guidelines Document of 2017 has upped the estimate to 25-30 million tonnes, based on information from the Ministry of Urban Development. The Centre for Science and Environment swung to the other extreme and estimated C&D waste at a humongous 530 million tonnes for 2013, as they included the waste from renovations/repairs, assuming that one-third of the existing stock of buildings carried out renovations/repairs in 2013.

The most recent annual estimate of C&D waste in Indian cities is 165-175 million tonnes, jointly prepared for the period 2005 to 2013, by two government agencies, the Building Materials and Technology Promotion Council, and the Centre for Fly Ash Research and Management. This waste is dumped illegally on vacant sites, on the sides of highways, below fly-overs, beside lakes and rivers, in other low-lying areas and open storm water drains. Delhi and Bengaluru provide glaring examples of this practice, commonly known as “fly-tipping”. In Bengaluru, C&D waste is increasingly being used to encroach on lake-bed land for construction.

Delhi’s air pollution is in no small measure due to the high presence of particulate matter (PM 2.5 and PM 10), resulting from the construction debris strewn around the city. Water logging, with all its adverse impact on public health and the environment, is another consequence as the runoff from smooth surfaces is trapped in the debris.

Other countries have faced similar challenges and have done something about it. Germany faced huge issues in disposing of the post-war bomb rubble. Stuttgart solved this problem by creating a mini-hillock outside the town which is now a recreational hand-gliding spot. While C&D waste was earlier typically sent to dump sites in many countries, in the past 20 years or so there has been a greater appreciation of the reuse and recycling possibilities of the waste into construction material (recycled aggregate concrete, manufactured sand, etc.) and its implication for the conservation of natural resources.

Q.1  
6 According to the author the latest thinking about C&D waste is to:

Question ID : 16794319263

- Ans
- 1. spread it in the lake bed to reclaim land
  - 2. create a mini hill as a recreational site
  - 3. recycle it to use as construction material
  - 4. send it to the dumping sites

**Comprehension:**

Read the following passage and answer the questions given after it.

India is urbanising faster than its urban planners can handle. We are building roads, bridges, fly-overs, factories, commercial complexes and also building and renovating our homes and residential properties. But we do not pay sufficient heed to the construction and demolition (C&D) waste we generate, for example, bricks, concrete, stones, hard core subsoil, topsoil, timber, glass, gypsum, ceramics and also plastics. Neglecting this waste has consequences for public health as well as the environment.

There is no agreement on the volume of C&D waste. The Ministry of Environment, Forests and Climate Change in 2010, put the annual estimate of C&D waste at 10-12 million tonnes. The Central Pollution Control Board settled for 12 million tonnes in 2011, but its Guidelines Document of 2017 has upped the estimate to 25-30 million tonnes, based on information from the Ministry of Urban Development. The Centre for Science and Environment swung to the other extreme and estimated C&D waste at a humongous 530 million tonnes for 2013, as they included the waste from renovations/repairs, assuming that one-third of the existing stock of buildings carried out renovations/repairs in 2013.

The most recent annual estimate of C&D waste in Indian cities is 165-175 million tonnes, jointly prepared for the period 2005 to 2013, by two government agencies, the Building Materials and Technology Promotion Council, and the Centre for Fly Ash Research and Management. This waste is dumped illegally on vacant sites, on the sides of highways, below fly-overs, beside lakes and rivers, in other low-lying areas and open storm water drains. Delhi and Bengaluru provide glaring examples of this practice, commonly known as “fly-

tipping”. In Bengaluru, C&D waste is increasingly being used to encroach on lake-bed land for construction.

Delhi’s air pollution is in no small measure due to the high presence of particulate matter (PM 2.5 and PM 10), resulting from the construction debris strewn around the city. Water logging, with all its adverse impact on public health and the environment, is another consequence as the runoff from smooth surfaces is trapped in the debris.

Other countries have faced similar challenges and have done something about it. Germany faced huge issues in disposing of the post-war bomb rubble. Stuttgart solved this problem by creating a mini-hillock outside the town which is now a recreational hand-gliding spot. While C&D waste was earlier typically sent to dump sites in many countries, in the past 20 years or so there has been a greater appreciation of the reuse and recycling possibilities of the waste into construction material (recycled aggregate concrete, manufactured sand, etc.) and its implication for the conservation of natural resources.

SubQuestion No : 17

Q.1  
7 In Delhi the C&D waste creates:

Question ID : 16794319262

- a. water logging as the water gets trapped under the debris.
- b. fly-tipping as the waste is dumped on vacant sites, under the fly-overs etc.
- c. air pollution due to the presence of particulate matter the waste.

Of the above which are correct?

- Ans
- 1. a and c are true
  - 2. c and b are true
  - 3. a and b are true
  - 4. a, b and c all are true

Comprehension:

Read the following passage and answer the questions given after it.

India is urbanising faster than its urban planners can handle. We are building roads, bridges, fly-overs, factories, commercial complexes and also building and renovating our homes and residential properties. But we do not pay sufficient heed to the construction and demolition (C&D) waste we generate, for example, bricks, concrete, stones, hard

core subsoil, topsoil, timber, glass, gypsum, ceramics and also plastics. Neglecting this waste has consequences for public health as well as the environment.

There is no agreement on the volume of C&D waste. The Ministry of Environment, Forests and Climate Change in 2010, put the annual estimate of C&D waste at 10-12 million tonnes. The Central Pollution Control Board settled for 12 million tonnes in 2011, but its Guidelines Document of 2017 has upped the estimate to 25-30 million tonnes, based on information from the Ministry of Urban Development. The Centre for Science and Environment swung to the other extreme and estimated C&D waste at a humongous 530 million tonnes for 2013, as they included the waste from renovations/repairs, assuming that one-third of the existing stock of buildings carried out renovations/repairs in 2013.

The most recent annual estimate of C&D waste in Indian cities is 165-175 million tonnes, jointly prepared for the period 2005 to 2013, by two government agencies, the Building Materials and Technology Promotion Council, and the Centre for Fly Ash Research and Management. This waste is dumped illegally on vacant sites, on the sides of highways, below fly-overs, beside lakes and rivers, in other low-lying areas and open storm water drains. Delhi and Bengaluru provide glaring examples of this practice, commonly known as “fly-tipping”. In Bengaluru, C&D waste is increasingly being used to encroach on lake-bed land for construction.

Delhi’s air pollution is in no small measure due to the high presence of particulate matter (PM 2.5 and PM 10), resulting from the construction debris strewn around the city. Water logging, with all its adverse impact on public health and the environment, is another consequence as the runoff from smooth surfaces is trapped in the debris.

Other countries have faced similar challenges and have done something about it. Germany faced huge issues in disposing of the post-war bomb rubble. Stuttgart solved this problem by creating a mini-hillock outside the town which is now a recreational hand-gliding spot. While C&D waste was earlier typically sent to dump sites in many countries, in the past 20 years or so there has been a greater appreciation of the reuse and recycling possibilities of the waste into construction material

(recycled aggregate concrete, manufactured sand, etc.) and its implication for the conservation of natural resources.

SubQuestion No : 18

Q.1  
8 After the reading of this passage it can be inferred that it is:

Question ID : 16794319259

- Ans
- 1. a survey report
  - 2. an article
  - 3. a newspaper editorial
  - 4. a news item

Comprehension:

Read the following passage and answer the questions given after it.

India is urbanising faster than its urban planners can handle. We are building roads, bridges, fly-overs, factories, commercial complexes and also building and renovating our homes and residential properties. But we do not pay sufficient heed to the construction and demolition (C&D) waste we generate, for example, bricks, concrete, stones, hard core subsoil, topsoil, timber, glass, gypsum, ceramics and also plastics. Neglecting this waste has consequences for public health as well as the environment.

There is no agreement on the volume of C&D waste. The Ministry of Environment, Forests and Climate Change in 2010, put the annual estimate of C&D waste at 10-12 million tonnes. The Central Pollution Control Board settled for 12 million tonnes in 2011, but its Guidelines Document of 2017 has upped the estimate to 25-30 million tonnes, based on information from the Ministry of Urban Development. The Centre for Science and Environment swung to the other extreme and estimated C&D waste at a humongous 530 million tonnes for 2013, as they included the waste from renovations/repairs, assuming that one-third of the existing stock of buildings carried out renovations/repairs in 2013.

The most recent annual estimate of C&D waste in Indian cities is 165-175 million tonnes, jointly prepared for the period 2005 to 2013, by two government agencies, the Building Materials and Technology Promotion Council, and the Centre for Fly Ash Research and Management. This waste is dumped illegally on vacant sites, on the

sides of highways, below fly-overs, beside lakes and rivers, in other low-lying areas and open storm water drains. Delhi and Bengaluru provide glaring examples of this practice, commonly known as “fly-tipping”. In Bengaluru, C&D waste is increasingly being used to encroach on lake-bed land for construction.

Delhi’s air pollution is in no small measure due to the high presence of particulate matter (PM 2.5 and PM 10), resulting from the construction debris strewn around the city. Water logging, with all its adverse impact on public health and the environment, is another consequence as the runoff from smooth surfaces is trapped in the debris.

Other countries have faced similar challenges and have done something about it. Germany faced huge issues in disposing of the post-war bomb rubble. Stuttgart solved this problem by creating a mini-hillock outside the town which is now a recreational hand-gliding spot. While C&D waste was earlier typically sent to dump sites in many countries, in the past 20 years or so there has been a greater appreciation of the reuse and recycling possibilities of the waste into construction material (recycled aggregate concrete, manufactured sand, etc.) and its implication for the conservation of natural resources.

SubQuestion No : 19

Q.1  
9 Which agency’s estimate of the volume of C&D waste has been the highest?

Question ID : 16794319261

- Ans
- 1. The Centre for Fly Ash Research and Management.
  - 2. The Ministry of Environment, Forests and Climate Change
  - 3. The Centre for Science and Environment
  - 4. The Central Pollution Control Board

Comprehension:

Read the following passage and answer the questions given after it.

India is urbanising faster than its urban planners can handle. We are building roads, bridges, fly-overs, factories, commercial complexes and also building and renovating our homes and residential properties. But we do not pay sufficient heed to the construction and demolition (C&D) waste we generate, for example, bricks, concrete, stones, hard core subsoil, topsoil, timber, glass, gypsum, ceramics and also plastics.

Neglecting this waste has consequences for public health as well as the environment.

There is no agreement on the volume of C&D waste. The Ministry of Environment, Forests and Climate Change in 2010, put the annual estimate of C&D waste at 10-12 million tonnes. The Central Pollution Control Board settled for 12 million tonnes in 2011, but its Guidelines Document of 2017 has upped the estimate to 25-30 million tonnes, based on information from the Ministry of Urban Development. The Centre for Science and Environment swung to the other extreme and estimated C&D waste at a humongous 530 million tonnes for 2013, as they included the waste from renovations/repairs, assuming that one-third of the existing stock of buildings carried out renovations/repairs in 2013.

The most recent annual estimate of C&D waste in Indian cities is 165-175 million tonnes, jointly prepared for the period 2005 to 2013, by two government agencies, the Building Materials and Technology Promotion Council, and the Centre for Fly Ash Research and Management. This waste is dumped illegally on vacant sites, on the sides of highways, below fly-overs, beside lakes and rivers, in other low-lying areas and open storm water drains. Delhi and Bengaluru provide glaring examples of this practice, commonly known as “fly-tipping”. In Bengaluru, C&D waste is increasingly being used to encroach on lake-bed land for construction.

Delhi’s air pollution is in no small measure due to the high presence of particulate matter (PM 2.5 and PM 10), resulting from the construction debris strewn around the city. Water logging, with all its adverse impact on public health and the environment, is another consequence as the runoff from smooth surfaces is trapped in the debris.

Other countries have faced similar challenges and have done something about it. Germany faced huge issues in disposing of the post-war bomb rubble. Stuttgart solved this problem by creating a mini-hillock outside the town which is now a recreational hand-gliding spot. While C&D waste was earlier typically sent to dump sites in many countries, in the past 20 years or so there has been a greater appreciation of the reuse and recycling possibilities of the waste into construction material (recycled aggregate concrete, manufactured sand, etc.) and its



implication for the conservation of natural resources.

SubQuestion No : 20

Q.2  
0 What is the main purpose of the passage?

Question ID : 16794319260

Ans ✓ 1.

to point out that the improper disposal of C&D waste creates health and environmental issues

✗ 2.

to stress how other countries manage their problem of C&D waste

✗ 3.

to estimate the volume of the C&D waste in the country

✗ 4.

to showcase how the different agencies disagree on the amount of C& D waste

Section : General Hindi

Comprehension:

नीचे दिये गए गद्यांश को पढ़कर पूछे गये प्रश्नों के उत्तर दीजिए।

शुक्ल जी कबीर की प्रतिभा के कायल तो थे लेकिन उनके काव्य की मार्मिकता के बारे में प्रायः मौन थे। वे निर्गुण पंथ की ज्ञानाश्रयीधारा को लोक-भूमि पर स्थित नहीं मानते थे। निर्गुणपंथ का हठयोग और उनकी रहस्यात्मक अंतस्साधना, उलटबाँसी शुक्ल जी की रुचि की नहीं थी। सवर्ण-समाज से उपेक्षित और तिरस्कृत अवर्णों की विचारधारा और उनकी भावना सवर्ण विचारधारा से भिन्न होगी, इसे शुक्ल जी ने नहीं समझा। इसलिए पं. हजारीप्रसाद द्विवेदी को कबीर की जुलाहा जाति, वर्ण-व्यवस्था के प्रति उनके विद्रोह-आक्रोश को समझाने की आवश्यकता पड़ी। द्विवेदी जी ने कबीर को साहित्यिक भूमि पर नए सिरे से प्रतिष्ठित किया।

SubQuestion No : 1

Q.1 निम्नलिखित में से किसका संबंध निर्गुण पंथ से नहीं है?

Question ID : 16794319266

Ans ✓ 1. अवतारवाद

✗ 2. उलटबाँसी

✗ 3. रहस्यात्मक अंतस्साधना

## ✗ 4. हठयोग

Comprehension:

नीचे दिये गए गद्यांश को पढ़कर पूछे गये प्रश्नों के उत्तर दीजिए।

शुक्ल जी कबीर की प्रतिभा के कायल तो थे लेकिन उनके काव्य की मार्मिकता के बारे में प्रायः मौन थे। वे निर्गुण पंथ की जानाश्रयीधारा को लोक-भूमि पर स्थित नहीं मानते थे। निर्गुणपंथ का हठयोग और उनकी रहस्यात्मक अंतस्साधना, उलटबाँसी शुक्ल जी की रुचि की नहीं थी। सवर्ण-समाज से उपेक्षित और तिरस्कृत अवर्णों की विचारधारा और उनकी भावना सवर्ण विचारधारा से भिन्न होगी, इसे शुक्ल जी ने नहीं समझा। इसलिए पं. हजारीप्रसाद द्विवेदी को कबीर की जुलाहा जाति, वर्ण-व्यवस्था के प्रति उनके विद्रोह-आक्रोश को समझाने की आवश्यकता पड़ी। द्विवेदी जी ने कबीर को साहित्यिक भूमि पर नए सिरे से प्रतिष्ठित किया।

SubQuestion No : 2

Q.2 शुक्ल जी कबीर के किस गुण के कायल थे?

Question ID : 16794319269

- Ans
- ✗ 1. विचारधारा
  - ✗ 2. सामाजिक चेतना
  - ✗ 3. भाषा
  - ✓ 4. प्रतिभा

Comprehension:

नीचे दिये गए गद्यांश को पढ़कर पूछे गये प्रश्नों के उत्तर दीजिए।

शुक्ल जी कबीर की प्रतिभा के कायल तो थे लेकिन उनके काव्य की मार्मिकता के बारे में प्रायः मौन थे। वे निर्गुण पंथ की जानाश्रयीधारा को लोक-भूमि पर स्थित नहीं मानते थे। निर्गुणपंथ का हठयोग और उनकी रहस्यात्मक अंतस्साधना, उलटबाँसी शुक्ल जी की रुचि की नहीं थी। सवर्ण-समाज से उपेक्षित और तिरस्कृत अवर्णों की विचारधारा और उनकी भावना सवर्ण विचारधारा से भिन्न होगी, इसे शुक्ल जी ने नहीं समझा। इसलिए पं. हजारीप्रसाद द्विवेदी को कबीर की जुलाहा जाति, वर्ण-व्यवस्था के प्रति उनके विद्रोह-आक्रोश को समझाने की आवश्यकता पड़ी। द्विवेदी जी ने कबीर को साहित्यिक भूमि पर नए सिरे से प्रतिष्ठित किया।

SubQuestion No : 3

Q.3 कबीर का संबंध किस जाति से था?

Question ID : 16794319268

- Ans
- 1. निषाद
  - 2. अहीर
  - 3. जुलाहा
  - 4. हरिजन

Comprehension:

नीचे दिये गए गद्यांश को पढ़कर पूछे गये प्रश्नों के उत्तर दीजिए।

शुक्ल जी कबीर की प्रतिभा के कायल तो थे लेकिन उनके काव्य की मार्मिकता के बारे में प्रायः मौन थे। वे निर्गुण पंथ की ज्ञानाश्रयीधारा को लोक-भूमि पर स्थित नहीं मानते थे। निर्गुणपंथ का हठयोग और उनकी रहस्यात्मक अंतस्साधना, उलटबाँसी शुक्ल जी की रुचि की नहीं थी। सवर्ण-समाज से उपेक्षित और तिरस्कृत अवर्णों की विचारधारा और उनकी भावना सवर्ण विचारधारा से भिन्न होगी, इसे शुक्ल जी ने नहीं समझा। इसलिए पं. हजारीप्रसाद द्विवेदी को कबीर की जुलाहा जाति, वर्ण-व्यवस्था के प्रति उनके विद्रोह-आक्रोश को समझाने की आवश्यकता पड़ी। द्विवेदी जी ने कबीर को साहित्यिक भूमि पर नए सिरे से प्रतिष्ठित किया।

SubQuestion No : 4

Q.4 शुक्ल जी किस धारा को लोकभूमि पर स्थित नहीं मानते थे?

Question ID : 16794319265

- Ans
- 1. राममार्गी धारा
  - 2. ज्ञानाश्रयी धारा
  - 3. प्रेमाश्रयी धारा
  - 4. कृष्णमार्गी धारा

Comprehension:

नीचे दिये गए गद्यांश को पढ़कर पूछे गये प्रश्नों के उत्तर दीजिए।

शुक्ल जी कबीर की प्रतिभा के कायल तो थे लेकिन उनके काव्य की मार्मिकता के बारे में प्रायः मौन थे। वे निर्गुण पंथ की ज्ञानाश्रयीधारा को लोक-भूमि पर स्थित नहीं मानते थे। निर्गुणपंथ का हठयोग और उनकी रहस्यात्मक अंतस्साधना, उलटबाँसी शुक्ल जी की रुचि की नहीं थी। सवर्ण-समाज से उपेक्षित और तिरस्कृत अवर्णों की विचारधारा और उनकी भावना सवर्ण विचारधारा से भिन्न होगी, इसे शुक्ल जी ने नहीं समझा। इसलिए पं. हजारीप्रसाद द्विवेदी को कबीर की जुलाहा जाति, वर्ण-व्यवस्था के प्रति उनके विद्रोह-आक्रोश को समझाने की आवश्यकता पड़ी। द्विवेदी जी ने कबीर को साहित्यिक भूमि पर नए सिरे से प्रतिष्ठित किया।

SubQuestion No : 5

Q.5 किसने कबीर को साहित्यिक भूमि पर नए सिरे से प्रतिष्ठित किया?

Question ID : 16794319267

- Ans
- 1. नामवर सिंह
  - 2. रामचन्द्र शुक्ल
  - 3. हजारीप्रसाद द्विवेदी
  - 4. रामविलास शर्मा

Q.6 'बीचोबीच' में समास है:

Question ID : 16794319276

- Ans
- 1. अव्ययीभाव
  - 2. द्विगु
  - 3. द्वंद्व
  - 4. तत्पुरुष

Q.7 'अभियान' में उपसर्ग है:

Question ID : 16794319278

- Ans
- 1. अभि
  - 2. अभ
  - 3. आ
  - 4. अ

Q.8 'तालाब' का पर्यायवाची है:

Question ID : 16794319280

- Ans
- 1. भास्कर
  - 2. प्रभाकर

✓ 3. पद्माकर

✗ 4. सुधाकर

Q.9 'तेजोपुंज' का संधि विच्छेद होगा:

Question ID : 16794319275

Ans ✗ 1. तेजा + पुंज

✗ 2. तेजो + पुंज

✓ 3. तेजः + पुंज

✗ 4. तेज + पुंज

Q.10 निम्नलिखित में शुद्ध वर्तनी वाला शब्द है:

Question ID : 16794319283

Ans ✗ 1. राजनितिक

✓ 2. राजनीतिक

✗ 3. राजनीतीक

✗ 4. राजनितीक

Q.11 निम्नलिखित में से कौन सा शब्द तत्सम है?

Question ID : 16794319270

Ans ✗ 1. सच

✗ 2. लोहा

✓ 3. सत्व

✗ 4. शक्कर

Q.12 निम्नलिखित में व्यक्तिवाचक संज्ञा कौन सी है?

Question ID : 16794319272

Ans ✗ 1. मित्र

✗ 2. सदी

✓ 3. गंगा

✗ 4. दूध

Q.13 निम्नलिखित में कौन सा शब्द पुल्लिङ्ग है?

Question ID : 16794319277

Ans ✗ 1. आदत

✓ 2. आलस्य

✗ 3. आग

✗ 4. आय

Q.14 निम्नलिखित में कौन सा शब्द अव्यय है?

Question ID : 16794319274

Ans ✗ 1. अगला

- 2. लाल
- 3. इधर
- 4. दायाँ

Q.15 'जो सबको समान भाव से देखता हो' के लिए एक शब्द होगा:

Question ID : 16794319282

Ans

- 1. समदर्शी
- 2. प्रियदर्शी
- 3. सूक्ष्मदर्शी
- 4. दूरदर्शी

Q.16 'मेरे को तुम्हारा घर पसंद है।' वाक्य में अशुद्ध अंश है:

Question ID : 16794319284

Ans

- 1. मेरे को
- 2. तुम्हारा
- 3. घर
- 4. पसंद है।

Q.17 'ससुराल' में प्रत्यय है:

Question ID : 16794319279

Ans

- 1. स
- 2. वाल
- 3. आल
- 4. राल

Q.18 निजवाचक सर्वनाम है:

Question ID : 16794319273

Ans

- 1. वह
- 2. मैं
- 3. आप
- 4. तुम

Q.19 निम्नलिखित में तद्भव शब्द कौन सा है?

Question ID : 16794319271

Ans

- 1. वाष्प
- 2. विभूति
- 3. भक्त
- 4. भाई

Q.20 'स्वावलंबी' का विलोम होगा:

Question ID : 16794319281

Ans

- 1. परावलंबी

- 2. परावलंबन
- 3. अवलंबन
- 4. आलंबन

Section : Subject Related

Q.1 निम्नलिखित में से कौन सा विकल्प, रबीन्द्र नाथ टैगोर द्वारा अपनी नाइट की उपाधि को त्याग कर अंग्रेजों पर अपना क्रोध व्यक्त करने के लिए एक प्रेरण था?

Question ID : 16794319303

- Ans
- 1. नमक सत्याग्रह
  - 2. राउलैट एक्ट
  - 3. भारत छोड़ो आंदोलन
  - 4. जालियांवाला बाग के अत्याचार

Q.2 किस वर्ष में चिन्हट युद्ध में अंग्रेजों को पराजय का सामना करना पड़ा था?

Question ID : 16794319295

- Ans
- 1. 10 मई, 1801
  - 2. 30 जून, 1857
  - 3. 10 मई, 1857
  - 4. 30 मई, 1857

Q.3 सिपाहियों के साथ, \_\_\_\_\_ ने भी मिलकर दिल्ली को लूटा। जिसके प्रभाव से दिल्ली 11 मई, 1857 से अंग्रेजों के नियंत्रण से बाहर हो गई।

Question ID : 16794319296

- Ans
- 1. राजतंत्र
  - 2. अंग्रेजों
  - 3. सामान्य जनता
  - 4. विद्रोहियों

Q.4 डरबन, दक्षिण अफ्रीका के 1895 के नेटल कांग्रेस के संस्थापकों में से किसी एक की पहचान करें।

Question ID : 16794319302

- Ans
- 1. एलबर्टिना सिसुलु
  - 2. एम.के. गांधी
  - 3. नेल्सन मंडेला
  - 4. आर्कबिशप डेस्मंड टुटु

Q.5 हिंदुस्तान सोशलिस्ट रिपब्लिकन एसोसिएशन का गठन किसने किया था?

Question ID : 16794319304

- Ans
- 1. भगत सिंह
  - 2. लाला लाजपत राय
  - 3. रबिन्द्रनाथ टैगोर
  - 4. जिन्ना

Q.6 "रानी विक्टोरिया को सलाह पत्र (लेटर टु एडवाइस क्वीन विक्टोरिया)" के लेखक कौन हैं?

Question ID : 16794319288

- Ans
- 1. केंगकसी
  - 2. यांगजेंग
  - 3. लिन-ज़ी-जू
  - 4. कियानलॉन्ग

Q.7 'पाँवर्टी एण्ड अन-ब्रिटिश रूल' पुस्तक के लेखक कौन हैं?

Question ID : 16794319300

- Ans
- 1. ए.ओ. ह्यूम
  - 2. दादाभाई नौरोजी
  - 3. डब्ल्यू.सी. बनर्जी
  - 4. एस. सुब्रमण्य अय्यर

Q.8 आंध्र क्षेत्र में स्वदेशी आंदोलन की गूंज कैसे सुनाई दी थी?

Question ID : 16794319301

- Ans
- 1. भारत छोड़ो आंदोलन
  - 2. वंदेमातरम आंदोलन
  - 3. भारत आंदोलन
  - 4. दक्षिण भारत आंदोलन

Q.9 ब्रिटेन को हराने के लिए, फ्रांस ने \_\_\_\_\_ को स्वतंत्र बनाने हेतु समर्थन प्रदान किया था।

Question ID : 16794319292

- Ans
- 1. चीन
  - 2. आयरलैंड
  - 3. अमरीकी उपनिवेशों
  - 4. भारत

Q.10 गोरखा युद्ध के दौरान \_\_\_\_\_ की खोज हुई थी।

Question ID : 16794319290

- Ans
- 1. दार्जिलिंग
  - 2. ऊटी
  - 3. माउंट आबु
  - 4. शिमला

Q.11 निम्नलिखित में से कौन सा क्षेत्र, स्वतंत्रता की पहली लड़ाई के दौरान अंग्रेजों के नियंत्रण के अधीन नहीं था?

Question ID : 16794319298

- Ans
- 1. अर्काट
  - 2. बनारस
  - 3. सिंध
  - 4. हैदराबाद निज़ाम



Q.12 1791 के संविधान के तहत, राष्ट्रीय असेंबली, \_\_\_\_\_ का नियंत्रण करती है।

Question ID : 16794319293

- Ans
- 1. निष्क्रिय नागरिक
  - 2. राजा और मंत्री
  - 3. सक्रिय नागरिक
  - 4. न्यायपालिका

Q.13 वर्ष 1789 के गीष्म मौसम में बैस्टिले पर आक्रमण के तुरंत बाद, एक महत्वपूर्ण कानून को प्रभावी बनाया गया था, जिसे \_\_\_\_\_ कहते हैं।

Question ID : 16794319294

- Ans
- 1. राजा और मंत्रियों द्वारा राष्ट्रीय असेंबली का संचालन
  - 2. पादरी द्वारा कर का भुगतान
  - 3. नियंत्रण का उन्मूलन
  - 4. राजा द्वारा न्यायपालिका की नियुक्ति

Q.14 18वीं शताब्दी में, लंदन त्रिकोणीय व्यापार नेटवर्क का केंद्र था जिसमें इंग्लैंड, अफ्रीका और \_\_\_\_\_ शामिल थे।

Question ID : 16794319286

- Ans
- 1. अमेरिका
  - 2. ऑस्ट्रेलिया
  - 3. भारत
  - 4. वेस्टइंडीज़

Q.15 निम्नलिखित में से एक विकल्प, फ्रांसीसी समाज के तीसरे वर्ग में शामिल नहीं है। पहचान करें।

Question ID : 16794319291

- Ans
- 1. कामगार और किसान
  - 2. न्यायालय के अधिकारीगण
  - 3. अधिशासी निकाय
  - 4. बड़े कारोबारी व्यक्ति

Q.16 लॉर्ड वेलेस्ले द्वारा वर्ष \_\_\_\_\_ में सहायक गठबंधन की प्रणाली का गठन किया गया था।

Question ID : 16794319297

- Ans
- 1. 1700
  - 2. 1857
  - 3. 1798
  - 4. 1801

Q.17 20वीं सदी में किस प्रमुख समुदाय को औद्योगिक कामगारों में परिवर्तित किया गया था?

Question ID : 16794319289

- Ans
- 1. बुनकर
  - 2. शिक्षाविद
  - 3. भारतीय सिपाही
  - 4. किसान और कारीगर

Q.18 जापानी नौसेना ने रूसी जहाज़ी बेड़े को वर्ष \_\_\_\_\_ में पराजित किया था।

Question ID : 16794319285

- Ans
- 1. 1912
  - 2. 1905
  - 3. 1910
  - 4. 1900

Q.19 अवध का कब्ज़ा करने के बाद अंग्रेज़ों ने \_\_\_\_\_ को नियंत्रित किया और उनके सभी किलों को नष्ट कर दिया।

Question ID : 16794319299

- Ans
- 1. तालुकदारों
  - 2. ज़मींदारों
  - 3. अवध के मुख्य सेनापति
  - 4. अवध के राजा

Q.20 वर्ष 1929 में कृषि क्षेत्र और समुदाय बुरी तरह से प्रभावित हुए थे, क्योंकि \_\_\_\_\_ के मूल्यों की तुलना में कृषि के मूल्यों में गिरावट अधिक एवं दीर्घकालीन थी।

Question ID : 16794319287

- Ans
- 1. औद्योगिक माल
  - 2. अफीम
  - 3. कृषि हेतु कच्चे माल
  - 4. इंडिगो

Section : Subject Related

Q.1 सीमित परीक्षण प्रतिबंध संधि पर मॉस्को में \_\_\_\_\_ को हस्ताक्षर किए गए।

Question ID : 16794319319

- Ans
- 1. 10 अक्टूबर, 1963
  - 2. 5 अक्टूबर, 1963
  - 3. 5 अगस्त, 1963
  - 4. 10 नवंबर, 1963

Q.2 वर्ष 1914 में रूस का प्रमुख धर्म क्या था?

Question ID : 16794319306

- Ans
- 1. रूसी रूढ़िवादी ईसाई धर्म
  - 2. रूसी उदारपंथी ईसाई धर्म
  - 3. प्रोटेस्टेंट ईसाई धर्म
  - 4. रोमन कैथलिक ईसाई धर्म

Q.3 पुनर्संरचना के संबंध में संयुक्त राष्ट्र द्वारा सामना की गई व्यावहारिक कठिनाइयों पर विचार करते हुए, \_\_\_\_\_ ने 1997 में संशोधन हेतु प्रस्ताव की शुरुआत की थी।

Question ID : 16794319324

- Ans
- 1. बाउट्रोस घाली
  - 2. कर्ट वाल्धीम

3. यू थैंट

4. कोफी अन्ना

Q.4 निम्नलिखित में से उस देश का चयन करें जो नाटो (NATO) का सदस्य नहीं है।

Question ID : 16794319315

Ans  1. फ्रांस

2. स्पेन

3. पूर्वी जर्मनी

4. पश्चिम जर्मनी

Q.5 \_\_\_\_\_ द्वारा \_\_\_\_\_ को कम करने के लिए डावेस योजना लागू की गई थी।

Question ID : 16794319312

Ans  1. अमेरिका, सैन्य शक्तियां

2. अमेरिका, बढ़ी हुई अर्थव्यवस्था

3. हिटलर, बढ़ी हुई अर्थव्यवस्था

4. सहयोगी पार्टी, सैन्य शक्तियां

Q.6 विश्व युद्ध I के दौरान, ऑस्ट्रेलिया \_\_\_\_\_ था।

Question ID : 16794319316

Ans  1. प्रथम वैश्विक देश

2. चतुर्थ वैश्विक देश

3. द्वितीय वैश्विक देश

4. तृतीय वैश्विक देश

Q.7 रूस की क्रांति में 'सफ्रागेट आंदोलन' से आप क्या समझते हैं?

Question ID : 16794319305

Ans  1.

महिला को मताधिकार प्रदान करने वाला आंदोलन

2.

साम्यवाद की विचारधारा का समर्थन करने वाला आंदोलन

3. राजतंत्र के विरुद्ध क्रांतिकारी आंदोलन

4.

किसान और कामगारों के समर्थन हेतु आंदोलन

Q.8 30 जनवरी, 1933 को राष्ट्रपति हिंडेनबर्ग ने \_\_\_\_\_ को कुलपतित्व की पेशकश की थी।

Question ID : 16794319314

Ans  1. वाइमर रिपब्लिक

2. अमेरिकी प्रतिनिधि

3. हिटलर

4. यहूदी

Q.9 1950 के दशक में \_\_\_\_\_ के दौरान भारतीय राजनयिक एवं नेतागण प्रायः मध्यस्थता किया करते थे।

Question ID : 16794319318

Ans

- 1. कोरियाई युद्ध
- 2. जर्मन युद्ध
- 3. म्यांमार युद्ध
- 4. पूर्वी एवं पश्चिमी पाकिस्तानी युद्ध

Q.10 बॉल स्ट्रीट एक्सचेंज में भारी गिरावट से न केवल अमेरिका बल्कि \_\_\_\_\_ भी प्रभावित हुआ।

Question ID : 16794319313

Ans

- 1. ब्रिटिश
- 2. जर्मनी
- 3. रूस
- 4. फ्रांस

Q.11 रूस में सोशलिस्ट पार्टी दो पार्टियों में विभाजन हो गया, जिसके नाम थे:

Question ID : 16794319309

Ans

- 1. सोशल डेमोक्रेट और बोलशेविक डेमोक्रेट
- 2. बोलशेविक ग्रुप और मेनशेविक ग्रुप
- 3. व्लादिमीर लेनिन और ट्सारिस्ट रूस
- 4. सोशल डेमोक्रेट और सोशलिस्ट रेवल्यूशनरिस्ट

Q.12 वह कौन सी साम्यवादी है, जिन्होंने सोवियत संघ से दूरी बनाई रखी परंतु संयुक्त युगोस्लाविया के लिए काम किया?

Question ID : 16794319317

Ans

- 1. सुकर्नो
- 2. क्वामा न्कुमा
- 3. जोसिप ब्रॉज़ टीटो
- 4. जमाल अब्दल नासर

Q.13 भारत \_\_\_\_\_ को संयुक्त राष्ट्र में शामिल हुआ था।

Question ID : 16794319321

Ans

- 1. 30 अक्टूबर, 1947
- 2. 30 अक्टूबर, 1952
- 3. 30 अक्टूबर, 1945
- 4. 30 अक्टूबर, 1950

Q.14 'नवंबर अपराधी' किन्हें कहा जाता है?

Question ID : 16794319311

Ans

- 1. रूसी
- 2. यहूदी

3. यूरोपीय

4. वाइमर रिपब्लिक

Q.15 कई जर्मनवासियों का मानना था कि विश्व युद्ध I में पराजय एवं अपमानजनक वर्सेल्स संधि के लिए \_\_\_\_\_ उत्तरदायी था।

Question ID : 16794319310

Ans

1. हिटलर

2. अंग्रेज़

3. वाइमर रिपब्लिक

4. सहबद्ध शक्तियां

Q.16 अंतर्राष्ट्रीय मुद्रा कोष (आईएमएफ) के G - 8 सदस्यों में निम्नलिखित शामिल नहीं हैं:

Question ID : 16794319320

Ans

1. कनाडा

2. चीन

3. यू.एस.ए

4. भारत

Q.17 मुद्रा परिषद संयुक्त राष्ट्र की प्रधान संस्था है, जिसमें \_\_\_\_\_ सदस्य हैं जिनमें से \_\_\_\_\_ स्थायी हैं तथा \_\_\_\_\_ निर्वाचित किए गए हैं।

Question ID : 16794319322

Ans

1. क्रमशः 20; 10; 10

2. क्रमशः 15; 6; 9

3. क्रमशः 15; 5; 10

4. क्रमशः 183; 94; 89

Q.18 वर्ष 1914 से पहले, रूस की राजनैतिक पार्टियों के संबंध में निम्नलिखित में से कौन से कथन सही हैं?

Question ID : 16794319307

Ans

1.

वर्ष 1914 से पहले रूस में सरकारी शासन व्यवस्था उपस्थित नहीं थी।

2.

वर्ष 1914 से पहले, सोशल डेमोक्रेटिक पार्टी का गठन नहीं हुआ था।

3.

सभी राजनैतिक पार्टियां वैध रूप से कार्य करती थीं।

4. सभी राजनैतिक पार्टियां अवैध थीं।

Q.19 विश्व स्वास्थ्य संगठन (W.H.O.), संयुक्त राष्ट्र की प्रधान संस्था \_\_\_\_\_ के अधीन आती है।

Question ID : 16794319323

Ans

1. क्रियाशील कमीशन

2. कार्यक्रम एवं निधि

3. सहायक निकाय

4. विशेषीकृत एजेंसियों

Q.20 'खूनी रविवार (ब्लडी संडे)' से जुड़े व्यक्ति अथवा स्थान की पहचान करें।

Question ID : 16794319308

Ans

1. सरीना एलेक्जेंड्रा

- 2. फादर जियोर्जी अपोलोनोविच गैपॉन
- 3. जैडिडिस्ट
- 4. रास्पुटिन

Section : Subject Related

Q.1 निम्नलिखित में से कौन सा विकल्प, भारत में ठंडे मौसम की विशेषता दर्शाता है?

Question ID : 16794319333

- Ans
- 1. गरम दिन और गरम रातें
  - 2. ठंडे दिन और ठंडी रातें
  - 3. गरम दिन और ठंडी रातें
  - 4. ठंडे दिन और गरम रातें

Q.2 \_\_\_\_\_ राज्य में जनसंख्या का घनत्व अधिक है।

Question ID : 16794319344

- Ans
- 1. राजस्थान
  - 2. तेलंगाना
  - 3. उत्तर प्रदेश
  - 4. तमिलनाडु

Q.3 Rock cycle consists of Igneous rocks, Sediments, sedimentary rocks, \_\_\_\_\_ and Magma.

Question ID : 16794319329

- Ans
- 1. Extrusive Igneous rocks
  - 2. Intrusive rocks
  - 3. Extrusive rocks
  - 4. Metamorphic rocks

Q.4 Zooplankton belongs to \_\_\_\_\_.

Question ID : 16794319338

- Ans
- 1. Secondary consumer
  - 2. Territory consumer
  - 3. Primary consumer
  - 4. Primary producer

Q.5 भारत का एकमात्र सक्रिय ज्वालामुखी, \_\_\_\_\_ द्वीप पर स्थित है।

Question ID : 16794319341

- Ans
- 1. लक्षद्वीप
  - 2. बैरन
  - 3. नील
  - 4. हैविलाक

Q.6

सही विकल्प का चयन करें।

Question ID : 16794319328

कोकोस प्लेट, \_\_\_\_\_ और \_\_\_\_\_ के बीच में स्थित है।

Ans

- 1. दक्षिण अमेरिका; प्रशांत प्लेट
- 2. एशियाटिक; प्रशांत प्लेट
- 3. मध्य अमेरिका; प्रशांत प्लेट
- 4. सऊदी अरब भूमि समुदाय; जल निकाय

Q.7 खगोलीय (एस्ट्रोनॉमिकल) इकाई में सूरज से दूरी कितनी है, अर्थात् पृथ्वी की औसत माध्य दूरी क्या है?

Question ID : 16794319327

Ans

- 1. 598,149,000 किलोमीटर
- 2. 149,598,000 किलोमीटर
- 3. 1,149,598,000 किलोमीटर
- 4. 128,983,000 किलोमीटर

Q.8 महानदी डेल्टा के दक्षिण की ओर \_\_\_\_\_ झील स्थित है।

Question ID : 16794319340

Ans

- 1. वूलर
- 2. चिलिका
- 3. दल
- 4. लोकतक

Q.9 प्रकाश वर्ष \_\_\_\_\_ का माप है, \_\_\_\_\_ का नहीं।

Question ID : 16794319325

Ans

- 1. किलोमीटर; मील
- 2. समय; दूरी
- 3. दूरी; समय
- 4. परिमाण; आकार

Q.10 निम्नलिखित में से किस की कालावधि सर्वाधिक लंबी होती है?

Question ID : 16794319326

Ans

- 1. युग
- 2. काल
- 3. युगांतर
- 4. कल्प

Q.11 भूमि के प्राकृतिक रूप (लैंडफॉर्म) और भूदृश्य (लैंडस्केप) के बीच क्या अंतर होता है?

Question ID : 16794319330

Ans

1. पृथ्वी की सतह के छोटे से लेकर मध्यम आकार के भाग को भूदृश्य कहते हैं। कई भूदृश्यों को मिलाने पर भूमि का प्राकृतिक रूप बनता है।

- 2.

पृथ्वी की सतह के छोटे से लेकर मध्यम आकार के भाग को लैंडफॉर्म कहते हैं। कई लैंडफॉर्म को एक साथ मिलाने पर लैंडस्केप बनता है।

✗ 3.

पृथ्वी के बड़े टुकड़े (लैंडमास) की सतह के छोटे से लेकर मध्यम आकार के भाग को लैंडफॉर्म कहते हैं। कई लैंडमास को एक साथ मिलाने पर लैंडस्केप बनता है।

✗ 4.

पृथ्वी के छोटे से लेकर मध्यम आकार के भाग को लैंडस्केप कहते हैं। विभिन्न संग्रहित भूमिगत संरचनाओं को लैंडफॉर्म कहते हैं।

Q.12 मखरला (लैटराइट) मिट्टी का प्रमुख भाग, \_\_\_\_\_ में पाया जाता है।

Question ID : 16794319342

Ans

✗ 1. डेक्कन पठार

✗ 2. उत्तरी मैदानी क्षेत्र

✓ 3. पश्चिमी तटवर्ती मैदानी क्षेत्र

✗ 4. पूर्वी तटवर्ती समतल मैदानी क्षेत्र

Q.13 उष्णकटिबंधी सदाबहार और अर्ध सदाबहार वन \_\_\_\_\_ में स्थित हैं।

Question ID : 16794319343

Ans

✗ 1. हिमालय क्षेत्र

✓ 2. उत्तरी पूर्वी राज्य

✗ 3. उत्तरी भारत

✗ 4. मध्य भारत

Q.14 पहचान करें।

Question ID : 16794319334

इनमें से एक विकल्प हाइड्रोलॉजिकल चक्र का अंश नहीं है।

Ans

✗ 1. वाष्पीकरण (इवपोरेशन)

✓ 2. जलयोजन (हाइड्रेशन)

✗ 3. वर्षण (प्रेसिपिटेशन)

✗ 4. घनीकरण (कंडन्सेशन)

Q.15 नीचे दिए गए 1 इंच का स्केल जो R.F. में 4 मील का प्रतिनिधित्व करता है, को परिवर्तित करें।

Question ID : 16794319335

Ans

✗ 1. R.F. 1: 255,440

✗ 2. R.F. 1: 253,444

✗ 3. R.F. 1: 250,440

✓ 4. R.F. 1: 253,440

Q.16 1 : 50,000 के स्केल में चित्रित मानचित्र हेतु एक ग्राफिकल स्केल निर्मित करें तथा दूरियों का पठन किलोमीटर में करें।

Question ID : 16794319336

Ans

✗ 1. 50 किलोमीटर

✗ 2. 15 किलोमीटर

✗ 3. 5 किलोमीटर

✓ 4. 7.5 किलोमीटर



Q.17 सही विकल्प का चयन करें।

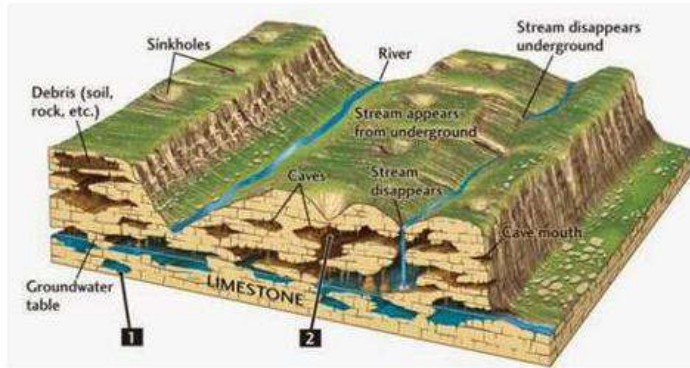
Question ID : 16794319332

कर्क रेखा पश्चिम में \_\_\_\_\_ और पूर्व में \_\_\_\_\_ से देश के मध्य भाग से गुजरती है।

- Ans
- 1. कच्छ रणक्षेत्र; मिज़ोरम
  - 2. कच्छ रणक्षेत्र; असम
  - 3. कच्छ रणक्षेत्र; त्रिपुरा
  - 4. कच्छ रणक्षेत्र; अरुणाचल प्रदेश

Q.18 Identify this picture.

Question ID : 16794319331



- Ans
- 1. Drainage system in Indian plateau
  - 2. Karst Topography
  - 3. Drainage system in Indian Hill region
  - 4. Karst Spring

Q.19  $g^{-2} yr^{-1}$  अथवा  $(kcal m^{-2}) yr^{-1}$  को \_\_\_\_\_ कहते हैं।

Question ID : 16794319337

- Ans
- 1. जैवईंधन (बायोमास) के वितरण की दर
  - 2. जैवईंधन (बायोमास) के संरक्षण की दर
  - 3. जैवईंधन (बायोमास) के उत्पादन की दर
  - 4. औसत उत्पादन की दर

Q.20 गुरला मंधाता, \_\_\_\_\_ में स्थित है।

Question ID : 16794319339

- Ans
- 1. नेपाल
  - 2. चीन
  - 3. तिब्बत
  - 4. भारत

Section : Subject Related

Q.1 How are resources classified on the basis of status of development?

Question ID : 16794319347

Ans  1.

Individual community, national and international

2. Renewable and non-renewable

3. Biotic and Abiotic

4. Potentials developed stocks and resources.

Q.2 निम्नलिखित में से किस देश में पानी हेतु संघर्ष हुआ था?

Question ID : 16794319362

Ans  1. लैट्विया

2. बोलिविया

3. सूडान

4. बोट्सवाना

Q.3 सही विकल्प का चयन करें।

Question ID : 16794319358

\_\_\_\_\_ एवं \_\_\_\_\_ तीन संवैधानिक संशोधन थे जो जून 1975 से भारत में घोषित आंतरिक आपातकालीन स्थिति की पृष्ठभूमि में रचित किए गए थे।

Ans  1. 43; 44; 46

2. 38; 39; 42

3. 67; 77; 94

4. 53; 77; 84

Q.4 भारतीय संविधान के उस अनुच्छेद की पहचान करें जो की नए राज्यों के गठन तथा राज्य के विद्यमान क्षेत्रों, सीमाओं अथवा नाम में परिवर्तन से संबंधित है।

Question ID : 16794319357

Ans  1. अनुच्छेद 3

2. अनुच्छेद 2

3. अनुच्छेद 370

4. अनुच्छेद 368

Q.5 निम्नलिखित में से किस देश को कुल 6 स्वतंत्र देशों में खंडित किया गया था?

Question ID : 16794319364

Ans  1. सूडान

2. चेकोस्लोवाकिया

3. युगोस्लाविया

4. यू.एस.एस.आर

Q.6 जनसंख्या वृद्धि का परिमाण \_\_\_\_\_ से संबंधित होता है।

Question ID : 16794319345

Ans  1. प्रति वर्ष जोड़े गए व्यक्तियों की संख्या

2. प्रति हज़ार पुरुषों में महिलाओं की संख्या

3. जनसंख्या वृद्धि की दर

✗ 4. एक क्षेत्र की कुल जनसंख्या

Q.7 भूकंप के संदर्भ में निम्नलिखित में से कौन सा सर्वाधिक क्षतिग्रस्त MSK IX जोखिम क्षेत्र है?

Question ID : 16794319351

Ans

✗ 1. तमिलनाडु

✗ 2. राजस्थान

✓ 3. उत्तरपूर्वी राज्य

✗ 4. कर्नाटक

Q.8 निम्नलिखित में से कौन सा मूलभूत अधिकार, भारतीय नागरिकों को उनके मूलभूत अधिकारों का अनिवार्य प्रवर्तन की प्राप्ति से छुटकारा है?

Question ID : 16794319355

Ans

✗ 1. जीवन का अधिकार

✗ 2. धार्मिक स्वतंत्रता का अधिकार

✗ 3. अभिव्यक्ति की स्वतंत्रता

✓ 4. संवैधानिक समाधानों का अधिकार

Q.9 न्यायमूर्ति बी. रामस्वामी पर जब दोषारोपण प्रस्ताव लाया गया था, तब वे \_\_\_\_\_ के मुख्य न्यायाधीश पद पर आसीन थे।

Question ID : 16794319360

Ans

✗ 1. मद्रास उच्च न्यायालय

✓ 2. पंजाब उच्च न्यायालय

✗ 3. भारतीय उच्चतम न्यायालय

✗ 4. दिल्ली उच्च न्यायालय

Q.10 जब संसद अथवा राज्य विधानसभा का कोई सदस्य, पार्टी से स्वैच्छिक रूप से इस्तीफा दे अथवा किसी मतदान पर पार्टी के नेतृत्व के अनुरोधों का उल्लंघन करता है तो उसे क्या कहते हैं?

Question ID : 16794319359

Ans

✗ 1. आज्ञा का उल्लंघन

✗ 2. सदस्यता का विघटन

✗ 3. बहिष्कार

✓ 4. दल-बदल

Q.11 निम्नलिखित में से कौन सी राजनैतिक पार्टी प्रणाली, सभी परिस्थितियों में सभी देशों हेतु आदर्श होता है?

Question ID : 16794319363

Ans

✗ 1. द्विपक्षीय प्रणाली

✗ 2. एकल पार्टी प्रणाली

✗ 3. बहु-पक्षीय प्रणाली

✓ 4. देश पर निर्भर होता है

Q.12 वैयक्तिक व्यक्तियों, समूह अथवा देशों द्वारा सिद्धांत अथवा नियम पालन करने हेतु की गई प्रतिज्ञा, जो करार अथवा कथन के हस्ताक्षरकर्ताओं पर कानूनी रूप से बाध्य है, को \_\_\_\_\_ कहते हैं।

Question ID : 16794319356

Ans

✗ 1. दावा

✓ 2. प्रसंविदा

3. संधि

4. समझौता

Q.13 मुंबई और न्यू मेंगलोर के बीच के समुद्री बंदरगाह की पहचान करें।

Question ID : 16794319350

Ans  1. पारादीप

2. टूटीकोरिन

3. मोरमुगांव

4. कोच्ची

Q.14 मनुष्य को एक संसाधन बनाने हेतु देश को \_\_\_\_\_ और \_\_\_\_\_ में निवेश करना चाहिए।

Question ID : 16794319346

Ans  1. सेना; स्वास्थ्य

2. रोज़गार के अवसर; सुखद जीवनशैली

3. शिक्षा; स्वास्थ्य

4. स्वास्थ्यसुरक्षा उत्पाद; रोज़गार के अवसर

Q.15 भारत में चक्रवात से सर्वाधिक प्रभावित राज्य की पहचान करें।

Question ID : 16794319352

Ans  1. ओडिशा

2. केरल

3. तमिलनाडु

4. मध्य प्रदेश

Q.16 निम्नलिखित में से कौन से क्षेत्रों में गोल्डन फाइबर भली भांति उगता है?

Question ID : 16794319354

Ans  1. उष्णकटिबंधी क्षेत्र

2. सदाबहार वन

3. रेतीले क्षेत्र

4. दलदल क्षेत्र

Q.17 खेतीबाड़ी को कृषि कहते हैं, \_\_\_\_\_ को सेरीकल्चर कहते हैं।

Question ID : 16794319348

Ans  1. वाणिज्यिक प्रयोग हेतु सब्जियां, फूल उगाने

2. मछलीपालन

3. अंगूर की खेती

4. रेशम के कीड़ों का वाणिज्यिक पालन

Q.18 बांगारी माथाई \_\_\_\_\_ में \_\_\_\_\_ आंदोलन के संस्थापक थे।

Question ID : 16794319361

Ans  1. लिबिया; नीग्रो आंदोलन

- 2. न्यू यार्क; पोलिश आंदोलन
- 3. केनिया; हरित पट्टी आंदोलन
- 4. चीन; सेडांग आंदोलन

Q.19 निम्नलिखित में से उस विकल्प का चयन करें जो कि कृषि आधारित उद्योग नहीं है।

Question ID : 16794319349

Ans

- 1. लोहा और इस्पात उद्योग
- 2. रेशम उद्योग
- 3. कपास उद्योग
- 4. खाद्य तेल उद्योग

Q.20 निम्नलिखित में से कौन सा जैविक / प्राकृतिक आपदा का उदाहरण नहीं है?

Question ID : 16794319353

Ans

- 1. बाढ़
- 2. भूस्खलन
- 3. सामूहिक विनाश के हथियार
- 4. अकाल

Section : Subject Related

Q.1 73वां संवैधानिक संशोधन निम्नलिखित से संबंधित है:

Question ID : 16794319372

Ans

- 1. पंचायत राज
- 2. केंद्रीकृत सरकार
- 3. प्रशासनीय निकाय
- 4. ग्रामीण आवास और पेय जल

Q.2 निर्वाचन की FPTP और PR प्रणाली का एक उदाहरण दें।

Question ID : 16794319367

Ans

- 1. क्रमशः पाकिस्तान और यू.एस.ए
- 2. क्रमशः इस्राइल और भारत
- 3. क्रमशः यू.एस.ए और पाकिस्तान
- 4. क्रमशः भारत और इस्राइल

Q.3

Question ID : 16794319373

निम्नलिखित में से कौन सा विकल्प उपयुक्त है?



Ans

- 1. जानवरों के प्रति नृशंसता
- 2. धार्मिक संघर्ष
- 3. विश्वविद्यालय के विद्यार्थियों की रैगिंग
- 4.

जातीयता, पूर्वाग्रह और धर्मान्धता की पराकाष्ठा

Q.4 उम्र देश का उल्लेख करें जो कि अपने संविधान में महामांघ (फेडरेशन) शब्द का उल्लेख नहीं करता है, परंतु उसका अनुसरण करता है।

Question ID : 16794319370

Ans

- 1. वेस्टइंडीज़
- 2. नाइजीरिया
- 3. यू.एस.एस.आर
- 4. भारत

Q.5 दुनिया के निम्नलिखित शहरों में से कौन सा देश पूरी तरह से नहीं है, उसके लिए अलग सरकार है?

Question ID : 16794319366

Ans

- 1. प्रेस्टन
- 2. सिंगापुर
- 3. ब्रसेल्स
- 4. पैरिस

Q.6 वर्ष 1990 और उसके बाद की अवधि, भारतीय राजनीति के लिए निम्नलिखित किन कारणों से अंघीय (फेडरली) रूप से महत्वपूर्ण थे?

Question ID : 16794319365

Ans

- 1. गठबंधन सरकारों का गठन
- 2. भाषा नीति
- 3. सत्ते की हिस्सेदारी

#### 4. आर्थिक सुधार

Q.7 सही विकल्प चुनकर रक्त स्थान की पूर्ति करें।

Question ID : 16794319369

सत्ता में हिस्सेदारी हेतु श्रीलंका में गृहयुद्ध, \_\_\_\_\_ और \_\_\_\_\_ के बीच हुआ था।

Ans

- 1. सिंहलियों; श्रीलंकाई मुस्लिमों
- 2. सिंहलियों; श्रीलंकाई तमिलों
- 3. सिंहलियों; चीनी
- 4. सिंहलियों; भारतीय तमिलों

Q.8 हमारे संविधान की उत्पत्ति में ब्रिटिश सरकार की भूमिका का \_\_\_\_\_ द्वारा खुले रूप से विरोध किया गया था।

Question ID : 16794319374

Ans

- 1. जवाहरलाल नेहरू
- 2. महात्मा गांधी
- 3. सोमनाथ लाहिड़ी
- 4. सरदार वल्लभभाई पटेल

Q.9 कालीन के निर्माण के कारखाने में 13 वर्ष के बच्चे को कार्य करने की स्थिति से निम्नलिखित में से किस मूलभूत अधिकार का उल्लंघन होता है?

Question ID : 16794319371

Ans

- 1. संवैधानिक उपचारों का अधिकार
- 2. सांस्कृतिक एवं शैक्षणिक अधिकार
- 3. शोषण के विरुद्ध अधिकार
- 4. स्वतंत्रता का अधिकार

Q.10 सर्वोच्च न्यायालय अथवा उच्च न्यायालय के न्यायाधीश को \_\_\_\_\_ का सभ्य पेश करने पर ही तिव्कासित किया जा सकता है।

Question ID : 16794319368

Ans

- 1. निर्णय हेतु कई लंबित मामलों को धारित रखने
- 2. बहुत कम उपस्थिति
- 3. कई गलत निर्णय देने
- 4. दुर्व्यवहार अथा अक्षमता

Q.11 Teaching reading and writing skills in classroom helps student:

Question ID : 16794319381

Ans

- 1. To develop problem solving skills
- 2. To get good hand writing
- 3. To communicate effectively
- 4. To read properly

Q.12 विज्ञान में प्रारंभिक अनुभव इसके लिए उपयोगी है:

Question ID : 16794319380

Ans

1. भविष्य में वैज्ञानिक बनने के लिए

2.

समस्या निवारण कौशल विकसित करने के लिए जो उन्हें तेजी से वैज्ञानिक और तकनीकी दुनिया में भाग लेने के लिए सशक्त बनाता है

3.

हाई स्कूल के स्तर में अच्छे अंक प्राप्त करने के लिए

4.

अलग-अलग शर्त वीन विषयों और भाषाओं को विकसित करने के लिए

Q.13 एक न्यायसंगत सीखने के माहौल को पैदा करने के लिए क्या किया जाना चाहिए?

Question ID : 16794319382

Ans

1. कक्षा में समानता दिखानी चाहिए

2.

सभी विषयों को समान रूप से पढ़ाना चाहिए

3.

न्यायसंगत सीखने के महत्व को सिखाना चाहिए

4. कला का एकीकरण

Q.14 What are the three dimensions of gender inequity indicators?

Question ID : 16794319379

Ans

1. Education, Human rights, Reservations

2. Education, Human rights, Responsibilities

3.

Education, Percapita income, Political awareness

4.

Education, Economic participation, Empowerment

Q.15 जानने और समझने के अंतर का कौन सा रूप प्रमाणित है?

Question ID : 16794319377

Ans

1. प्रयोगशालाओं में

2.

जब शिक्षार्थी अपनी सोच को साकार करते हैं

3. जब शिक्षण समझने योग्य होता है

4.

जब छात्र कक्षाओं में उपस्थित होने में रुचि दिखाते हैं

Q.16 Self-Discipline, Internal motivation, Clear goal is required in:

Question ID : 16794319383

Ans

1. Traditional learning

2. Formal learning

3. Self-learning methodology

4. Instructional learning

Q.17 सकल मोटर और बढ़िया मोटर कौशल के बीच सामंजस्य निम्नानुसार है:

Question ID : 16794319375

Ans



- 1. शारीरिक विकास
- 2. नैतिक विकास
- 3. स्कूल आयु विकास
- 4. किशोर विकास

Q.18 What were the languages promoted by Indian government?

Question ID : 16794319376

- Ans
- 1. Telugu, Hindi, English
  - 2. German, French, Parsi
  - 3. Chinese, Japanese
  - 4. Sanskrit, Urdu, English

Q.19 Parental support is very less for:

Question ID : 16794319384

- Ans
- 1. Government school students
  - 2. Active learners
  - 3. First generation learners
  - 4. Rural students

Q.20 शारीरिक रूप से, संवेदना, महसूस किया तथा देखा जा सकता है कि घटना का अध्ययन है:

Question ID : 16794319378

- Ans
- 1. मनोविज्ञान
  - 2. विज्ञान
  - 3. सामाजिक अध्ययन
  - 4. अंकशास्त्र



GOVT. OF NCT OF DELHI  
Delhi Subordinate Services Selection Board  
FC-18, Institutional Area, Karkardooma, Delhi – 110092.  
[www.dsssb.delhigovt.nic.in](http://www.dsssb.delhigovt.nic.in)

Participant ID:	<b>HaryanaJobs.in</b>
Participant Name:	
Test Center Name:	iON Digital Zone iDZ 1 GT Karnal Road
Test Date:	15/10/2018
Test Time:	4:30 PM - 6:30 PM
Subject:	TGT SOCIAL SCIENCE FEMALE

Section : Mental Ability

Q.1 Choose the odd pair out from the below options.

Question ID : 16794320603

- Ans
- 1. 49 : 7
  - 2. 81 : 10
  - 3. 36 : 6
  - 4. 121 : 11

Q.2 Identify the odd pair of numerals among the group that does not hold the same relation as the rest of the pairs.

Question ID : 16794320620

- Ans
- 1. 4 : 32
  - 2. 7 : 42
  - 3. 9 : 54
  - 4. 3 : 19

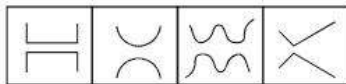
Q.3 Pavitra's brother's father's mother is her:

Question ID : 16794320615

- Ans
- 1. Aunt
  - 2. Grandmother
  - 3. Mother
  - 4. Sister

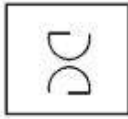
Q.4 Identify the option figure that is similar to the figures given below:

Question ID : 16794320604



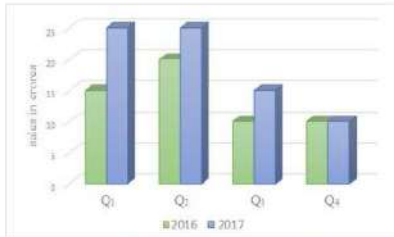
- Ans
- 1.
  - 2.
  - 3.

~~X~~ 4.



Q.5 The following chart shows information about the sales of the company 'XYZ' for the year 2016 & 2017.

Question ID : 16794320608



What is the ratio of the sales of the company 'XYZ' for the quarter 2 (Q<sub>2</sub>) of 2016 to the sales of the company for quarter 2 (Q<sub>2</sub>) of 2017?

- Ans
- 1. 4 : 5
  - 2. 4 : 3
  - 3. 5 : 5
  - 4. 3 : 4

Q.6 Consider the below arithmetic progressive series.

Question ID : 16794320621

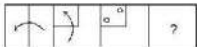
6, 10, 14, ...

What will be the 17<sup>th</sup> term in this series?

- Ans
- 1. 83
  - 2. 63
  - 3. 70
  - 4. 75

Q.7 A piece of paper is folded and cut as shown below in the question figures. From the given answer figure indicate how it would appear when unfolded.

Question ID : 16794320606



Ans

- 1.
- 2.
- 3.
- 4.

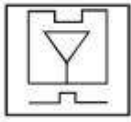
Q.8 Spot the option figure that has the below figure embedded as part of it.

Question ID : 16794320609

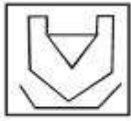


Ans

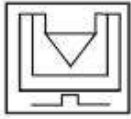
✓ 1.



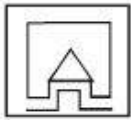
✗ 2.



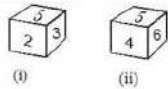
✗ 3.



✗ 4.



Q.9 Two positions of a dice are shown. When 5 is at the bottom, what will be the number on the side that is at the top?



Question ID : 16794320612

Ans

✗ 1. 4 or 6

✗ 2. 3 or 2

✓ 3. 1

✗ 4. 2

Q.10 You are in the classroom and have not completed the home work that teacher had given the previous day. The teacher asks to show the status of the home work. What should be your most appropriate action?

Question ID : 16794320611

Ans

✗ 1. Suddenly escape from the class.

✗ 2. Complain to the principal about the teacher.

✗ 3.

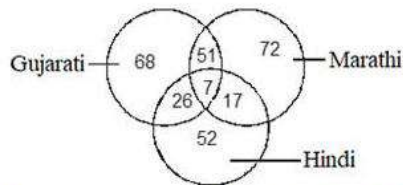
Say lie as “forgot the home work book at the home”.

✓ 4.

Politely ask for apology for not completing homework and assure the work would be completed by next day

Q.11 Study the following Venn diagram carefully and answer the question.

Question ID : 16794320614



How many persons who speak either Gujarat or Marathi but not both?

Ans

✗ 1. 140

✗ 2. 157

✗ 3. 166

✓ 4. 183

Q.12 At the end of a party, the eight people present all shake hands with each other once. How many handshakes will there be altogether?

Question ID : 16794320617

Ans

✗ 1. 35

✓ 2. 28

~~X~~ 3. 43

~~X~~ 4. 30

Q.13 Identify the odd pair of words among the group that does not hold the same relation as the rest of the pairs.

Question ID : 16794320619

Ans ~~X~~ 1. Bee : Hive

✓ 2. Snake : Reptile

~~X~~ 3. Peasant : Cottage

~~X~~ 4. Spider : Web

Q.14 Study the following information carefully and answer the given questions.

Question ID : 16794320610

For a recruitment process in an ACCOUNTING organization, the candidates need to possess the following qualifications criteria:

- (i) He/she should be a graduate in commerce with at least 60% marks.
- (ii) He/she should be of at least 24 years of age and not more than 40 years as on 1 - 7 - 2016.
- (iii) He/she should have a post-qualification work experience of at least 2 years.
- (iv) He/she should have secured 55% marks in the selection process.

However, if the candidate fulfills the above-mentioned criteria except:

(A) at (i), and if the candidate is not a graduate in commerce but has a post-graduation degree in finance with minimum of 60% marks, he/she should be referred to the Finance Manager of the organization.

(B) at (iii), and if the candidate fulfills all the eligibility criteria but of post-qualification work experience but has secured 75% marks in the selection process, he/she may be referred to the Trainee Accountant.

Based on the above information, study carefully whether following candidates are eligible for the recruitment process and mark your answer as follows. You are not to assume anything other than the information provided in each question. All the cases are given to you as on 1 - 7 - 2016.

Mamatha has done graduation in Mechanical Engineering with 59% marks. Her date of birth is 3 . 5 . 1991. She has qualified in the selection process and has secured 45% marks in it. She also has two years of post-qualification work experience.

Ans ~~X~~ 1. The candidate should be selected

~~X~~ 2.

The candidate may be referred to the Trainee Accountant

~~X~~ 3.

The candidate may be referred to the Finance Manager

✓ 4. The candidate is not to be selected

Q.15 What would be the next term in the below series?

Question ID : 16794320622

GT, KR, OP, SN, ?

Ans ~~X~~ 1. TA

~~X~~ 2. GY

~~X~~ 3. LC

✓ 4. WL

Q.16 The average age of a father and his two sons is 25 years. Father's age is 40 years and elder son is 3 years older than the younger son. Then what is the age of the younger son?

Question ID : 16794320618

Ans ~~X~~ 1. 18 years

~~X~~ 2. 20 years

~~X~~ 3. 23 years

✓ 4. 16 years

Q.17 Select the most appropriate option.

Question ID : 16794320613

A graph must have:

Ans ~~X~~ 1. Parabola

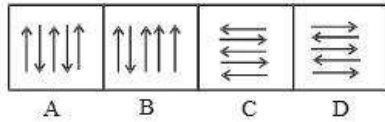
~~X~~ 2. Ellipse

✓ 3. Axis

✗ 4. Line

Q.18 Identify the image that is different among the given options.

Question ID : 16794320605



Ans ✗ 1. C

✓ 2. B

✗ 3. D

✗ 4. A

Q.19 If + means  $\times$ , - means  $\div$ ,  $\div$  means + and  $\times$  means  $\div$ , then  $18 - 6 + 12 \times 4 \div 2 = ?$

Question ID : 16794320616

Ans ✗ 1. 120

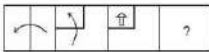
✗ 2. 110

✓ 3. 107

✗ 4. 108

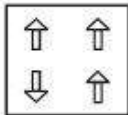
Q.20 A piece of paper is folded and cut as shown below in the question figures. From the given answer figure indicate how it would appear when unfolded.

Question ID : 16794320607

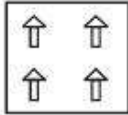


Ans

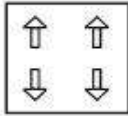
✗ 1.



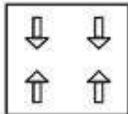
✗ 2.



✓ 3.



✗ 4.



Section : General Awareness

Q.1 "Bathukamma" is the famous folk-dance of which state?

Question ID : 16794320635

Ans ✓ 1. Telangana

✗ 2. Karnataka

✗ 3. Kerala

✗ 4. Tamil Nadu

Q.2

Union Government and European Union (EU) have collaborated for research programme named \_\_\_\_\_ to develop Next Generation Influenza to protect citizens across the globe.

Question ID : 16794320642

- Ans
- 1. Horizon 2021
  - 2. Horizon 2019
  - 3. Horizon 2022
  - 4. Horizon 2020

Q.3 The temples of Palitana are located in which state?

Question ID : 16794320626

- Ans
- 1. Punjab
  - 2. Gujarat
  - 3. Haryana
  - 4. Rajasthan

Q.4 Olympic Council of Asia (OCA) has chosen whom as the winner of 'Most Valuable Player' (MVP) Trophy Award in 2018 Jakarta and Palembang Asian Games.

Question ID : 16794320636

- Ans
- 1. Rikako Ikee
  - 2. Park Tae-hwan
  - 3. Kosuke Kitajima
  - 4. Kosuke Hagino

Q.5 Which Part of the Indian Constitution provides for 'special provisions for certain classes'?

Question ID : 16794320630

- Ans
- 1. PART XVII
  - 2. PART XIV
  - 3. PART XVI
  - 4. PART XV

Q.6 Where is the headquarter of 'Army Air Defence College' in India?

Question ID : 16794320639

- Ans
- 1. Pune
  - 2. Gopalpur
  - 3. Dundigal
  - 4. Jalahali

Q.7 India has fallen from \_\_\_\_\_ rank in 2017 to 11th rank in the FDI Confidence Index 2018 released by global consultancy firm A T Kearney.

Question ID : 16794320632

- Ans
- 1. 10<sup>th</sup>
  - 2. 6<sup>th</sup>
  - 3. 9<sup>th</sup>
  - 4. 8<sup>th</sup>

Q.8 'Office of CAG' in the Indian Constitution has been borrowed from which country?

Question ID : 16794320628

- Ans
- 1. Britain
  - 2. Ireland
  - 3. Canada

4. Australia

Q.9 Who among the following is a famous 'Rudra Veena' player?

Question ID : 16794320634

- Ans
- 1. Bhajan Sopori
  - 2. Asad Ali Khan
  - 3. Pannalal Ghosh
  - 4. Allauddin Khan

Q.10 Gautam Buddha's father was the chief of one of the ancient tribes of which state?

Question ID : 16794320625

- Ans
- 1. Kapilvastu
  - 2. Lichhavi
  - 3. Avanti
  - 4. Lumbini

Q.11 The temperature at which molecules stop moving?

Question ID : 16794320638

- Ans
- 1. Bose Einstein Condensate
  - 2. -273.15° C
  - 3. -270° C
  - 4. Plank's Temperature

Q.12 The famous epic Mahabharata was composed by \_\_\_\_\_.

Question ID : 16794320623

- Ans
- 1. Tulsidas
  - 2. Kalidas
  - 3. Ved Vyasa
  - 4. Maharishi Valmiki

Q.13 निम्नलिखित में से क्या 2018 एशियाई खेलों का शुभंकर नहीं था?

Question ID : 16794320637

- Ans
- 1. काका (एक सींग वाला गैंडा)
  - 2. अतंग (हिरण)
  - 3. भिन भिन (स्वर्ग का पक्षी)
  - 4. एज़ोमन (उड़नेवाली गिलहरी)

Q.14 Thailand was known by which name earlier?

Question ID : 16794320627

- Ans
- 1. Saigon
  - 2. Malaya
  - 3. Siam
  - 4. Manchukuo

Q.15 Asian Development Bank (ADB) has approved financing package of \$245 million to implement project for providing safe, sustainable drinking water service to 1.65 million people in three districts affected by arsenic, fluoride, and salinity of which state?

Question ID : 16794320640

- Ans
- 1. Jharkhand



2. West Bengal

3. Rajasthan

4. Odisha

Q.16 Who among the following is associated with Manipuri dance form?

Question ID : 16794320633

Ans  1. Rajkumar Singhajit Singh

2. Ananda Shankar Jayant

3. Rukmini Devi Arundale

4. Sonal Mansingh

Q.17 How many Mahajanapadas were there in 600 B.C.?

Question ID : 16794320624

Ans  1. 16

2. 24

3. 18

4. 12

Q.18 Which Indian Naval Ship reached Port of Darwin, Australia to participate in multilateral regional maritime exercise KAKADU 2018 conducted by Australia?

Question ID : 16794320641

Ans  1. Shakti

2. Sahyadri

3. Ganga

4. Godavari

Q.19 Which bank's tag line is, "Badhti ka nam Zindagi."?

Question ID : 16794320631

Ans  1. Axis Bank

2. Citi Bank

3. HDFC Bank

4. IDBI Bank

Q.20 Which Article provides for living wage etc. for workers?

Question ID : 16794320629

Ans  1. Article 45

2. Article 48

3. Article 43

4. Article 41

Section : Arithmetic Ability

Q.1 A and B together can do a piece of work in 8 days, B and C together can do it in 12 days, and A, B and C together can do it in 6 days. They started the work together. After 4 days, B left. The remaining work will be finished by A and C together in:

Question ID : 16794320657

Ans  1. 4 days

2. 3 days

✓ 3.  $2\frac{2}{3}$  days

✗ 4.  $2\frac{1}{3}$  days

Q.2 In a class of 80 students, 80% are girls and rest are boys. The average score of all the students in a test is 78. If the average score of boys is 20% more than that of the girls, then what is the average score of boys?

Question ID : 16794320650

Ans ✓ 1. 90

✗ 2. 85

✗ 3. 88

✗ 4. 86

Q.3 A certain sum amounts to ₹ 12705 at 10% p.a compound interest after  $2\frac{1}{2}$  years, when the interest is compounded yearly. If the same sum amounts to ₹ 14500 at the same rate is  $x$  years at simple interest then the value of  $x$  is:

Question ID : 16794320658

Ans ✗ 1. 5

✓ 2.  $4\frac{1}{2}$

✗ 3.  $5\frac{1}{2}$

✗ 4. 4

Q.4 Please A and B are 210 km apart on a highway. Two cars start simultaneously from A and B respectively. If they move in the same direction, they meet after  $10\frac{1}{2}$  hours if they move towards each other, they meet after  $2\frac{1}{2}$  hours. The difference between their speeds (in km/h) is:

Question ID : 16794320660

Ans ✓ 1. 18

✗ 2. 20

✗ 3. 15

✗ 4. 16

Q.5 30% of A's income is equal to 20% of B's income and 15% of B's income is equal to 25% of C's income. If C's income is ₹ 54000 then the total income of A and B is:

Question ID : 16794320648

Ans ✓ 1. ₹ 150000

✗ 2. ₹ 156000

✗ 3. ₹ 114000

✗ 4. ₹ 144000

Q.6 A solid right circular cone of height 2.1 cm and the diameter of base as four times its height is melted and recast into a sphere. What is the surface area (in  $\text{cm}^2$ ) of the sphere?

Question ID : 16794320654

Ans ✓ 1.  $17.64\pi$

✗ 2.  $5.88\pi$

✗ 3.  $8.82\pi$

✗ 4.  $13.23\pi$

Q.7 A is 20% more than B whereas B is 20% less than C, if D is 50% more than A, then which of the following is true?

Question ID : 16794320647

Ans ✗ 1. C is 4% more than A

✓ 2. B is  $55\frac{5}{9}\%$  of D

✗ 3. C is 20% more than B

~~X~~ 4. C is 44% less than D

Q.8 The compound interest on a certain sum at  $16\frac{2}{3}\%$  per annum for 3 years is ₹ 635. What will be the simple interest on the same sum at the same rate for double the time?

Question ID : 16794320653

- Ans
- ~~X~~ 1. ₹ 540
  - ~~X~~ 2. ₹ 1270
  - ✓ 3. ₹ 1080
  - ~~X~~ 4. ₹ 810

Q.9 A certain number of persons can do a piece of work in 40 days. If there had been 45 persons more, the work could have been finished in 25 days. How many persons were employed to do the work initially?

Question ID : 16794320652

- Ans
- ✓ 1. 75
  - ~~X~~ 2. 80
  - ~~X~~ 3. 60
  - ~~X~~ 4. 64

Q.10 If the mean proportional between 162 and 128 is x and the third proportional to 32 and 72 is y, then  $x : y = ?$

Question ID : 16794320652

- Ans
- ~~X~~ 1. 4 : 3
  - ✓ 2. 8 : 9
  - ~~X~~ 3. 7 : 8
  - ~~X~~ 4. 9 : 16

Q.11 The incomes of A, B and C are in the ratio 6 : 8 : 5 and their expenditures are in the ratio 5 : 7 : 4. If C saves 40% of her income, then the ratio of savings of A, B and C is:

Question ID : 16794320651

- Ans
- ✓ 1. 9 : 11 : 8
  - ~~X~~ 2. 1 : 1 : 1
  - ~~X~~ 3. 9 : 8 : 11
  - ~~X~~ 4. 6 : 7 : 4

Q.12 The value of  $\frac{3\frac{2}{3} \div \frac{11}{30} \text{ of } \frac{2}{3} - \frac{1}{4} \text{ of } 2\frac{1}{2} \div \frac{3}{5} \times 4\frac{4}{5}}{\left(\frac{3}{4} + \frac{3}{5}\right) \text{ of } \left(\frac{5}{6} - \frac{5}{7}\right) \times \left(\frac{7}{8} - \frac{7}{9}\right) \text{ of } 5\frac{1}{3}}$  is:

Question ID : 16794320645

- Ans
- ✓ 1. 120
  - ~~X~~ 2.  $\frac{6}{5}$
  - ~~X~~ 3.  $\frac{1}{120}$
  - ~~X~~ 4.  $\frac{5}{6}$

Q.13 A trader sold articles at ₹ 1596 each after allowing 5% discount on labelled price. Had he not given any discount, he would have earned a profit of 12% on the cost price. The cost price of each article is:

Question ID : 16794320649

- Ans
- ~~X~~ 1. ₹ 1600
  - ~~X~~ 2. ₹ 1560
  - ~~X~~ 3. ₹ 1200
  - ✓ 4. ₹ 1500

Q.14 The area of circular park is 11 times the area of a triangular park where sides are 410 m, 280 m and 150 m. what is the perimeter of the circular park? ( $\pi = \frac{22}{7}$ )

Question ID : 16794320655

- Ans
- 1. 1980 m
  - 2. 880 m
  - 3. 1760 m
  - 4. 1320 m

Q.15 The value of  $\frac{[9.5 + (0.6 \times 0.75 + 0.8 + 16) + 0.75] \div 31.6}{2.32 + [1.4 + 0.5 \text{ of } 0.7 + 2.4 \text{ of } 1.6 + 8 \text{ of } 0.75]}$  is:

Question ID : 16794320643

- Ans
- 1. 1.25
  - 2. 2.5
  - 3. 1
  - 4. 2

Q.16 In a stream running at 2 km/h, a boat goes 10 km upstream and returns to the starting point in 55 minutes. How much time (in hours) will it take to cover a distance of 127.6 Km in still water?

Question ID : 16794320659

- Ans
- 1. 5.4
  - 2. 4.8
  - 3. 4.4
  - 4. 5.8

Q.17 If  $x = \frac{5\sqrt{3} - \sqrt{48} - 4\sqrt{2} + \sqrt{50}}{3 + \sqrt{6}}$  and  $y = \sqrt{7 - 4\sqrt{3}}$  then the value of  $(x - y)$  is closest to:

Question ID : 16794320644

- Ans
- 1. 0.3
  - 2. 0.8
  - 3. 0.4
  - 4. 0.6

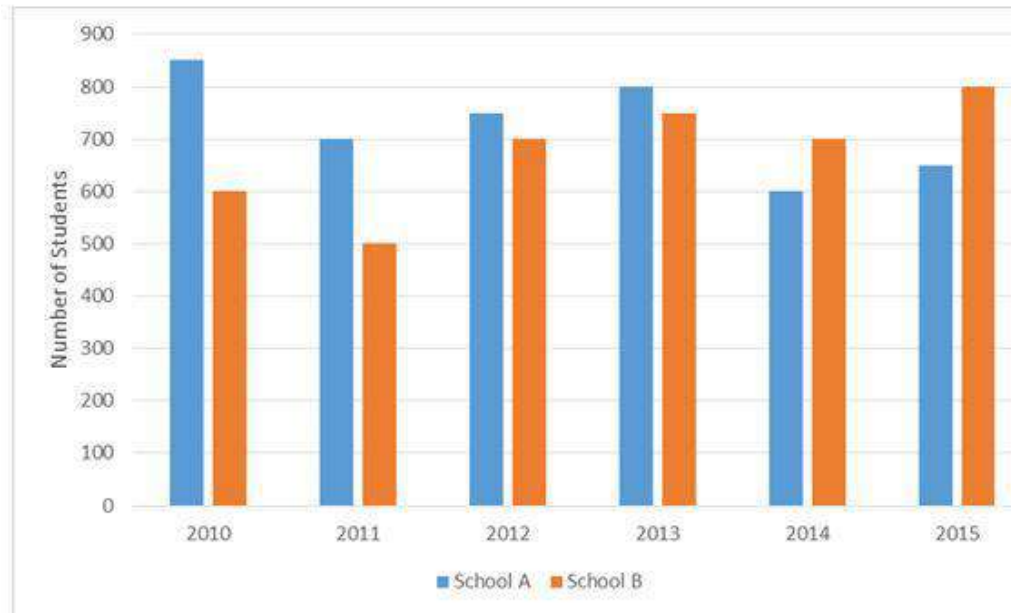
Q.18 In determining the HCF of two numbers by the method of long division, the last division is 59 and the successive quotients from the beginning to the end are 2, 2, 2 and 3, respectively. The difference between the numbers is:

Question ID : 16794320646

- Ans
- 1. 1239
  - 2. 1357
  - 3. 1416
  - 4. 1475

Comprehension:

Study the following bar graph that shows the number of students from two schools who qualified in an examination in six years and the take and answer questions.



Percentage of (among who qualified)

Year	Boys (in A)	Girls (in B)
2010	48	56
2011	66	60
2012	72	45
2013	42	48
2014	57	81
2015	36	54

SubQuestion No : 19

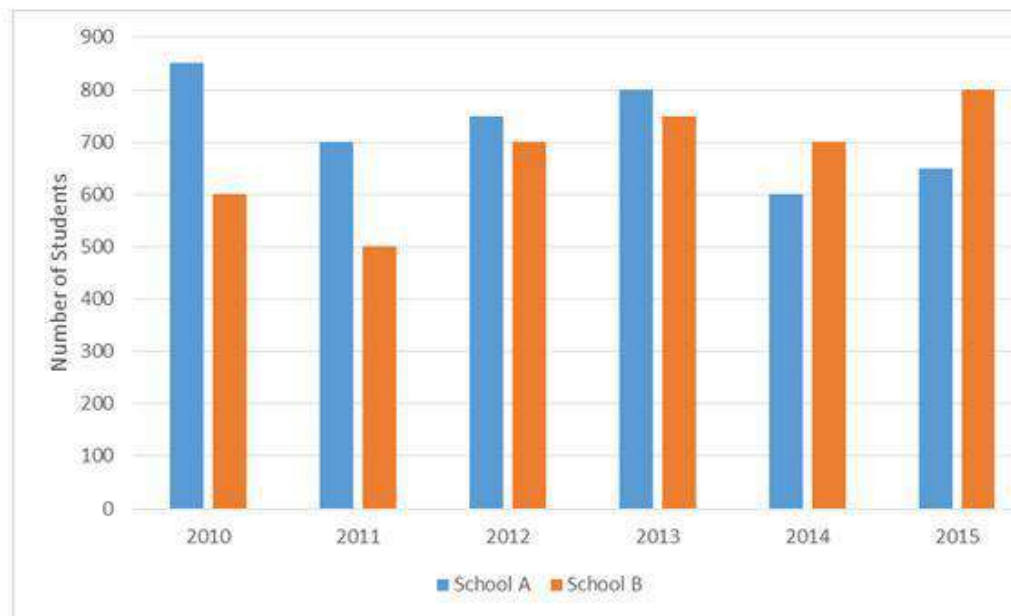
Q.1  
9 Total number of girls qualified in the examination from school B in six years is what number of students qualified from A in six years in: (nearest to an integer)

Question ID : 16794320663

- Ans
- 1. 61
  - 2. 51
  - 3. 54
  - 4. 53

Comprehension:

Study the following bar graph that shows the number of students from two schools who qualified in an examination in six years and the take and answer questions.



Percentage of (among who qualified)

Year	Boys (in A)	Girls (in B)
2010	48	56
2011	66	60
2012	72	45
2013	42	48
2014	57	81
2015	36	54

SubQuestion No : 20

Q.2  
0 What is the ratio of total number of boys qualified in examination from school A in 2010, 2012 and 2014 to the total number of girls passed qualified from B in 2011 and 2013?

Question ID : 16794320662

- Ans
- 1. 25 : 43
  - 2. 43 : 25
  - 3. 43 : 22
  - 4. 25 : 22

Section : General English

Q.1 From the given options choose the one that means the OPPOSITE of vigilant

Question ID : 16794320667

- Ans
- 1. violent

- 2. virtuous
- 3. alert
- 4. inattentive

Q.2 From the given options, select the word that can substitute the words given below.

Question ID : 16794320672

the rearing of silkworms for production of silk

- Ans
- 1. sericulture
  - 2. pisciculture
  - 3. apiculture
  - 4. horticulture

Q.3 Select the option that represents the correct passive voice form to fill in the blank in the sentence given below.

Question ID : 16794320677

The enemy forces \_\_\_\_ by our army.

- Ans
- 1. have been successfully repelled
  - 2. have repelled
  - 3. repelled
  - 4. successfully repelled

Q.4 From the given options, choose the one that would mean the SAME as

Question ID : 16794320664

aloof

- Ans
- 1. adjust
  - 2. alert
  - 3. unfriendly
  - 4. amiable

Q.5 From the given options, choose the one that would mean the SAME as

Question ID : 16794320665

candid

- Ans
- 1. careful
  - 2. frank
  - 3. captive
  - 4. capable

Q.6 Select the indirect form of narration of the given sentence.

Question ID : 16794320678

Ira said to me, "I am feeling feverish. I may not be able to go to the market with you tomorrow."

- Ans
- 1. Ira stated that it was advisable not to go to the market tomorrow as both of us were feverish.
  - 2. Ira informed me that she was feeling feverish. She further added that she might not be able to go to the market with me the next day.
  - 3. Ira advised me not to go to the market with her as I was feverish.
  - 4. I told Ira that she was feverish. I further added that she cannot go to the market with me the next day.

Q.7 Combine the given sentences into a single meaningful sentence.

Question ID : 16794320676

Children grow up very fast. You suddenly find the house silent and empty. The children are gone to some faraway place either to study or to work. It is the most depressing situation.

Ans  1.

Nothing can be more depressing than a silent and empty house with children grown up and gone to some faraway place either to study or to work.

2.

Children grow up very fast to go away to study and work in some faraway place thus emptying and silencing the house.

3.

It is the most depressing situation because children grow up very fast and study or work faraway and the house is silent and empty.

4.

Children grow up very fast to leave a depressed, silent and empty house and study or work in some faraway place.

Q.8 Fill in the blank in the sentence given below with the correct option.

Question ID : 16794320675

A: Can you lend me \_\_\_\_\_ money?

B: Sorry, I don't have \_\_\_\_\_.

Ans  1. any ; some

2. this ; that

3. some ; any

4. the ; that

Q.9 Choose the incorrectly spelt word from the given options.

Question ID : 16794320668

Ans  1. immigrate

2. emigrate

3. ignishun

4. immature

Q.10 Fill in the blank in the sentence given below with the correct option.

Question ID : 16794320674

My friends were completely exhausted. They \_\_\_\_\_ the whole day exploring the forest trail.

Ans  1. will walk

2. are walking

3. had been walking

4. are going to walk

Q.11 Fill in the blank in the sentence given below with the correct option.

Question ID : 16794320673

Are the children old enough to look after \_\_\_\_\_?

Ans  1. myself

2. himself

3. themselves

4. ourselves


Q.12 From the given options choose the one that means the OPPOSITE of

Question ID : 16794320666


peace

Ans  1. pinnacle



 2. harmony

 3. war


 4. pattern


Q.13 Given below is an incorrect sentence. From the given options, select the part that has an error.


Question ID : 16794320669

In rush hours, traffic in New Delhi moves by a snail's pace.

Ans  1. traffic

 2. In rush hours


 3. moves


 4. by a snail's pace.


Q.14 Given below is an incorrect sentence. From the given options, select the part that has an error.


Question ID : 16794320670

I am having a very powerful telescope to watch the distant stars.

Ans  1. am having

 2. powerful


 3. distant stars.

 4. to watch


Q.15 From the given options, select the one that represents the appropriate meaning of the underlined expression in the sentence given below.


Question ID : 16794320671

It is very difficult to enjoy the silly serials served up by different TV. channels day in and day out.

Ans  1. entertainment presented to people

 2. perform official duties

 3. given to people at the beginning of a meal

 4.  
to throw up the ball or shuttlecock in tennis or badminton

Comprehension:

Read the following passage and answer the questions given after it.

Insomnia affects a lot of people, but sleeping pills aren't the only – or the best—answer. A good sleep routine, exercise and mindfulness are all options to get the restorative sleep you need.

Set up a daily sleep pattern by going to bed at the same time each night and waking up at the same time each morning. Yes, even on weekends. Keep your bedroom peaceful, dark and on the cool side. Take out all electronics, and stop using them at least one hour before you turn in. They emit a type of light that interferes with your natural body rhythms, prompting you to stay alert when you should be winding down.

Exercising vigorously in the morning leads to better sleep at night. But if your only free time is later in the day, such workouts don't seem to interfere with sleep as previously thought. Stubborn sleeplessness may respond to mindfulness meditation, which can focus specifically on insomnia or stress reduction.

According to research, working with a therapist and practicing meditation at home for 30 to 45 minutes nearly every day helps people get better sleep. By working with trained therapist, you'll learn how to change the negative thoughts that could be at the root of your sleep problem.

Getting a stipulated amount of sleep each day is crucial for a healthy life.

SubQuestion No : 16

Q.1  
6 Identify one word for the words given below:

Question ID : 16794320680

inability / difficulty to sleep

- Ans
- 1. insomnia
  - 2. anaemia
  - 3. bulimia
  - 4. claustrophobia

Comprehension:

Read the following passage and answer the questions given after it.

Insomnia affects a lot of people, but sleeping pills aren't the only – or the best—answer. A good sleep routine, exercise and mindfulness are all options to get the restorative sleep you need.

Set up a daily sleep pattern by going to bed at the same time each night and waking up at the same time each morning. Yes, even on weekends. Keep your bedroom peaceful, dark and on the cool side. Take out all electronics, and stop using them at least one hour before you turn in. They emit a type of light that interferes with your natural body rhythms, prompting you to stay alert when you should be winding down.

Exercising vigorously in the morning leads to better sleep at night. But if your only free time is later in the day, such workouts don't seem to interfere with sleep as previously thought. Stubborn sleeplessness may respond to mindfulness meditation, which can focus specifically on insomnia or stress reduction.

According to research, working with a therapist and practicing meditation at home for 30 to 45 minutes nearly every day helps people get better sleep. By working with trained therapist, you'll learn how to change the negative thoughts that could be at the root of your sleep problem.

Getting a stipulated amount of sleep each day is crucial for a healthy life.

SubQuestion No : 17

Q.1  
7 Choose the correct option to answer the question given below.

Question ID : 16794320681

What, according to the writer, do many people usually do when they cannot sleep?

- Ans
- 1. read books of their choice
  - 2. take sleeping pills
  - 3. listen to music
  - 4. talk to friends on the phone

Comprehension:

Read the following passage and answer the questions given after it.

Insomnia affects a lot of people, but sleeping pills aren't the only – or the best—answer. A good sleep routine, exercise and mindfulness are all options to get the restorative sleep you need.

Set up a daily sleep pattern by going to bed at the same time each night and waking up at the same time each morning. Yes, even on weekends. Keep your bedroom peaceful, dark and on the cool side. Take out all electronics, and stop using them at least one hour before you turn in. They emit a type of light that interferes with your natural body rhythms, prompting you to stay alert when you should be winding down.

Exercising vigorously in the morning leads to better sleep at night. But if your only free time is later in the day, such workouts don't seem to interfere with sleep as previously thought. Stubborn sleeplessness may respond to mindfulness meditation, which can focus specifically on insomnia or stress reduction.

According to research, working with a therapist and practicing meditation at home for 30 to 45 minutes nearly every day helps people get better sleep. By working with trained therapist, you'll learn how to change the negative thoughts that could be at the root of your sleep problem.

Getting a stipulated amount of sleep each day is crucial for a healthy life.

SubQuestion No : 18

Q.1  
8 Choose the correct option to answer the question given below.

Question ID : 16794320682

Why, according to the writer, should people not take electronic items with them when they go to sleep?

Ans  1.

Electronic items emit harmful light that interfere with body rhythms and make people more alert instead of relaxed and wanting to rest.

 2.

Electronic items are addictive and once engaged in them people lose track of time.

 3.

Electronic items are a big distraction and do not allow people to concentrate or focus on the work at hand.

 4.

People should not use electronic items in dark and cool rooms because that affects the brain/eyes.

Comprehension:

Read the following passage and answer the questions given after it.

Insomnia affects a lot of people, but sleeping pills aren't the only – or the best—answer. A good sleep routine, exercise and mindfulness are all options to get the restorative sleep you need.

Set up a daily sleep pattern by going to bed at the same time each night and waking up at the same time each morning. Yes, even on weekends. Keep your bedroom peaceful, dark and on the cool side. Take out all electronics, and stop using them at least one hour before you turn in. They emit a type of light that interferes with your natural body rhythms, prompting you to stay alert when you should be winding down.

Exercising vigorously in the morning leads to better sleep at night. But if your only free time is later in the day, such workouts don't seem to interfere with sleep as previously thought. Stubborn sleeplessness may respond to mindfulness meditation, which can focus specifically on insomnia or stress reduction.

According to research, working with a therapist and practicing meditation at home for 30 to 45 minutes nearly every day helps people get better sleep. By working with trained therapist, you'll learn how to change the negative thoughts that could be at the root of your sleep problem.

Getting a stipulated amount of sleep each day is crucial for a healthy life.

SubQuestion No : 19

Q.1 Choose the INCORRECT option.

Question ID : 16794320683

How can therapists help people to get the required amount of sleep?

They can help us by

- Ans
- 1. teaching stress /anxiety reduction processes
  - 2. teaching techniques of mindfulness meditation
  - 3. meditating for 35 to 40 minutes on our behalf.
  - 4. making us aware of negative thought patterns

Comprehension:

Read the following passage and answer the questions given after it.

Insomnia affects a lot of people, but sleeping pills aren't the only – or the best—answer. A good sleep routine, exercise and mindfulness are all options to get the restorative sleep you need.

Set up a daily sleep pattern by going to bed at the same time each night and waking up at the same time each morning. Yes, even on weekends. Keep your bedroom peaceful, dark and on the cool side. Take out all electronics, and stop using them at least one hour before you turn in. They emit a type of light that interferes with your natural body rhythms, prompting you to stay alert when you should be winding down.

Exercising vigorously in the morning leads to better sleep at night. But if your only free time is later in the day, such workouts don't seem to interfere with sleep as previously thought. Stubborn sleeplessness may respond to mindfulness meditation, which can focus specifically on insomnia or stress reduction.

According to research, working with a therapist and practicing meditation at home for 30 to 45 minutes nearly every day helps people get better sleep. By working with trained therapist, you'll learn how to change the negative thoughts that could be at the root of your sleep problem.

Getting a stipulated amount of sleep each day is crucial for a healthy life.

SubQuestion No : 20

Q.2  
0 What, according to the writer, is sound advice for a sound sleep? Identify the INCORRECT statements.

Question ID : 16794320684

1. Go to sleep everyday at the same time.
2. Sleep in a quiet, dark and cool room.
3. Sleep whenever you feel like.
4. Stop using electronic gadgets one hour prior to sleeping time.
5. Exercise everyday either in the morning or later.
6. Do not fuss about noise, lights or people in the room.
7. Practise mindfulness meditation.
8. Use anxiety/ stress reduction techniques, if someone is prone to be anxious or unnecessarily stressed.
9. Get rid of positive thoughts.
10. Take help of a therapist in case of chronic sleeplessness.

- Ans
1. Statements 9 and 10
  2. Statements 3, 6, 9
  3. Statements 5, 6 and 7

Section : General Hindi

Comprehension:

नीचे दिये गए गद्यांश को पढ़कर पूछे गये प्रश्नों के उत्तर दीजिए।

छायावाद का उल्लेख 1920 ई के आसपास मिलने लगता है। शुक्ल जी इसे रवीन्द्रनाथ ठाकुर की कविताओं के प्रभाव से आया हुआ मानकर इसका संबंध ईसाई संतों के फैंटैसमाटा (छायाभास) शब्द से जोड़ते थे। उन्होंने छायावाद को चित्र-भाषा शैली भी कहा। पं नन्ददुलारे वाजपेयी ने इसका संबंध युग-बोध से जोड़ते हुए भी इसे व्यक्त सौंदर्य में आध्यात्मिक छाया का भान कहा। डॉ नगेंद्र ने छायावाद को 'स्थूल के विरुद्ध सूक्ष्म का विद्रोह' माना। डॉ नामवर सिंह ने अपनी पुस्तक 'छायावाद' में विश्वसनीय तौर पर दिखाया कि छायावाद वस्तुतः कई काव्य प्रवृत्तियों का सामूहिक नाम है और वह 'उस राष्ट्रीय जागरण की काव्यात्मक अभिव्यक्ति है जो एक ओर पुरानी रूढ़ियों से मुक्ति पाना चाहता था और दूसरी ओर विदेशी पराधीनता से'।

SubQuestion No : 1

Q.1 'आध्यात्मिक छाया का भान' अवधारणा का सम्बन्ध किससे है?

Question ID : 16794320688

Ans

✘ 1. डॉ. नगेंद्र

✔ 2. नन्ददुलारे वाजपेयी

✘ 3. रामचन्द्र शुक्ल

✘ 4. डॉ. नामवर सिंह

Comprehension:

नीचे दिये गए गद्यांश को पढ़कर पूछे गये प्रश्नों के उत्तर दीजिए।

छायावाद का उल्लेख 1920 ई के आसपास मिलने लगता है। शुक्ल जी इसे रवीन्द्रनाथ ठाकुर की कविताओं के प्रभाव से आया हुआ मानकर इसका संबंध ईसाई संतों के फैंटैसमाटा (छायाभास) शब्द से जोड़ते थे। उन्होंने छायावाद को चित्र-भाषा शैली भी कहा। पं नंददुलारे वाजपेयी ने इसका संबंध युग-बोध से जोड़ते हुए भी इसे व्यक्त सौंदर्य में आध्यात्मिक छाया का भान कहा। डॉ नगेंद्र ने छायावाद को 'स्थूल के विरुद्ध सूक्ष्म का विद्रोह' माना। डॉ नामवर सिंह ने अपनी पुस्तक 'छायावाद' में विश्वसनीय तौर पर दिखाया कि छायावाद वस्तुतः कई काव्य प्रवृत्तियों का सामूहिक नाम है और वह 'उस राष्ट्रीय जागरण की काव्यात्मक अभिव्यक्ति है जो एक ओर पुरानी रूढ़ियों से मुक्ति पाना चाहता था और दूसरी ओर विदेशी पराधीनता से'।

SubQuestion No : 2

Q.2 छायावाद का उल्लेख कब मिलने लगता है?

Question ID : 16794320686

- Ans
- 1. 1930
  - 2. 1925
  - 3. 1915
  - 4. 1920

Comprehension:



नीचे दिये गए गद्यांश को पढ़कर पूछे गये प्रश्नों के उत्तर दीजिए।

छायावाद का उल्लेख 1920 ई के आसपास मिलने लगता है। शुक्ल जी इसे रवीन्द्रनाथ ठाकुर की कविताओं के प्रभाव से आया हुआ मानकर इसका संबंध ईसाई संतों के फैँसमाटा (छायाभास) शब्द से जोड़ते थे। उन्होंने छायावाद को चित्र-भाषा शैली भी कहा। पं नन्ददुलारे वाजपेयी ने इसका संबंध युग-बोध से जोड़ते हुए भी इसे व्यक्त सौंदर्य में आध्यात्मिक छाया का भान कहा। डॉ नगेंद्र ने छायावाद को 'स्थूल के विरुद्ध सूक्ष्म का विद्रोह' माना। डॉ नामवर सिंह ने अपनी पुस्तक 'छायावाद' में विश्वसनीय तौर पर दिखाया कि छायावाद वस्तुतः कई काव्य प्रवृत्तियों का सामूहिक नाम है और वह 'उस राष्ट्रीय जागरण की काव्यात्मक अभिव्यक्ति है जो एक ओर पुरानी रूढ़ियों से मुक्ति पाना चाहता था और दूसरी ओर विदेशी पराधीनता से'।

SubQuestion No : 3

Q.3 छायावाद को चित्र-भाषा शैली किसने कहा?

Question ID : 16794320687

- Ans
1. नन्ददुलारे वाजपेयी
  2. डॉ. नामवर सिंह
  3. डॉ. नगेंद्र
  4. रामचन्द्र शुक्ल

Comprehension:

नीचे दिये गए गद्यांश को पढ़कर पूछे गये प्रश्नों के उत्तर दीजिए।

छायावाद का उल्लेख 1920 ई के आसपास मिलने लगता है। शुक्ल जी इसे रवीन्द्रनाथ ठाकुर की कविताओं के प्रभाव से आया हुआ मानकर इसका संबंध ईसाई संतों के फैंटैसमटा (छायाभास) शब्द से जोड़ते थे। उन्होंने छायावाद को चित्र-भाषा शैली भी कहा। पं नन्ददुलारे वाजपेयी ने इसका संबंध युग-बोध से जोड़ते हुए भी इसे व्यक्त सौंदर्य में आध्यात्मिक छाया का भान कहा। डॉ नगेंद्र ने छायावाद को 'स्थूल के विरुद्ध सूक्ष्म का विद्रोह' माना। डॉ नामवर सिंह ने अपनी पुस्तक 'छायावाद' में विश्वसनीय तौर पर दिखाया कि छायावाद वस्तुतः कई काव्य प्रवृत्तियों का सामूहिक नाम है और वह 'उस राष्ट्रीय जागरण की काव्यात्मक अभिव्यक्ति है जो एक ओर पुरानी रूढ़ियों से मुक्ति पाना चाहता था और दूसरी ओर विदेशी पराधीनता से'।

SubQuestion No : 4

Q.4 छायावाद को 'स्थूल के प्रति सूक्ष्म का विद्रोह' किसने माना?

Question ID : 16794320689

- Ans
- 1. रामचन्द्र शुक्ल
  - 2. नन्ददुलारे वाजपेयी
  - 3. डॉ. नगेंद्र
  - 4. डॉ. नामवर सिंह

Comprehension:

नीचे दिये गए गद्यांश को पढ़कर पूछे गये प्रश्नों के उत्तर दीजिए।

छायावाद का उल्लेख 1920 ई के आसपास मिलने लगता है। शुक्ल जी इसे रवीन्द्रनाथ ठाकुर की कविताओं के प्रभाव से आया हुआ मानकर इसका संबंध ईसाई संतों के फैंटैसमाटा (छायाभास) शब्द से जोड़ते थे। उन्होंने छायावाद को चित्र-भाषा शैली भी कहा। पं नन्ददुलारे वाजपेयी ने इसका संबंध युग-बोध से जोड़ते हुए भी इसे व्यक्त सौंदर्य में आध्यात्मिक छाया का भान कहा। डॉ नगेंद्र ने छायावाद को 'स्थूल के विरुद्ध सूक्ष्म का विद्रोह' माना। डॉ नामवर सिंह ने अपनी पुस्तक 'छायावाद' में विश्वसनीय तौर पर दिखाया कि छायावाद वस्तुतः कई काव्य प्रवृत्तियों का सामूहिक नाम है और वह 'उस राष्ट्रीय जागरण की काव्यात्मक अभिव्यक्ति है जो एक ओर पुरानी रूढ़ियों से मुक्ति पाना चाहता था और दूसरी ओर विदेशी पराधीनता से'।

SubQuestion No : 5

Q.5 गद्यांश में उल्लिखित 'छायावाद' पुस्तक के लेखक हैं:

Question ID : 16794320690

- Ans
- 1. डॉ. नगेंद्र
  - 2. डॉ. नामवर सिंह
  - 3. नन्ददुलारे वाजपेयी
  - 4. रामचन्द्र शुक्ल

Q.6 'भद्र' का विलोम होगा:

Question ID : 16794320702

- Ans
- 1. संभ्रांत
  - 2. विद्वान
  - 3. मूर्ख
  - 4. अभद्र

Q.7 अनिश्चयवाचक सर्वनाम है:

Question ID : 16794320694

- Ans
- 1. आप
  - 2. हम
  - 3. वह
  - 4. कोई

Q.8

Question ID : 16794320700

'पक्षी' में प्रत्यय है:

- Ans
- 1. क्षी
  - 2. ई
  - 3. इ
  - 4. प

Question ID : 16794320701

Q.9 'नौका' का पर्यायवाची है:

- Ans
- 1. तरी
  - 2. यामिनी
  - 3. भारती
  - 4. रमणी

Question ID : 16794320698

Q.10 निम्न में कौन सा शब्द स्त्रीलिंग है?

- Ans
- 1. आशीर्वाद
  - 2. उम्र
  - 3. आकाश
  - 4. आहार

Question ID : 16794320695

Q.11 निम्न में कौन सा शब्द अव्यय है?

- Ans
- 1. सूखा
  - 2. सुनहरा
  - 3. बल्कि
  - 4. ऊपरी

Question ID : 16794320704

Q.12 निम्न में शुद्ध वर्तनी वाला शब्द है:

- Ans
- 1. तात्कलिक
  - 2. तत्कालीक
  - 3. तात्कालिक
  - 4. तत्कालिक

Question ID : 16794320705

Q.13 'इनने आपका घर देखा है।' वाक्य में अशुद्ध अंश है:

- Ans
- 1. देखा है।
  - 2. इनने
  - 3. आपका
  - 4. घर

Q.14 'भास्कर' का संधि विच्छेद होगा:

Question ID : 16794320696

- Ans
- 1. भा + स्कर
  - 2. भा + कर
  - 3. भास् + कर
  - 4. भा: + कर

Q.15 'शिशु से संबन्धित' के लिए एक शब्द होगा:

Question ID : 16794320703

- Ans
- 1. शैशव
  - 2. शैव
  - 3. वात्सल्य
  - 4. वैष्णव

Q.16 निम्न में कौन सा शब्द तत्सम है?

Question ID : 16794320691

- Ans
- 1. माखन
  - 2. मार्ग
  - 3. माँ
  - 4. माई

Q.17 'रातोंरात' में समास है:

Question ID : 16794320697

- Ans
- 1. द्विगु
  - 2. अव्ययीभाव
  - 3. तत्पुरुष
  - 4. द्वंद्व

Q.18 'अवलोकन' में उपसर्ग है:

Question ID : 16794320699

- Ans
- 1. कन
  - 2. अ
  - 3. लोकन
  - 4. अव

Q.19 निम्न में तद्भव शब्द कौन सा है?

Question ID : 16794320692

- Ans
- 1. बंधन
  - 2. वंश
  - 3. बहू
  - 4. बाहु

Q.20

निम्न में जातिवाचक संज्ञा कौन सी है?

Question ID : 16794320693

- Ans
- 1. सोमवार
  - 2. चतुराई
  - 3. दिवाली
  - 4. मकान

Section : Subject Related

Q.1 On the morning of August 6, 1945. America released Atom bomb on Japan named?

Question ID : 16794320721

- Ans
- 1. Little Secret
  - 2. Little boy
  - 3. Little dwarf
  - 4. Little girl

Q.2 Who said this "We shall fight in the seas and oceans"?

Question ID : 16794320723

- Ans
- 1. Churchill
  - 2. Rasewelt
  - 3. Hittler
  - 4. Mussolini

Q.3 Which period of French revolution is known as region of Terror?

Question ID : 16794320706

- Ans
- 1. 1794 to 1799
  - 2. 1789 to 1792
  - 3. 1799 to 1815
  - 4. 1793 to 1794

Q.4 "The Only people who had any right in India are the British". For which government bill these lines were quoted?

Question ID : 16794320718

- Ans
- 1. Cabinet mission plan
  - 2. Ilbert Bill
  - 3. Simmon Commission
  - 4. Pitts India Act

Q.5 Which newspaper supported the Indigo peasant movement of Champaran?

Question ID : 16794320717

- Ans
- 1. Madras Gazette
  - 2. Hindu Patriot
  - 3. Bengal Gazette
  - 4. The Telegraph

Q.6 Mangal Pandey belong to which infantry?

Question ID : 16794320709

- Ans
- 1. 32 native infantry

- 2. 34 native infantry
- 3. 33 native infantry
- 4. 31 native infantry

Q.7 By which charter Act of Christian missionaries were allowed to spread Christianity in India?

Question ID : 16794320711

- Ans
- 1. Charter Act-1853
  - 2. Charter Act-1793
  - 3. Charter Act-1813
  - 4. Charter Act-1833

Q.8 Which act of British government provided Diarchy at the center?

Question ID : 16794320716

- Ans
- 1. Act of 1935
  - 2. Act of 1919
  - 3. Act of 1892
  - 4. Act of 1909

Q.9 In which year Louis XVI was guillotine by the Republic Government?

Question ID : 16794320708

- Ans
- 1. 21 March, 1792
  - 2. 21 March, 1793
  - 3. 21 January, 1793
  - 4. 21 February, 1793

Q.10 Which one of these is not related to UNO as Agencies?

Question ID : 16794320719

- Ans
- 1. WHO
  - 2. UNESCO
  - 3. FAO
  - 4. A. BAMCEF

Q.11 Nana Sahib was adopted son of which Peshwa?

Question ID : 16794320712

- Ans
- 1. Shivaji
  - 2. Bala ji Vishavnath
  - 3. Peshwa Baji Rao I
  - 4. Peshwa Baji Rao II

Q.12 Who among the following did not sign the Nehru Committee report?

Question ID : 16794320714

- Ans
- 1. Subash Chandra Bose
  - 2. GR Pardhan
  - 3. Jawahar Lala Nehru
  - 4. Sardar Mangal Singh

Q.13 In 1945 How many countries signed the charter of UNO?

Question ID : 16794320720

- Ans
- 1. 52 Countries
  - 2. 53 Countries
  - 3. 50 Countries
  - 4. 51 Countries

Q.14 In year \_\_\_\_\_ VD Savarkar organized "Abhinav Bharat"?

Question ID : 16794320724

- Ans
- 1. 1902
  - 2. 1904
  - 3. 1903
  - 4. 1905

Q.15 Who was the political Guru of Mahatma Gandhi?

Question ID : 16794320713

- Ans
- 1. Gopal Krishna Gokhale
  - 2. Justice Ranade
  - 3. Dada Bhai Naroji
  - 4. Firoz Shah Mehta

Q.16 France went to war in 1792 with which country?

Question ID : 16794320707

- Ans
- 1. Austria
  - 2. Spain
  - 3. England
  - 4. Germany

Q.17 Bal Gangadhar Tilak started the newspaper "Maharatta" in which language?

Question ID : 16794320715

- Ans
- 1. Marathi
  - 2. English
  - 3. Hindi
  - 4. Urdu

Q.18 Which of the following is first leader of Indian community in North America to start a paper called "Free Hindustan"?

Question ID : 16794320725

- Ans
- 1. Kartar Singh Sarabha
  - 2. Lala Hardyal
  - 3. Sohan Singh Bhakna
  - 4. Tarak Nath Das

Q.19 Which Pair is not Correct?

Question ID : 16794320710

- Ans
- 1. Laxmi Bai---Jhansi
  - 2. Kunwar singh---Lukhnow
  - 3. Taty Tope---Gwalior
  - 4. Nana Sahib---Kanpur



Q.20 Which of the following battles Hitler lost to USSR ?

Question ID : 16794320722

- Ans
- 1. War of Stalingrad
  - 2. War of Narmandy
  - 3. War on Poland
  - 4. War of Dunkrik

Section : Subject Related

Q.1 Who wrote these lines "All our Palaces, all our theatres, all these riches of ours, we owe to the effort of these same hungry People, who make these things"?

Question ID : 16794320738

- Ans
- 1. Anton Chekhov
  - 2. Leo Tolstoy
  - 3. Maxim Gorkey
  - 4. Lenin

Q.2 Arch Duke Franz Ferdinand was killed on which date?

Question ID : 16794320742

- Ans
- 1. 28 June 1914
  - 2. 27 July 1914
  - 3. 27 June 1914
  - 4. 28 July 1914

Q.3 How many members were in cabinet mission plan?

Question ID : 16794320729

- Ans
- 1. 5 member
  - 2. 2 member
  - 3. 4 member
  - 4. 3 member

Q.4 Industrial Society - "May truly be said to be a miserly, selfish system" which socialist thinker wrote these words in 1857?

Question ID : 16794320732

- Ans
- 1. Robertowen
  - 2. Pierre Joseph Proudhan
  - 3. Friedrich engles
  - 4. Karlmarx

Q.5 What was the position of the "Mensheviks" in 1903?

Question ID : 16794320739

- Ans
- 1. Majority
  - 2. Minority
  - 3. Popular
  - 4. Moderate

Q.6 "Workers of the world unite! You have nothing to lose but your chains" who wrote these lines?

Question ID : 16794320733

- Ans
- 1. Lenin

- 2. Voltare
- 3. Maxingorkey
- 4. Karl Marx

Q.7 In First round table conference which of these members participated as Hindu Maha sabha members?

Question ID : 16794320730

- Ans
- 1. Jaikar and BS Munje
  - 2. Dr. B R Ambedkar
  - 3. K T paul and Sampurn Singh
  - 4. C Y Chintamani and T.V. Sapru

Q.8 When Was Rome Berlin Axis signed?

Question ID : 16794320736

- Ans
- 1. Nov 1935
  - 2. Oct 1935
  - 3. Oct 1936
  - 4. Nov 1936

Q.9 Lord Canning was the Governor General of India from?

Question ID : 16794320745

- Ans
- 1. 1857 to 1863
  - 2. 1858 to 1862
  - 3. 1856 to 1862
  - 4. 1855 to 1861

Q.10 USA entered in First World war in Which year?

Question ID : 16794320743

- Ans
- 1. March, 1916
  - 2. March, 1917
  - 3. April, 1916
  - 4. April, 1917

Q.11 Civil disobedience moment was taken back in which year?

Question ID : 16794320731

- Ans
- 1. 7 April, 1932
  - 2. 7 April, 1934
  - 3. 6 April, 1932
  - 4. 6 April, 1934

Q.12 Who gave the slogan "Peace, Land and Bread"?

Question ID : 16794320741

- Ans
- 1. Karl Max
  - 2. Lenin
  - 3. Trotasky
  - 4. Stalin

Q.13 Who declared "Either they will give us the government or we shall take it by descending on Rome"?

Ans  1. F.D. Rarewelt

2. Mussolini

3. General Franko

4. Adalf Hittler

Question ID : 16794320744

Q.14 By which law Nazi deprived Jews of German Citizenship?

Question ID : 16794320740

Ans  1. Treaty of versailles

2. Nuremberg Laws

3. Enabling act

4. Mein Kamph

Q.15 Karl Marx used which word for factory owning middle class?

Question ID : 16794320734

Ans  1. Surfs

2. Proletariat

3. Lores

4. Bourgeoisie

Q.16 When Did Germany invade Poland?

Question ID : 16794320735

Ans  1. Sept 1939

2. Dec 1939

3. Oct 1939

4. Nov 1939

Q.17 "Quit India" resolution was moved by which leader?

Question ID : 16794320726

Ans  1. Mahatma Gandhi

2. Jawahar Lal Nehru

3. Maulana Abul Kalam Azad

4. Subash Chandra Bose

Q.18 Who gave "Father of the Nation" title to Mahatma Gandhi?

Question ID : 16794320728

Ans  1. Subash Chandra Bose

2. G K Gokhale

3. Rabindra Nath Tagore

4. Jawahar Lal Nehru

Q.19 Kanpur conspiracy case was framed against whom in 1924?

Question ID : 16794320727

Ans  1. Congress

2. Hindu Maha sabha

3. Muslim League

4. Newbie Communist

Q.20 Who was the King of Russia During Russian Revolution of 1917?

Question ID : 16794320737

- Ans
- 1. Nicholas II
  - 2. Stalin
  - 3. Lenin
  - 4. Alexander III

Section : Subject Related

Q.1 Which of the following countries have two party system?

Question ID : 16794320764

- Ans
- 1. Pakistan
  - 2. India
  - 3. USA
  - 4. China

Q.2 Right to Constitutional Remedies is mentioned in which article of constitution?

Question ID : 16794320748

- Ans
- 1. Article 30
  - 2. Article 14
  - 3. Article 32
  - 4. Article 23

Q.3 In Indian council act 1909 (Minto-marle act) seats of legislative council was increased to:

Question ID : 16794320750

- Ans
- 1. 70
  - 2. 60
  - 3. 50
  - 4. 40

Q.4 Among the following which country suffered disintegration due to political fights on the basis of religious and ethnic identities?

Question ID : 16794320763

- Ans
- 1. Yugoslavia
  - 2. Netherland
  - 3. Germany
  - 4. Belgium

Q.5 Which provision of Constitution provide power to parliament to establish a new state?

Question ID : 16794320755

- Ans
- 1. Article 2 & 3
  - 2. Article 5 & 6
  - 3. Article 3 & 4
  - 4. Article 4 & 5

Q.6 Lord Pethick-Lawrence, Sir Stafford Cripps, A.V. Alexander are related to which of the following?

Question ID : 16794320753

- Ans
- 1. Wavell plan
  - 2. Mount Beaton plan
  - 3. Cabinet mission plan

~~X~~ 4. Cripps mission

Q.7 "Separate Electorate system" was introduced in which Act?

Question ID : 16794320752

- Ans ~~X~~ 1. Pitt's India Act  
✓ 2. Act 1909  
~~X~~ 3. Act 1861  
~~X~~ 4. Regulating Act

Q.8 Different arguments are usually put forth in favor of and against power sharing.  
Identify those which are in favor of power sharing:

Question ID : 16794320761

- A) Reduced conflict among different communities.
- B) Decrease the possibility of arbitrariness.
- C) Delay decision making process.
- D) Accommodates diversities.
- E) Increases inability and divisiveness.
- F) Strengthen the unity of the country.
- G) Divided the people.

- Ans ~~X~~ 1. A, B, D, G  
✓ 2. A, B, D, F  
~~X~~ 3. A, C, E, F  
~~X~~ 4. B, C, D, G

Q.9 By which Act Federal structure was introduced by British?

Question ID : 16794320751

- Ans ~~X~~ 1. Ramsay Macdonald Award  
~~X~~ 2. Act of 1909  
~~X~~ 3. Act of 1919  
✓ 4. Act of 1935

Q.10 By which Article of constitution untouchability was removed by constitution?

Question ID : 16794320747

- Ans ~~X~~ 1. Article -14  
✓ 2. Article - 17  
~~X~~ 3. Article - 19  
~~X~~ 4. Article - 21

Q.11 Which one of the is not the power of Parliament?

Question ID : 16794320757

- Ans ~~X~~ 1.  
Parliament can increase or decrease area of any state.  
~~X~~ 2. Can change the name of any state.  
✓ 3. Can impose any language in the state.  
~~X~~ 4. It can change the boundaries of any state.

Q.12 In \_\_\_\_\_ year an act was passed to recognize Sinhala as the only official language in Sri Lanka.

Question ID : 16794320762

- Ans ~~X~~ 1. 1962 AD  
✓ 2. 1956 AD

3. 1948 AD

4. 1965 AD

Q.13 Communist Party of India Marxist was founded in which year?

Question ID : 16794320765

Ans  1. 1964

2. 1984

3. 1980

4. 1925

Q.14 On \_\_\_\_\_ Pt. Jawaharlal Nehru introduced the "Objectives Resolution" in constituent Assembly.

Question ID : 16794320749

Ans  1. 15th January 1946

2. 13th December 1946

3. 12th November 1946

4. 11th October 1946

Q.15 Which of the following states has the highest Lok sabha seats?

Question ID : 16794320756

Ans  1. West Bengal

2. Maharashtra

3. Bihar

4. Andhra Pradesh

Q.16 According to which Amendment, words "socialist and secular" were added on preamble of Indian constitution.

Question ID : 16794320754

Ans  1. 78 Amendment

2. 42 Amendment

3. 44 Amendment

4. None of these

Q.17 What is the duration of Question hour in Lok sabha and Rajya Sabha?

Question ID : 16794320759

Ans  1. 30 minute before session

2. 1 hour 30 minute before session

3. 1 hour before session

4. 2 hour before session

Q.18 By Which amendment of constitution the panchayati Raj system's sub- article was added?

Question ID : 16794320760

Ans  1. Article 71 & 72

2. Article 70 & 71

3. None of these

4. Article 73 & 74


Q.19 Who has the power to implement fundamental right?

Question ID : 16794320746

Ans  1. Supreme and High Court

2. All courts of India

3. Parliament

 4. President

Q.20 Below is the list of Rajya Sabha Seats for different states which one of these is correct?

Question ID : 16794320758

Ans





-  4. Andhra Pradesh- 16
-  1. Gujarat – 18
- Tamil nadu – 10
- Rajasthan – 19
- Andhra Pradesh- 11
-  2. Gujarat – 11
- Tamil nadu – 18
- Rajasthan – 10
- Andhra Pradesh- 18
-  3. Gujarat – 18
- Tamil nadu – 12
- Rajasthan – 31
- Andhra Pradesh- 11
-  4. Gujarat – 16
- Tamil nadu – 18
- Rajasthan – 19

Section : Subject Related

Q.1 According to B.R. Ambedkar which of the following provisions is a part of one of the criticisms of Indian Constitutions?

Question ID : 16794320773

Ans

-  1. Directive principles of state policy
-  2. Fundamental Duties
-  3. Fundamental rights
-  4. Fedral System


Q.2 Considering the following statements, which of the following statements is/are correct.

Question ID : 16794320782

1. Natural gas occurs in the Gondwana beds.
2. Mica occurs in abundance in Kodama.
3. Dharwars are famous for petroleum.

Which of the statement given above is/are correct?

Ans

-  1. I & II
-  2. II & III
-  3. II only
-  4. III only

Q.3 Match The Columns:

Question ID : 16794320779

- A) Horizon A i) Sub-soil
- B) Horizon B ii) Bedrock
- C) Horizon C iii) True soil
- D) Horizon D iv) weathered soil

Ans

1. A (ii), B (iv), C (iii), D (i)

2. A (iii), B (i), C (iv), D (ii)

3. A (iv), B (ii), C (iii), D (i)

4. A (iii), B (iv), C (i), D (ii)

Q.4 In which of the following Articles of Indian constitution the Election Provision are mentioned?

Question ID : 16794320772

Ans  1. 329-334

2. 324-329

3. 339-334

4. 334-329

Q.5 Narmada Bachao Andolan is a good example of \_\_\_\_\_.

Question ID : 16794320768

Ans  1. Pressure Group

2. Interest group

3. Political party

4. Movement

Q.6 In which year Nagarjunasagar project was launched?

Question ID : 16794320776

Ans  1. 1956

2. 1975

3. 1967

4. 1965

Q.7 73<sup>rd</sup> and 74<sup>th</sup> amendment for Panchayati Raj was not mandatory for which below mention states and Union territories?

Question ID : 16794320775

Ans

1. Goa  
Daman  
Pondicherry  
Andaman

Lakshadweep

2. Diu  
Chandigarh  
Delhi

3. Magalia  
Mizoram  
Nagaland  
Manipur

4. Goa  
Chandigarh  
Diu  
Delhi

Q.8 What is the total area of Andaman and Nicobar Islands?

Question ID : 16794320777

Ans  1. 8249 sqkm



2. 8532 sqkm

3. 8921 sqkm

4. 8191 sqkm

Q.9 Which one of these is not a Pressure group?

Question ID : 16794320771

Ans  1. INTUC

2. AITUC

3. INC

4. ABVP

Q.10 Which of the following is correct statement related to Biomass?

Question ID : 16794320781

Ans  1. Comprised of plants and animals.

2.

Quantity or weight of living matter per unit area and per unit time.

3.

Both Quantity or weight of living matter per unit area and per unit time, and Comprised of plants and animals are correct.

4.

Both Quantity or weight of living matter per unit area and per unit time, and Comprised of plants and animals are incorrect.

Q.11 Which of these is not correctly matched?

Question ID : 16794320769

Ans  1. Bolivia - FEDECOR

2. BAMCEF - USA

3. None of these

4. Nepal - SPA

Q.12 Which of the following is the first corporatized port of India?

Question ID : 16794320780

Ans  1. Ennore Port

2. Paradeep Port

3. Kandla Port

4. Tutikorian Port

Q.13 The Green belt movement of Kenya was led by \_\_\_\_\_.

Question ID : 16794320770

Ans  1. Wangari Maathai

2. Baba Amte

3. Nelson Mandela

4. Thambu Mabiki

Q.14 Seiche is the type of \_\_\_\_\_.

Question ID : 16794320785

Ans  1. A glacier





2. Natural vegetation

3. A current

 4. A wave





Q.15 Identify what kind of democratic challenge is this Iraq wide spread sectarian violence as the new government fails to establish its authority.

Question ID : 16794320766

- Ans
-  1. Foundational challenge of democracy
  -  2. Challenge of expansion
  -  3. Deepening of democracy
  -  4. None of these





Q.16 What is the Position of Moon in Perigee?

Question ID : 16794320784

- Ans
-  1. Farthest to earth
  -  2. Nearest to earth
  -  3. Nearest to poles
  -  4. Nearest to quarter

Q.17 What is the full form of NRSA?

Question ID : 16794320778

- Ans
-  1. The Non-Religious and Secular Association.
  -  2. The National Remote Sensing Agency.
  -  3. The National Remote Sensing Association.
  -  4. The National Research and Science Agency.





Q.18 When was popular movement started in Nepal?

Question ID : 16794320767

- Ans
-  1. March 1990
  -  2. February 2006
  -  3. March 2005
  -  4. April 2006





Q.19 "I am in favor of strong center" who said these words?

Question ID : 16794320774

- Ans
-  1. Jawahar Lal Nehru
  -  2. Sardar Vallabh Bhai Patel
  -  3. Dr. Rajendra Prasad
  -  4. B.R. Ambedkar

Q.20 What is Khamsin?

Question ID : 16794320783

- Ans
-  1. Stable air mass
  -  2. Local winds
  -  3. Precipitation
  -  4. Tropical monsoon climate

Q.1 Which of the following latitudes are known as “Horse latitudes”?

Question ID : 16794320792

Ans  1.

75 – 90 degrees north and south of the equator

2.

25 – 35 degrees north and south of the equator

3.

45 – 65 degrees north and south of the equator

4.

0 – 25 degrees north and south of the equator

Q.2 What is the surface temperature of sun?

Question ID : 16794320790

Ans  1. 3550k

2. 4290k

3. 9940k

4. 5778k

Q.3 Prasar Bharati came into existence in:

Question ID : 16794320791

Ans  1. 1994

2. 1999

3. 1997

4. 1991

Q.4 Expand TPDS:

Question ID : 16794320793

Ans  1. Total Population Distributed in States

2. Total Public Diverse Society

3. Target People Development System

4. Targeted Public Distribution System

Q.5 Who said, “Give me detailed map of country and I shall conquer it”?

Question ID : 16794320787

Ans  1. Wegner

2. Hitler

3. Mackinder

4. Humbolt

Q.6 When was the Survey of India established?

Question ID : 16794320788

Ans  1. 1864

2. 1764

3. 1767

4. 1867

Q.7 Which of the following mountain range is in Maharashtra?

Question ID : 16794320794

- Ans
- 1. Abor range
  - 2. Barail range
  - 3. Dalma range
  - 4. Bamnoli range

Q.8 ग्रिफिथ टेलर के क्लाइमोग्राफ (जलवायु आरेख) की सापेक्ष आर्द्रता क्या है?

Question ID : 16794320789

- Ans
- 1. 10% से 60%
  - 2. 20% से 70%
  - 3. 20% से 80%
  - 4. 10% से 70%

Q.9 National urban livelihoods mission was launched in which of the following five-year plan?

Question ID : 16794320795

- Ans
- 1. 11<sup>th</sup> five year plan
  - 2. 13<sup>th</sup> five year plan
  - 3. 10<sup>th</sup> five year plan
  - 4. 12<sup>th</sup> five year plan

Q.10 What is Moose?

Question ID : 16794320786

- Ans
- 1. Type of wind
  - 2. Type of glacier
  - 3. Type of animals
  - 4. Type of natural vegetation

Q.11 How many school aged girls currently in our society are not en-rolled in school?

Question ID : 16794320800

- Ans
- 1. 60 million
  - 2. 50 million
  - 3. 80 million
  - 4. 10 million

Q.12 The Standard of denying inclusive education to a student is:

Question ID : 16794320805

- Ans
- 1. Low
  - 2. Average
  - 3. Very low
  - 4. Very high

Q.13 All children who come to school are born with:

Question ID : 16794320804

- Ans
- 1. A desire of knowledge
  - 2. A desire of entertainment

3. A desire of studies

4. A desire of living

Q.14 What is the collaboration that teacher need to build among students?

Question ID : 16794320802

Ans  1. Meaningful collaboration

2. Education collaboration

3. Collaboration about public services

4. Art of collaboration

Q.15 किस तरह के शिक्षा शिक्षकों में शामिल होना चाहिए?

Question ID : 16794320798

Ans  1. माध्यमिक शिक्षा

2. प्रारंभिक शिक्षा

3. तृतीयक शिक्षा

4. प्राथमिक शिक्षा

Q.16 For how many years that primes had attracted students and mathematicians?

Question ID : 16794320799

Ans  1. 1000 years

2. 2000 years

3. 10,000 years

4. 5000 years

Q.17 Who is influenced by educational debates in colonial period?

Question ID : 16794320797

Ans  1. Lal Bahadur Shastri

2. Mahatma Gandhi

3. Bhagat Singh

4. Jawaharlal Nehru

Q.18 In which year the general assembly has adopted the UN convention on the Rights of the Child?

Question ID : 16794320796

Ans  1. 2000

2. 1930

3. 1999

4. 1989

Q.19 किस उम्र में एक छात्र परिदृश्य को सरल नाटकीय लिपियों में विस्तारित करने में सक्षम हो सकता है?

Question ID : 16794320803

Ans  1. 8

2. 11

3. 10

4. 15

Q.20 What are filled with facts that students are expected to memorize?

Question ID : 16794320801

Ans  1. Note books

✓ 2. Text books

✗ 3. Running notes

✗ 4. Rough books



Participant ID:	HaryanaJobs.in
Participant Name:	
Test Center Name:	iON Digital Zone iDZ 2 Sector 62
Test Date:	16/10/2018
Test Time:	4:30 PM - 6:30 PM
Subject:	TGT SOCIAL SCIENCE FEMALE

Section : Mental Ability

Q.1 You are on your way to college. You find a gold chain on the road. What should be your most appropriate step?

Question ID : 16794319596

- Ans
- 1. Hand over the chain to the college principal
  - 2. Hand over the chain to a nearby passing person
  - 3. Pocket the chain
  - 4. Hand over the chain to the nearby police station

Q.2 If \$ means +, # means -, @ means  $\times$  and \* means  $\div$ , then what is the value of  $26\$4@3\#56*7$ ?

Question ID : 16794319601

- Ans
- 1. 32
  - 2. 36
  - 3. 40
  - 4. 30

Q.3 Study the following information carefully and answer the given questions.

Question ID : 16794319595

For a recruitment process in an accounting organisation, the candidates need to possess the following qualifications criteria:

- (i) He/she should be a graduate in commerce with at least 60% marks.
- (ii) He/she should be of at least 24 years of age and not more than 49 years as on 1 - 7 - 2016.
- (iii) He/she should have a post-qualification work experience of at least 2 years.
- (iv) He/she should have secured 55% marks in the selection process.

If the candidate fulfills the above-mentioned criteria except:

- (A) (i), and if the candidate is not a graduate in commerce but has a post-graduation degree in finance with minimum of 60% marks, he/she should be referred to the Finance Manager of the organisation.
- (B) (ii), but if the candidate fulfills all the eligibility criteria of post-qualification work experience but has secured 75% marks in the selection process, he/she may be referred to the Trainee Accountant.

Based on the above information, figure out whether the following candidate is eligible for the recruitment process. You are not to assume anything other than the information provided in each question. The case is given to you as on 1 - 7 - 2016.

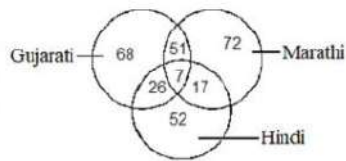
Vysnavi has done graduation in Engineering with 61% marks. Her date of birth is 4. 3. 1991. She has qualified in the selection process and has secured 69% marks in it. She also has three years of post-qualification work experience.

- Ans
- 1. The candidate may be referred to the Finance Manager
  - 2. The candidate may be referred to the Trainee Accountant
  - 3. The candidate is not to be selected
  - 4. The candidate should be selected

Q.4

Question ID : 16794319599

Study the following Venn diagram carefully and answer the question.

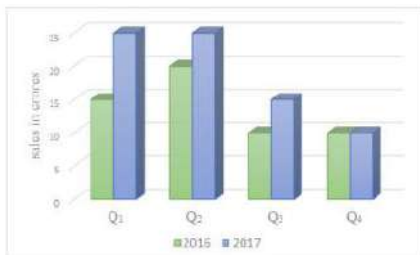


What is the ratio of people who speak Gujarati and Hindi but NOT Marathi to the people who speak only Hindi?

- Ans
- 1. 1 : 2
  - 2. 7 : 9
  - 3. 33 : 52
  - 4. 2 : 1

Q.5 The following chart shows information about the sales of the company 'XYZ' for the year 2016 & 2017.

Question ID : 16794319593



What is the ratio of total sales of the company 'XYZ' for the year 2016 to the total sales for the year 2017?

- Ans
- 1. 9 : 15
  - 2. 11 : 15
  - 3. 15 : 11
  - 4. 15 : 9

Q.6 Identify the odd pair of numerals among the options.

Question ID : 16794319605

- Ans
- 1. 9 : 37
  - 2. 6 : 25
  - 3. 4 : 13
  - 4. 7 : 29


Q.7 Suma cuts a cake into two halves and further cuts one half into smaller pieces of equal size. Each of the small pieces is thirty grams in weight. If she has nine pieces of the cake in all with her, how heavy was the original cake?

Question ID : 16794319602

- Ans
- 1. 180 grams
  - 2. 240 grams
  - 3. 480 grams
  - 4. 120 grams


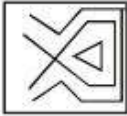
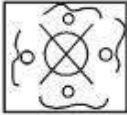

Q.8 Spot the option figure that has the below figure embedded in it.

Question ID : 16794319594



Ans



- 1. 
- 2. 
- 3. 
- 4. 

Q.9 Select the most appropriate option.

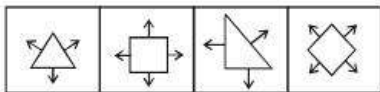
Question ID : 16794319598

A cycle must have -

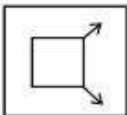
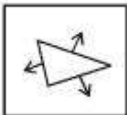
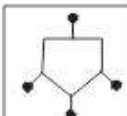
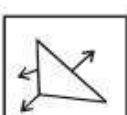
- Ans
- 1. Wheels
  - 2. Battery
  - 3. Rain proof Roof
  - 4. Vegetable Basket

Q.10 Identify the option figure that is similar to the below figures.

Question ID : 16794319589



Ans

- 1. 
- 2. 
- 3. 
- 4. 

Q.11 Parsis are related to Zoroaster in the same way Christians are related to:

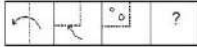
Question ID : 16794319588

- Ans
- 1. Ganesha
  - 2. Muhammad
  - 3. Jesus

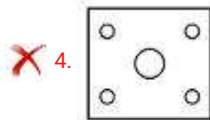
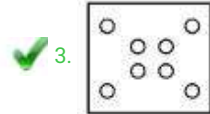
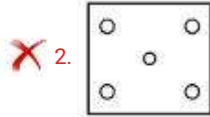

~~4.~~ Catholics

Q.12 A piece of paper is folded and cut as shown below in the question figure. From the given option figures, select the one that indicates how it would appear when unfolded.

Question ID : 16794319591



Ans



Q.13 The pairs of words given in the options share a similar relationship except in one pair. Identify the odd pair of words.

Question ID : 16794319604

Ans

~~1.~~ Sword : Slaughter

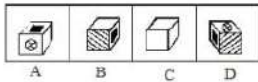
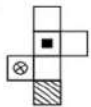
~~2.~~ Gun : Shoot

~~3.~~ Spanner : Grip

4. Spoon : Cut

Q.14 If a sheet of paper is folded as shown in the figure to form a cube, what will the result be?

Question ID : 16794319597



Ans

~~1.~~ A, C and D only

2. A only

~~3.~~ A and C only

~~4.~~ A, B, C and D

Q.15 What should come in the place of question mark in the below series:

Question ID : 16794319607

S, M, H, ?, A, Y

Ans

~~1.~~ G

~~2.~~ P

3. D

~~4.~~ X

Q.16 A father is now two times as old as his son. Ten years back, he was three times as old as his son. The present age of the son (in years) is:

Question ID : 16794319603

- Ans
- 1. 15
  - 2. 25
  - 3. 20
  - 4. 30

Q.17 What would be the next term in the below number series.

Question ID : 16794319606

47, 28, 16, ?

- Ans
- 1. 8
  - 2. 18
  - 3. 6
  - 4. 10

Q.18 A piece of paper is folded and cut as shown below in the question figures. From the given option figures, select the one that indicates how it would appear when unfolded.

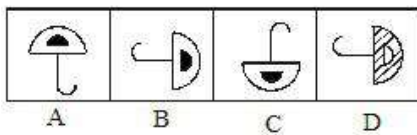
Question ID : 16794319592



- Ans
- 1.
  - 2.
  - 3.
  - 4.

Q.19 Given below are a few images. Identify the odd image.

Question ID : 16794319590




- Ans
- 1. C
  - 2. B
  - 3. A
  - 4. D

Q.20 Vardhaman is the brother of Vanaja. How is Vanaja's father's only daughter's daughter related to Vardhaman?

Question ID : 16794319600

- Ans
- 1. Mother
  - 2. Niece
  - 3. Sister

 4. Aunt

Section : General Awareness

Q.1 Who among the following is a famous flute player?

Question ID : 16794319619

- Ans
-  1. Tarun Bhattacharya
  -  2. Raghunath Seth
  -  3. Ali Akbar Khan
  -  4. Vilayat Khan

Q.2 How many total medals did India win in the 2018 Asian Games held in Indonesia?

Question ID : 16794319622

- Ans
-  1. 67
  -  2. 69
  -  3. 72
  -  4. 76

Q.3 In which language are the earliest collections of Buddha's teachings?

Question ID : 16794319609

- Ans
-  1. Sanskrit
  -  2. Magadhi
  -  3. Prakrit
  -  4. Pali

Q.4 India finished at \_\_\_\_\_ position in terms of medal tally (arranged as per number of gold medals) in the 2018 Asian Games.

Question ID : 16794319621

- Ans
-  1. Eighth
  -  2. Tenth
  -  3. Seventh
  -  4. Ninth





Q.5 "Khyal" is the Hindustani folk-dance drama or theatre of \_\_\_\_\_.

Question ID : 16794319620

- Ans
-  1. Andhra Pradesh
  -  2. Madhya Pradesh
  -  3. Uttar Pradesh
  -  4. Rajasthan

Q.6 Which of the following is NOT a 'terrestrial planet'?

Question ID : 16794319612

- Ans
-  1. Venus
  -  2. Neptune
  -  3. Mars
  -  4. Mercury

Q.7 Who are known as the first Empire builders of India?

Question ID : 16794319610

- Ans
- 1. Guptas
  - 2. Nandas
  - 3. Mauryans
  - 4. Sungas

Q.8 Union Government has signed \$375 million loan agreement with Asian Development Bank (ADB) for Irrigation Efficiency Improvement Project of which state?

Question ID : 16794319625

- Ans
- 1. Haryana
  - 2. Madhya Pradesh
  - 3. Karnataka
  - 4. Maharashtra

Q.9 Which constitutional amendment raised the age of retirement of a High Court Judge from 60 to 62 years?

Question ID : 16794319615

- Ans
- 1. 17th Constitutional Amendment Act, 1964
  - 2. 15th Constitutional Amendment Act, 1963
  - 3. 19th Constitutional Amendment Act, 1966
  - 4. 21st Constitutional Amendment Act, 1967

Q.10 In the 25th GST Council Meeting, held before the Budget 2018, rates for how many goods have been reduced?

Question ID : 16794319617

- Ans
- 1. 29
  - 2. 25
  - 3. 32
  - 4. 36

Q.11 Bishkek is the capital of which country?

Question ID : 16794319611

- Ans
- 1. Uzbekistan
  - 2. Kyrgyzstan
  - 3. Kazakhstan
  - 4. Tajikistan

Q.12 Which Article guarantees protection of monuments and places and objects of national importance?

Question ID : 16794319614

- Ans
- 1. Article 51
  - 2. Article 46
  - 3. Article 53
  - 4. Article 49

Q.13 Where is the headquarter of Physical Research Laboratory in India?

Question ID : 16794319624

- Ans
- 1. Kolkata
  - 2. Thumba
  - 3. Bangalore
  - 4. Ahmedabad

Q.14 Uttarakhand came into being in 2000 as the \_\_\_\_\_ state of India.

Ans  1. 25<sup>th</sup>

2. 26<sup>th</sup>

3. 27<sup>th</sup>

4. 28<sup>th</sup>

Question ID : 16794319613

Q.15 Gulabo Sapera is associated with which dance form?

Question ID : 16794319618

Ans  1. Sattriya

2. Chhau

3. Pandavani

4. Kalbelia

Q.16 Where was the sixth Regional Comprehensive Economic Partnership (RCEP) Trade Ministers' Meeting held?

Question ID : 16794319626

Ans  1. Singapore

2. Thailand

3. Indonesia

4. Malaysia

Q.17 Which bank's punch line is, "Together we Prosper"?

Question ID : 16794319616

Ans  1. Bank Of Rajasthan

2. Andhra Bank

3. Punjab National Bank

4. Allahabad Bank

Q.18 What is the chemical formula for carbonic acid?

Question ID : 16794319623

Ans  1.  $\text{CHO}_3$

2.  $\text{HCO}_3$

3.  $\text{H}_2\text{CO}_3$

4.  $\text{CO}_2\text{HCO}_3$

Q.19 Union Government has constituted a 21- member advisory panel on Science, Technology and innovation called Prime Minister's Science, Technology and Innovation Advisory Council (PM-STIAC), headed by \_\_\_\_\_.

Question ID : 16794319627

Ans  1. Subhash Kak

2. AS Kiran Kumar

3. K Vijay Raghavan

4. VK Saraswat

Q.20 Which one of the following was the capital of the kingdom of Kosala?

Question ID : 16794319608

Ans  1. Varanasi

2. Ujjain

3. Ayodhya

Section : Arithmetic Ability

Q.1 If  $\frac{\sqrt{5+2\sqrt{6}} - \sqrt{5-2\sqrt{6}}}{(4\sqrt{3}-5\sqrt{2}) \times (3\sqrt{2}+4\sqrt{3})} = a\sqrt{2} + b\sqrt{3}$ , Then the value of (a-b) is:

Question ID : 16794319629

Ans

✗ 1.  $\frac{1}{3}$

✓ 2.  $-\frac{1}{15}$

✗ 3.  $\frac{1}{15}$

✗ 4.  $-\frac{1}{3}$

Q.2 A 100 m long train takes 7.2 seconds to cross a person walking at 5 km/h in the direction opposite to that of the train. What is the speed (in km/h) of the train?

Question ID : 16794319642

Ans

✗ 1. 48

✓ 2. 45

✗ 3. 54

✗ 4. 50

Q.3 The value of  $\frac{(0.2 \times 0.3 \times 0.173) \div (0.2 \div 0.2 \text{ of } 0.1 - 0.03 \div 0.6 \text{ of } 0.01)}{0.12 \text{ of } (0.0123 - 0.004) + 0.36 \times 0.003}$  is:

Question ID : 16794319628

Ans

✗ 1. 0.5

✗ 2. 0.2

✗ 3. 0.1

✓ 4. 1

Q.4 Let x be the least number which when divided by 21, 33, 35 and 55, leaves a remainder of 3 in each, but is exactly divisible by 67. What is the sum of the digits of x?

Question ID : 16794319631

Ans

✗ 1. 12

✓ 2. 15

✗ 3. 17

✗ 4. 16

Q.5 The price of oil is increased by 20%. However, the expenditure unit increases by 10% only. What is the percentage increase or decrease in consumption?

Question ID : 16794319632

Ans

✗ 1.  $8\frac{1}{3}\%$ , increase

✓ 2.  $8\frac{1}{3}\%$ , decrease

✗ 3. 10%, decrease

✗ 4. 10%, increase

Q.6 Anvi sells her watch at a loss of 5%. If she had sold it for ₹ 255 more, she would have gained 10%. What will be the selling price, if she sells it at a gain of 8%?

Question ID : 16794319634

Ans

✗ 1. ₹ 1680

2. ₹ 1620

3. ₹ 1650

4. ₹ 1600

Q.7 Income of A is equal to  $x\%$  of income of B and expenditure of A is  $80\%$  of B's expenditure. If A's income is equal to  $90\%$  of B's expenditure and the ratio of the savings of A to that of B is  $1:2$ , then the value of  $x$  is:

Question ID : 16794319633

Ans  1. 70

2. 60

3. 75

4. 80

Q.8 A certain sum was lent for 3 years at  $5\%$  per annum, compound interest. If the interest for the third year is ₹ 21 more than that for the second year, then the same sum will amount to what in  $2\frac{2}{5}$  year at double the earlier rate, interest compounded yearly? (nearest to one ₹)

Question ID : 16794319637

Ans  1. ₹ 10176

2. ₹ 10076

3. ₹ 10067

4. ₹ 10167

Q.9 There are three positive numbers. One-third of average of all the three numbers is 8 less than the greatest number of the three numbers. The average of lowest and the second lowest number is 8. The greatest number is:

Question ID : 16794319636

Ans  1. 9

2. 10

3. 11

4. 13

Q.10 ABCD is a quadrilateral in which  $AB = 9$  cm,  $BC = 40$  cm,  $CD = 28$  cm, and  $AD = 15$  cm. If  $AC = 41$  cm, then the area (in  $\text{cm}^2$ ) of the quadrilateral is:

Question ID : 16794319640

Ans  1. 390

2. 270

3. 282

4. 306

Q.11 Working together A and B can complete a work in 5 days. If A had worked twice as fast the work would have been completed in 4 days. A starts the work with his normal capacity and leaves after 5 days. The remaining work will be completed by B in:

Question ID : 16794319645

Ans  1. 10 days

2. 8 days

3. 4 days

4. 5 days

Q.12 One year ago, the ratio of salaries of A and B was  $4 : 5$ . The ratio of their individual salaries of last year and present year are  $3 : 4$  and  $2 : 5$  respectively. If their total salary for the present year is ₹ 256800, then what is the present salary of B?

Question ID : 16794319639

Ans  1. ₹ 157600

2. ₹ 180000

3. ₹ 172000

4. ₹ 176800

Q.13 Two numbers are such that their mean proportional is 6 and third proportional is  $20\frac{1}{4}$ . What is the difference between the numbers?

Question ID : 16794319638

Ans



- 1. 4
- 2. 3
- 3. 2
- 4. 5

**Q.14** A shopkeeper offers discounts on the marked price on the bases of the number of articles purchased. He gives 10% discount when 5 articles are purchased and  $12\frac{1}{2}\%$  discount when 8 articles are purchased. If the profit in both cases is equal, then an article is marked at what percent above the cost price?

Question ID : 16794319635

- Ans**
- 1. 18%
  - 2. 12%
  - 3. 20%
  - 4. 15%

**Q.15** Ravi rowed a certain distance downstream in  $7\frac{1}{2}$  hours while it took him  $12\frac{1}{2}$  hours to row the same distance upstream. To make the two-way journey in still water, how many hours will it take him?

Question ID : 16794319643

- Ans**
- 1. 20
  - 2.  $18\frac{3}{4}$
  - 3.  $18\frac{1}{2}$
  - 4. 18

**Q.16** The radius and height of a cone are in the ratio 4:3. If the area of the base is  $154\text{ cm}^2$ , then its curved surface area (in  $\text{cm}^2$ ) will be: (Take  $\pi = \frac{22}{7}$ )

Question ID : 16794319641

- Ans**
- 1. 186.8
  - 2. 192.5
  - 3. 198.2
  - 4. 183.6

**Q.17** The value of  $\frac{(7\frac{3}{4}\text{ of } \frac{5}{31}) \div (15\frac{1}{3}\text{ of } \frac{2}{23}) \times 1\frac{1}{3}}{1\frac{2}{3} + [16\frac{1}{2} - \{1\frac{1}{10} \times (3\frac{1}{3} + 5)\}]}$  is:

Question ID : 16794319630

- Ans**
- 1.  $\frac{4}{9}$
  - 2.  $\frac{5}{144}$
  - 3.  $\frac{5}{9}$
  - 4.  $\frac{5}{36}$

**Q.18** 3 men and 8 women together can do a piece of work in 16 days whereas 6 men and 7 women can do it in  $12\frac{1}{2}$  days. How many women should assist 14 men to complete the same work in 8 days?

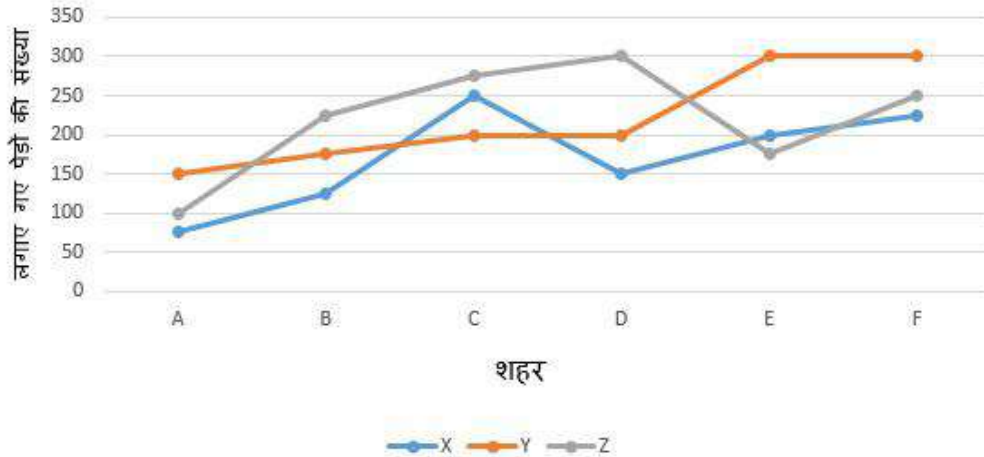
Question ID : 16794319644

- Ans**
- 1. 6
  - 2. 3
  - 3. 5
  - 4. 4

Comprehension:

निम्नलिखित तालिका वर्ष 2016 और 2017 के लिए कंपनी 'एक्सवार्डजेड' की बिक्री के बारे में जानकारी दिखाता है।

एनजीओएस द्वारा लगाए गए पेड़ों की संख्या वर्ष 2016 में 6 शहरों में



SubQuestion No : 19

Q.1 X द्वारा शहर A और D में लगाए गए कुल पेड़ों की संख्या, Y द्वारा शहर A और F में लगाए गए कुल पेड़ों की संख्या, और Z द्वारा शहर B और D में लगाए गए पेड़ों की कुल संख्या इनके बीच क्या अनुपात है?

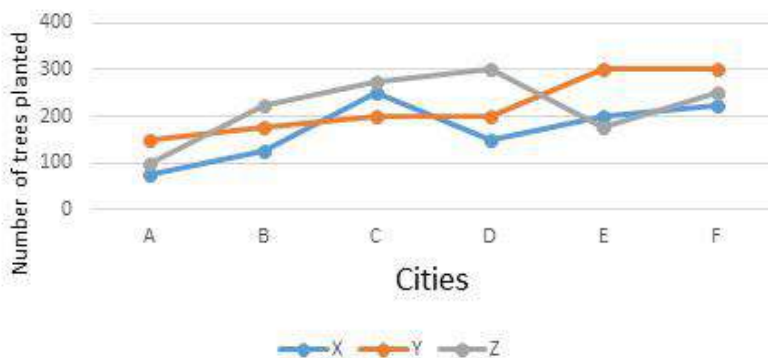
Question ID : 16794319647

- Ans
- 1. 2 : 3 : 7
  - 2. 3 : 6 : 7
  - 3. 5 : 6 : 7
  - 4. 4 : 6 : 9

Comprehension:

Study the following graph and answer the two questions based on it.

Number of trees planted by NGOS in 6 cities in the year 2016



SubQuestion No : 20

Q.2 The difference between the total number of trees planted by 'X' and 'Y' in all the six cities is approximately what percent of total number of trees planted by 'Z' in cities B, E and D?

Question ID : 16794319648

- Ans
- 1. 38%
  - 2. 34%
  - 3. 43%
  - 4. 41%

Section : General English

Q.1 Choose the most appropriate article to complete the sentence.

Question ID : 16794319656

Vysakh was found to possess \_\_\_\_\_ required qualification for the job.

- Ans
- 1. an
  - 2. No article
  - 3. the
  - 4. a

Q.2 Choose the most appropriate phrase to complete the sentence.

Question ID : 16794319659

If my husband \_\_\_\_\_ us a big dinner tonight, I would have suggested that we go to that nice Italian restaurant.

- Ans
- 1. wasn't making
  - 2. hadn't made
  - 3. hadn't been making
  - 4. wouldn't be making

Q.3 Choose the sentence that is grammatically well formed.

Question ID : 16794319663

- Ans
- 1. If you want to retire early, then you start saving now.
  - 2. If you want to retire early, when you start saving now.
  - 3. You want to retire early, if you start saving now.
  - 4. If you want to retire early, you need to start now

Q.4 Choose the option that is opposite in meaning of the given word.

Question ID : 16794319652

PROLONG





- Ans
- 1. Weaken
  - 2. Shorten
  - 3. Contract

 4. Compress

Q.5 Choose the most appropriate option to complete the sentence.

Question ID : 16794319657





The man was accused \_\_\_\_\_ stealing his employer's laptop.

- Ans
-  1. on
  -  2. with
  -  3. for
  -  4. of

Q.6 Choose the most appropriate phrase to complete the sentence.

Question ID : 16794319661





I persuaded the boys \_\_\_\_\_ the room before the teacher entered.

- Ans
-  1. leave
  -  2. to leave
  -  3. left
  -  4. leaving

Q.7 Choose the option that best captures the meaning of the underlined phrase.

Question ID : 16794319655





My car broke down on my way to the meeting.

- Ans
-  1. stopped working
  -  2. ran out of petrol
  -  3. met with an accident
  -  4. started crying

Q.8 Choose the word/phrase that best completes the sentence.

Question ID : 16794319654

No one expects you to learn the \_\_\_\_\_ of the trade on your first day at work.

- Ans
-  1. ins and outs
  -  2. out and out
  -  3. in and out
  -  4. out and about

Q.9 Choose the option that is opposite in meaning of the given word.

Question ID : 16794319651

TRIVIAL

- Ans
-  1. Significant
  -  2. Minor
  -  3. Useful
  -  4. Enormous

Q.10 Choose the option that comes closest in meaning to the given word.

Question ID : 16794319649

CONFINE

- Ans
-  1. Impose

- 2. Detain
- 3. Imprison
- 4. Obstruct

Q.11 Choose the most appropriate phrase to complete the sentence.

Question ID : 16794319660

Ravi wondered \_\_\_\_\_ giving her odd looks.

- Ans
- 1. they why were
  - 2. why were they
  - 3. why they were
  - 4. they were why

Q.12 Choose the word/phrase that best completes the sentence.

Question ID : 16794319653

He suspected a double meaning in her words, but \_\_\_\_\_ the thought.

- Ans
- 1. discharged
  - 2. distanced
  - 3. dismissed
  - 4. dissolved

Q.13 Choose the most appropriate option to complete the sentence.

Question ID : 16794319658

Double glazed windows have two panes of glasses and air \_\_\_\_\_ between them, preventing escape of heat

- Ans
- 1. was being trapped
  - 2. was trapped
  - 3. had trapped
  - 4. is trapped

Q.14 Choose the option that comes closest in meaning to the given word.

Question ID : 16794319650

BRISK

- Ans
- 1. Slow
  - 2. Hurried
  - 3. Clumsy
  - 4. Anxious

Q.15 Choose the sentence that is grammatically well formed.

Question ID : 16794319662

- Ans
- 1. What do you think believes the story that man is?
  - 2. Who do you think believes the story who the man stole the painting?
  - 3. Who do you think believes the story that the man stole the painting?
  - 4. Who do you think believes the story that stole the painting?

Comprehension:

Read the passage carefully and answer the questions that follow.

In Japan, people often refer to traffic lights as being blue in colour. And this is a bit odd, because the traffic signal indicating 'go' in Japan is just as green as it is anywhere else in the world. So why is the colour getting lost in translation? This visual conundrum has its roots in the history of language.

Blue and green are similar in hue. They sit next to each other in a rainbow, which means that, to our eyes, light can blend smoothly from blue to green or vice-versa, without going past any other colour in between. Before the modern period, Japanese had just one word, *ao*, for both blue and green. The wall that divides these colours hadn't been erected as yet. As the language evolved, in the Heian period around the year 1000, something interesting happened. A new word popped into being – *midori* – and it described a sort of greenish end of blue. *Midori* was a shade of *ao*, it wasn't really a new colour in its own right.

One of the first fences in this colour continuum came from an unlikely place – crayons. In 1917, the first crayons were imported into Japan, and they brought with them a way of dividing a seamless visual spread into neat, discrete chunks (colours). There were different crayons for green (*midori*) and blue (*ao*), and children started to adopt these names.

SubQuestion No : 16

Q.1  
6 The signal for 'go' in traffic in Japan is the colour:

Question ID : 16794319665

- Ans
- 1. Bluish green
  - 2. Greenish Blue
  - 3. Green
  - 4. Blue

Comprehension:

Read the passage carefully and answer the questions that follow.

In Japan, people often refer to traffic lights as being blue in colour. And this is a bit odd, because the traffic signal indicating 'go' in Japan is just as green as it is anywhere else in the world. So why is the colour getting lost in translation? This visual conundrum has its roots in the history of language.

Blue and green are similar in hue. They sit next to each other in a rainbow, which means that, to our eyes, light can blend smoothly from blue to green or vice-versa, without going past any other colour in between. Before the modern period, Japanese had just one word, *ao*, for both blue and green. The wall that divides these colours hadn't been erected as yet. As the language evolved, in the Heian period around the year 1000, something interesting happened. A new word popped into being – *midori* – and it described a sort of greenish end of blue. *Midori* was a shade of *ao*, it wasn't really a new colour in its own right.

One of the first fences in this colour continuum came from an unlikely place – crayons. In 1917, the first crayons were imported into Japan, and they brought with them a way of dividing a seamless visual spread into neat, discrete chunks (colours). There were different crayons for green (*midori*) and blue (*ao*), and children started to adopt these names.

SubQuestion No : 17

Q.1  
7 In the sentence 'The wall that divides these colours hadn't been erected as yet', what does 'the wall' refer to?

Question ID : 16794319668

- Ans
- 1. Crayons
  - 2. Fences
  - 3. Vision
  - 4. Words

Comprehension:

Read the passage carefully and answer the questions that follow.

In Japan, people often refer to traffic lights as being blue in colour. And this is a bit odd, because the traffic signal indicating 'go' in Japan is just as green as it is anywhere else in the world. So why is the colour getting lost in translation? This visual conundrum has its roots in the history of language.

Blue and green are similar in hue. They sit next to each other in a rainbow, which means that, to our eyes, light can blend smoothly from blue to green or vice-versa, without going past any other colour in between. Before the modern period, Japanese had just one word, *ao*, for both blue and green. The wall that divides these colours hadn't been erected as yet. As the language evolved, in the Heian period around the year 1000, something interesting happened. A new word popped into being – *midori* – and it described a sort of greenish end of blue. *Midori* was a shade of *ao*, it wasn't really a new colour in its own right.

One of the first fences in this colour continuum came from an unlikely place – crayons. In 1917, the first crayons were imported into Japan, and they brought with them a way of dividing a seamless visual spread into neat, discrete chunks (colours). There were different crayons for green (*midori*) and blue (*ao*), and children started to adopt these names.


SubQuestion No : 18


Q.1  
8 Why was green taken for blue in Japan in early times?

Question ID : 16794319667

Ans  1.

In rainbows in Japanese, blue and green blended into each other

 2. They did not have crayons in that period

 3. They have two words 'midori' and 'ao'

 4.

They had only one word 'ao' for blue and green

Comprehension:



Read the passage carefully and answer the questions that follow.

In Japan, people often refer to traffic lights as being blue in colour. And this is a bit odd, because the traffic signal indicating 'go' in Japan is just as green as it is anywhere else in the world. So why is the colour getting lost in translation? This visual conundrum has its roots in the history of language.

Blue and green are similar in hue. They sit next to each other in a rainbow, which means that, to our eyes, light can blend smoothly from blue to green or vice-versa, without going past any other colour in between. Before the modern period, Japanese had just one word, *ao*, for both blue and green. The wall that divides these colours hadn't been erected as yet. As the language evolved, in the Heian period around the year 1000, something interesting happened. A new word popped into being – *midori* – and it described a sort of greenish end of blue. *Midori* was a shade of *ao*, it wasn't really a new colour in its own right.

One of the first fences in this colour continuum came from an unlikely place – crayons. In 1917, the first crayons were imported into Japan, and they brought with them a way of dividing a seamless visual spread into neat, discrete chunks (colours). There were different crayons for green (*midori*) and blue (*ao*), and children started to adopt these names.

SubQuestion No : 19

Q.1  
9 Two distinct colours 'midori' (green) and 'ao' (blue) came into existence in:

Question ID : 16794319669

- Ans
- 1. the Heian Period
  - 2. pre modern Japan
  - 3. the pre historic period
  - 4. 1917 with crayons

Comprehension:

Read the passage carefully and answer the questions that follow.

In Japan, people often refer to traffic lights as being blue in colour. And this is a bit odd, because the traffic signal indicating 'go' in Japan is just as green as it is anywhere else in the world. So why is the colour getting lost in translation? This visual conundrum has its roots in the history of language.

Blue and green are similar in hue. They sit next to each other in a rainbow, which means that, to our eyes, light can blend smoothly from blue to green or vice-versa, without going past any other colour in between. Before the modern period, Japanese had just one word, *ao*, for both blue and green. The wall that divides these colours hadn't been erected as yet. As the language evolved, in the Heian period around the year 1000, something interesting happened. A new word popped into being – *midori* – and it described a sort of greenish end of blue. *Midori* was a shade of *ao*, it wasn't really a new colour in its own right.

One of the first fences in this colour continuum came from an unlikely place – crayons. In 1917, the first crayons were imported into Japan, and they brought with them a way of dividing a seamless visual spread into neat, discrete chunks (colours). There were different crayons for green (*midori*) and blue (*ao*), and children started to adopt these names.

SubQuestion No : 20

Q.2 The word 'conundrum' means:

Question ID : 16794319666

- Ans
- 1. spread
  - 2. spectrum
  - 3. confusion
  - 4. blend

Section : General Hindi

Comprehension:

नीचे दिये गए गद्यांश को पढ़कर पूछे गये प्रश्नों के उत्तर दीजिए।

छायावादी काव्य में सामाजिकता और वैयक्तिकता दोनों का स्वर था। कालांतर में वैयक्तिक अनुभूति का आग्रह रखने वाले और सामाजिकता का आग्रह रखने वाले कवियों का अंतर स्पष्ट हुआ। यहाँ यह ध्यान रखना चाहिए कि स्वाधीनता की चेतना दोनों प्रकार के कवियों में है। यहाँ तक कि 'हालावाद' भी एक प्रकार की 'विरोध-कविता' (पोयट्री आफ प्रोटेस्ट) है। सामाजिकता का आग्रह रखने वाले कवियों में से अधिकांश समाजवादी विचारधारा से जुड़े। इससे 1936 ई. में प्रगतिशील लेखक संघ की स्थापना के बाद प्रगतिवादी कविता का प्रवर्तन हुआ।

SubQuestion No : 1

Q.1 सामाजिकता का आग्रह रखने वाले कवि किससे जुड़े?

Question ID : 16794319674

- Ans
- 1. कलावादी विचारधारा
  - 2. समाजवादी विचारधारा
  - 3. मनोविश्लेषणवादी विचारधारा
  - 4. सौंदर्यवादी विचारधारा

Comprehension:

नीचे दिये गए गद्यांश को पढ़कर पूछे गये प्रश्नों के उत्तर दीजिए।

छायावादी काव्य में सामाजिकता और वैयक्तिकता दोनों का स्वर था। कालांतर में वैयक्तिक अनुभूति का आग्रह रखने वाले और सामाजिकता का आग्रह रखने वाले कवियों का अंतर स्पष्ट हुआ। यहाँ यह ध्यान रखना चाहिए कि स्वाधीनता की चेतना दोनों प्रकार के कवियों में है। यहाँ तक कि 'हालावाद' भी एक प्रकार की 'विरोध-कविता' (पोयट्री आफ प्रोटेस्ट) है। सामाजिकता का आग्रह रखने वाले कवियों में से अधिकांश समाजवादी विचारधारा से जुड़े। इससे 1936 ई. में प्रगतिशील लेखक संघ की स्थापना के बाद प्रगतिवादी कविता का प्रवर्तन हुआ।

SubQuestion No : 2

Q.2 प्रगतिवादी कविता का प्रवर्तन कब हुआ?

Question ID : 16794319675

- Ans
- 1. 1956
  - 2. 1946
  - 3. 1926
  - 4. 1936

Comprehension:

नीचे दिये गए गद्यांश को पढ़कर पूछे गये प्रश्नों के उत्तर दीजिए।

छायावादी काव्य में सामाजिकता और वैयक्तिकता दोनों का स्वर था। कालांतर में वैयक्तिक अनुभूति का आग्रह रखने वाले और सामाजिकता का आग्रह रखने वाले कवियों का अंतर स्पष्ट हुआ। यहाँ यह ध्यान रखना चाहिए कि स्वाधीनता की चेतना दोनों प्रकार के कवियों में है। यहाँ तक कि 'हालावाद' भी एक प्रकार की 'विरोध-कविता' (पोयट्री आफ प्रोटेस्ट) है। सामाजिकता का आग्रह रखने वाले कवियों में से अधिकांश समाजवादी विचारधारा से जुड़े। इससे 1936 ई. में प्रगतिशील लेखक संघ की स्थापना के बाद प्रगतिवादी कविता का प्रवर्तन हुआ।

SubQuestion No : 3

Q.3

छायावादी काव्य में किसका स्वर था?

- Ans
- 1. सामाजिकता और वैयक्तिकता दोनों
  - 2. केवल सामाजिकता
  - 3. कायरता
  - 4. केवल वैयक्तिकता

Comprehension:

नीचे दिये गए गद्यांश को पढ़कर पूछे गये प्रश्नों के उत्तर दीजिए।

छायावादी काव्य में सामाजिकता और वैयक्तिकता दोनों का स्वर था। कालांतर में वैयक्तिक अनुभूति का आग्रह रखने वाले और सामाजिकता का आग्रह रखने वाले कवियों का अंतर स्पष्ट हुआ। यहाँ यह ध्यान रखना चाहिए कि स्वाधीनता की चेतना दोनों प्रकार के कवियों में है। यहाँ तक कि 'हालावाद' भी एक प्रकार की 'विरोध-कविता' (पोयट्री आफ प्रोटेस्ट) है। सामाजिकता का आग्रह रखने वाले कवियों में से अधिकांश समाजवादी विचारधारा से जुड़े। इससे 1936 ई. में प्रगतिशील लेखक संघ की स्थापना के बाद प्रगतिवादी कविता का प्रवर्तन हुआ।

SubQuestion No : 4

Q.4 दोनों प्रकार के कवियों में है:

Question ID : 16794319672

- Ans
- 1. स्वाधीनता की चेतना
  - 2. धार्मिक चेतना
  - 3. प्रयोगवादी चेतना
  - 4. राजनीतिक चेतना

Comprehension:

नीचे दिये गए गद्यांश को पढ़कर पूछे गये प्रश्नों के उत्तर दीजिए।

छायावादी काव्य में सामाजिकता और वैयक्तिकता दोनों का स्वर था। कालांतर में वैयक्तिक अनुभूति का आग्रह रखने वाले और सामाजिकता का आग्रह रखने वाले कवियों का अंतर स्पष्ट हुआ। यहाँ यह ध्यान रखना चाहिए कि स्वाधीनता की चेतना दोनों प्रकार के कवियों में है। यहाँ तक कि 'हालावाद' भी एक प्रकार की 'विरोध-कविता' (पोयट्री आफ प्रोटेस्ट) है। सामाजिकता का आग्रह रखने वाले कवियों में से अधिकांश समाजवादी विचारधारा से जुड़े। इससे 1936 ई. में प्रगतिशील लेखक संघ की स्थापना के बाद प्रगतिवादी कविता का प्रवर्तन हुआ।

SubQuestion No : 5

Q.5 'पोयट्री आफ प्रोटेस्ट' किसे कहा गया है?

Question ID : 16794319673

- Ans
- 1. रहस्यवाद
  - 2. हालावाद
  - 3. प्रयोगवाद
  - 4. नयी कविता

Q.6 'भलाई' का विलोम होगा-

Question ID : 16794319687

- Ans
- 1. बुराई
  - 2. चतुराई
  - 3. अच्छाई
  - 4. धृष्टता

Q.7 अन्य पुरुष सर्वनाम है-

Question ID : 16794319679

- Ans
- 1. कुछ
  - 2. आप
  - 3. यह
  - 4. हम

Q.8 'द्रव्य' का पर्यायवाची नहीं है-

Question ID : 16794319686

- Ans
- 1. कंचन
  - 2. संपत्ति
  - 3. धन
  - 4. सम्पदा

Q.9 निम्नलिखित में जातिवाचक संज्ञा कौन सी है?

Question ID : 16794319678

- Ans
- 1. पुस्तक
  - 2. होली
  - 3. चढ़ाई
  - 4. जुलाई

Q.10 'तेजोराशि' का संधि विच्छेद होगा-

Question ID : 16794319681

- Ans
- 1. तेजा + राशि
  - 2. तेजः + राशि
  - 3. तेजो + राशि
  - 4. तेज + राशि

Q.11 निम्नलिखित में कौन सा शब्द अव्यय है?

Question ID : 16794319680

- Ans
- 1. काला
  - 2. भविष्य
  - 3. परन्तु
  - 4. बाहरी

Q.12 'दो नदियों के मिलन का स्थान' के लिए एक शब्द होगा-

Question ID : 16794319688

- Ans
- 1. उदगम
  - 2. संगम
  - 3. द्वीप
  - 4. प्रयाग

Q.13 'यह लोग क्या कहते हैं?' वाक्य में अशुद्ध अंश है-

Question ID : 16794319690

- Ans
- 1. कहते
  - 2. हैं?
  - 3. क्या
  - 4. यह लोग

Q.14 'अग्रिम' में प्रत्यय है-

Question ID : 16794319685

- Ans
- 1. इम
  - 2. ग्रिम
  - 3. अ
  - 4. म

Q.15 'दिनोंदिन' में समास है-

Question ID : 16794319682

- Ans
- 1. तत्पुरुष
  - 2. कर्मधारय
  - 3. बहुब्रीहि
  - 4. अव्ययीभाव

Q.16 निम्नलिखित में तद्भव शब्द कौन सा है?

Question ID : 16794319677

- Ans
- 1. वाटिका
  - 2. वाद्य
  - 3. वार्ता
  - 4. बाग

Q.17 निम्नलिखित में कौन सा शब्द स्त्रीलिंग है?

Question ID : 16794319683

- Ans
- 1. आश्वासन
  - 2. आश्रय
  - 3. उपेक्षा
  - 4. आसन

Q.18 'अभिलाषा' में उपसर्ग है-

Question ID : 16794319684

- Ans
- 1. अभि
  - 2. आशा
  - 3. आ
  - 4. अ

Q.19 निम्नलिखित में शुद्ध वर्तनी वाला शब्द है-

Question ID : 16794319689

- Ans
- 1. पुष्टि
  - 2. पुस्टी
  - 3. पुष्ठी
  - 4. पुस्टि

Q.20 निम्नलिखित में कौन सा शब्द तत्सम है?

Question ID : 16794319676

- Ans
- 1. मिट्टी
  - 2. मुट्टी
  - 3. मिठाई
  - 4. मस्तक

Section : Subject Related

Q.1 The drain theory had an important role in the rise of economic nationalism in colonial India. Which statement is FALSE about the theory?

Question ID : 16794319705

- Ans
- 1. The theory questioned the very economic exploitation by Indian capitalists
  - 2. The drain, Naoroji declared, was the basic cause of India's poverty and the fundamental evil of British rule in India.
  - 3. It was in May 1867 that Dadabhai Naoroji put forward the idea that Britain was draining and 'bleeding' India.
  - 4. The acknowledged high-priest of the drain theory was Dadabhai Naoroji

Q.2 The declaration of 'the rights of man and of citizens' by the French Constituent Assembly on \_\_\_\_\_, is one of the most significant events of the French Revolution.

Question ID : 16794319701

- Ans
- 1. 26 August 1789

2. 21 December 1791

3. 21 June 1789

4. 14 July 1789

Q.3 Which of the following is NOT correct about the All-India Kisan Congress?

Question ID : 16794319696

Ans  1.

The first session was greeted in person by Mahatma Gandhi.

2.

The Conference resolved to bring out a Kisan Manifesto and a periodic bulletin edited by Indulal Yagnik.

3.

Swami Sahajanand and N.G. Ranga were elected the President and the General Secretary respectively.

4.

It was established in Lucknow in April 1936 which later changed its name to the All-India Kisan Sabha.

Q.4 Who was the president of the Indian National Congress during independence in 1947?

Question ID : 16794319709

Ans  1. J.B. Kriplani

2. Jawaharlal Nehru

3. Rajendra Prasad

4. Moulana Abul Kalam Azad

Q.5 Which of the following options is true of the revolt of 1857?

Question ID : 16794319702

Ans  1.

On 11 May 1857, three Indian regiments shot their officers, broke open the prisons and released their companions

2.

On 10 May 1857, the sepoys at Meerut who refused to use the cartridges, were sentenced to ten years' imprisonment

3. On 12 May 1857, they marched off to Delhi

4.

On 29 March 1857, Mangal Pandey fired on his officers at Barrackpore

Q.6 Steam engine played a crucial role in the Industrial Revolution. Which one out of the following is INCORRECT about the steam engine?

Question ID : 16794319691

Ans  1.

Pre modern design of steam engine was prepared by Thomas Papin.

2.

He entered into a long and profitable partnership with industrialist Matthew Boulton.

3.

By 1769, James Watt had a patent for his improved design.

4.

The design of steam engine was prepared by Thomas Newcomen.

Q.7 In 1804, \_\_\_\_\_ pioneered the first steam powered locomotive on an industrial rail line in southern Wales.

Question ID : 16794319693

Ans  1. Edmund Cartwright

2. James Watt

3. Richard Trevithick

4. George Stephenson

Q.8 Which of the following statements is/are correct about the partition of Bengal, 1905?

Question ID : 16794319706

Ans  1.



The day partition took effect - 16 October, 1905 - was declared a day of mourning throughout Bengal.

2.

The decision to partition Bengal was announced on 19 July, 1905.

3. All of the given options

4.

On September 1, the Government announced that partition was to be effected on 16 October 1905.

Q.9 Mahatma Gandhi began fast unto death onwards 20 September 1932 because of \_\_\_\_\_.

Question ID : 16794319707

Ans  1. the Poona Pact

2. failure of the second round table

3.

re-launching of Civil Disobedience Movement

4. the Communal Award

Q.10 Early 1920s was a crucial decade for the rise of industrial organisation in colonial India. Which of the following statement is/are FALSE?

Question ID : 16794319695

Ans  1.

Various capitalists like G.D. Birla and Purshottamdas Thakurdas to establish a national level organization of Indian commercial, industrial and financial interests to be able to effectively lobby with the colonial government.

2. None of the given options

3.

This effort culminated in the formation of the Federation of Indian Chambers of Commerce and Industry (FICCI) in 1927, with a large and rapidly increasing representation from all parts of India.

4.

The FICCI was soon recognized by the British government as well as the Indian public in general, as representing the dominant opinion as well as the overall consensus within the Indian capitalist class.

Q.11 The New Deal policy was introduced in USA by \_\_\_\_\_ for various reforms after economic depression of 1929.

Question ID : 16794319694

Ans  1. Herbert Hoover

2. Calvin Coolidge

3. Harry S. Truman

4. Franklin D. Roosevelt

Q.12 Which of the following is FALSE about the Indian National Congress' Lahore session held in December 1929?

Question ID : 16794319710

Ans  1.

The session adopted the non-violent methods of Non-cooperation and Civil Disobedience for the goal of Dominion Status

2.

The session passed the resolution of Purna Swarajya

3.

Jawaharlal Nehru was the president of session

4. None of the given options

Q.13 When did Lord Canning proclaim peace and finally suppress the 1857 revolt?

Question ID : 16794319704

Ans  1. 1 July 1858

2. 5 July 1858

3. 30 June 1858

4. 23 June 1858

Q.14 'Bandi Jivan', which served as a textbook to the revolutionary movement, was written by \_\_\_\_\_.

Question ID : 16794319708

Ans  1. Ramprasad Bismil

2. Jogesh Chatterjee

3. Sachindranath Sanyal

4. Rajendra Lahiri

Q.15 Which pair is correctly matched with regards to French Revolution, 1789?

Question ID : 16794319700

Ans  1. 15 July 1789: Dismissal of Necker

2. 1 May 1789: Estates General assembles

3.

15 June 1789: Adoption of title of "National Assembly" by the Third Estate

4.

2 November 1789: Nationalisation of the property of the church

Q.16 Why did Industrial revolution start from Britain?

Question ID : 16794319692

Ans  1.

Occurrence of the Agricultural Revolution of the eighteenth century.

2. All of the given options.

3.

Britain had a ready supply of capital for investment in the new industrial machines and the factories.

4.

Britain had a rich supply of the important mineral resources such as coal and iron ore.

Q.17 The fundamental fiscal problem in France was structural. Which statement about it is INCORRECT?

Question ID : 16794319699

Ans  1.

Neither the clergy, who owned about 10 percent of the land, nor the nobility, who owned between 25 to 30 percent of the land, paid any tax.

2.

In many areas, tax farmers collected the taxes and forwarded only part of the money to the government.

3.

Louise XVI first appointed Necker, then Turgot as the finance minister to improve the financial condition of France

4.

War of the Austrian Succession (1740-48) and the Seven Year's War (1756-63) helped to bankrupt the state

Q.18 Large parts of East Bengal were engulfed by agrarian unrest during the 1870s and early 1880s. Which one of the following is NOT true with regards to the unrest?

Question ID : 16794319697

Ans  1.

In May 1873, an agrarian league or combination was formed in Yusufshahi Parganah in Pabna district to accept the demands of the zamindars.

2.

The unrest was caused by the efforts of the zamindars to inflate rent beyond legal limits.

3.

The unrest was caused by the efforts of the zamindars to prevent the tenants from acquiring occupancy rights under Act X of 1859.

4.

The zamindars tried to achieve through illegal coercive methods such as forced eviction and seizure of crops and cattle as well as by dragging the tenants into costly litigation in the courts.

Q.19 Which East India Company official remarked about the contribution of Indian rulers that these rulers and chiefs "acted as the breakwaters of the storm which would have otherwise swept us in one great wave."

Question ID : 16794319703

Ans  1. Lord Disraeli

2. Henry John Temple

3. John Russell

4. Lord Canning

Q.20 Who argued that the 'general will' should govern society?

Question ID : 16794319698

Ans  1. Rousseau

2. John Lock

3. Voltaire

4. Montesquieu

Section : Subject Related

Q.1 In the 1937 annual session of Muslim League held in Lucknow, Jinnah declared that there were three entities in India:

Question ID : 16794319713

Ans  1.

The Hindus, the Muslims and other religious minorities

2.

The Hindu, The British, the religious minorities

3.

The Congress, the Muslim League and Dr. Ambedkar's followers

4.

The Congress, The British, and the Muslim League

Q.2 There are six principal organs of the United Nations. Which one is NOT one of the six principal organs?

Question ID : 16794319729

Ans  1.

The United Nations Children's Fund (UNICEF)

2. The Trusteeship Council

3. The Secretariat

4. The General Assembly

Q.3 Which one of the following measures was NOT adopted to improve the Italian economy by Mussolini?

Question ID : 16794319724

Ans  1.

He set up councils or corporations for each industry with representatives of workers, employers and nominees of the Fascist party to improve production

2.

He fixed 14 hours a day as working time in factories

3.

The government imposed heavy taxes on the rich

4.

He compelled the factory owners to contribute towards the life insurance of their employees

Q.4 Who gave the famous motto "the socialist movement means everything, the end means nothing," which recurs frequently in Liberal Socialism?

Question ID : 16794319720

Ans  1. Eduard Bernstein

2. Karl Marx

3. Benedetto Croce

4. Rosselli

Q.5 The chaotic insurrectionary events of 1848 begged for a coherent interpretation, which Marx and Engels intended to supply. Which is/are correct about their provocative theory?

Question ID : 16794319719

Ans  1.

But ultimately the revolution was bound to succeed in overthrowing the existing social order and establishing a classless society

2.

The proletariat was now rising to overthrow the currently prevailing dominance of the bourgeoisie

3.

The state, invariably an instrument of the ruling class, would doubtless attempt to suppress this immense uprising of workers

4. All of the given options

Q.6 Which of the following statements is FALSE about the First World War in its initial phase?

Question ID : 16794319725

Ans  1.

Germany's invasion on Belgium ended the neutrality of France

2.

The British position was unclear as the British Government was divided on the issue of going to war

3. Belgium was a neutral country

4.

Italy remained neutral on the ground that Germany was not fighting a defensive war

Q.7 Which one out of the following statements is INCORRECT about the idea of Iqbal's Muslim state in colonial period?

Question ID : 16794319711

Ans  1.

He voiced his idea in December 1930 at the All India Muslim League

2.

He initially called for a state based on the territorial amalgamation of the Punjab, the North-Western provinces, Sind and Balochistan.

3.

His idea of the Muslim state was one that was within India and restricted to Muslim majority areas in the north-western provinces.

4. Iqbal declared Indian Muslims as a 'nation'

Q.8 Hitler's decision to intervene in the Spanish Civil war in 1936 was NOT as opportunistic because:

Question ID : 16794319722

Ans  1.

He wanted an alliance with Spain in future war politics

2.

He was convinced that a Bolshevik Spain would be a strategic threat to Germany from the West

3.

He wanted to annex of Spain in German empire

4. All of the given options

Q.9 Which of the following did NOT play a crucial role in rise of Nazism in Germany?

Question ID : 16794319721

Ans  1. Anti-Aryan propaganda

2. Treaty of Versailles

3. Growing fear of Communism

4.

The core of the Nazis, the disillusioned generation that came of age in the 1920s, like Strasser, Ernst Rohm, Hess and Hitler, belonging to the trench generation

Q.10 The Bolsheviks' victory was not complete as long as the Winter Palace remained in the hands of the Provisional Government because:

Question ID : 16794319717

Ans  1. It was the office of Kerensky government

2.

It was the main centre of the Soviet of Peasants

3. It was a chief treasury office

4.

It was main office of the Soviet of Petrograd

Q.11 Arrange the following Governor Generals of India in ascending order.

Question ID : 16794319714

Ans  1.

Lord Ellenborough, Lord Auckland, Lord Amherst, Lord William Bentinck

2.

Lord William Bentinck, Lord Auckland, Lord Ellenborough, Lord Amherst

3.

Lord Amherst, Lord William Bentinck, Lord Auckland, Lord Ellenborough

4.

Lord Auckland, Lord Ellenborough, Lord Amherst, Lord William Bentinck

Q.12 Which of the following pairs of events and dates is mismatched about the Second World War?

Question ID : 16794319728

Ans  1.

19 July 1940: Hitler offers Britain a peace settlement

2. 10 June 1940: Norway surrenders

3. 29 June 1940: France surrenders

4.

27 September 1939: Warsaw falls and Poland surrenders

Q.13 The headquarters of the United Nations was previously located at \_\_\_\_\_, which later shifted to New York.

Question ID : 16794319730

Ans  1. Vienna

2. Geneva

3. Paris

4. London

Q.14 Which countries formed the Triple Alliance in 1882?

Question ID : 16794319726

Ans  1. Germany, Japan, Italy

2. Germany, Austria, Hungary

3. Germany, Japan, Russia

4. Germany, Austria, Italy

Q.15 The thoughts of \_\_\_\_\_ were published together in a treatise entitled *The German Ideology*.

Question ID : 16794319718

Ans  1. Friedrich Engels

2. David Ricardo

3. Karl Marx

4. Martin Luther

Q.16 The Provisional Government after the February 1917 revolution in Russia failed to spread unrest among peasants because:

Question ID : 16794319716

Ans

1.

Peasants realised that the Provisional Government was not serious about solving their problems

2.

The Provisional Government was run by the less popular group, the Mensheviks

3. All of the given options

4.

The peasants' revolts were increasing day by day

Q.17 Lenin's 'Letters from Afar' were written from \_\_\_\_\_ in March 1917.

Question ID : 16794319715

Ans  1. France

2. Germany

3. Switzerland

4. Vienna

Q.18 'Which of the following is NOT a feature of the Dascism led by Mussolini in Italy?'

Question ID : 16794319723

Ans  1. The deification of the State and the Ruler

2. Slow measures to establish democracy

3. Absolute sovereignty of the State

4. Insistence on the duties of the citizens

Q.19 Italy entered in the Second World War in \_\_\_\_\_.

Question ID : 16794319727

Ans  1. 10 June, 1940

2. 1 June, 1940

3. 1 September, 1939

4. 3 September, 1939

Q.20 Who was famous as an 'Ambassador of Hindu-Muslim Unity'?

Question ID : 16794319712

Ans  1. Sir Syed Ahmad Khan

2. Moulana Abul Kalam Aazad

3. Iqbal

4. Muhammad Ali Jinnah

Section : Subject Related

Q.1 Which of the following is not the mineral belt of India?

Question ID : 16794319749

Ans  1. Indian Ocean

2. Chotanagpur

3. Southern Region

4. Eastern Region

Q.2 Which one of the following options is the origin of River Beas?

Question ID : 16794319744

Ans  1. Rohtang Pass

2. Mansarovar

3. Rakas Lake

4. Virenag Spring

Q.3 Which of the following options has the highest percentage of the total water on earth's surface?

Question ID : 16794319741

Ans  1. Ice caps

2. Soil moisture

3. Lakes

4. Steam and Rivers

Q.4 Which of the following options of 'permanent gases of the atmosphere' is in the correct sequence according to their percentage by volume in atmosphere (highest to lowest)?

Question ID : 16794319738

Ans  1. N<sub>2</sub>, O<sub>2</sub>, CO<sub>2</sub>, Ar, He

2. N<sub>2</sub>, CO<sub>2</sub>, O<sub>2</sub>, He, Ne

3. Ar, O<sub>2</sub>, CO<sub>2</sub>, N<sub>2</sub>, Ne

4. N<sub>2</sub>, O<sub>2</sub>, Ar, CO<sub>2</sub>, He

Q.5 Which of the given options is NOT an immediate objective of the National Population Policy, announced on 15<sup>th</sup> Feb, 2000?

Question ID : 16794319748

Ans  1. Child health care

2. Healthcare infrastructure

3. Hospitalization

4. Contraception

Q.6 Which of the following states had the highest percentage production of Iron ore in 2015-16?

Question ID : 16794319750

Ans  1. Karnataka

2. Jharkhand

3. Chhattisgarh

4. Goa

Q.7 Which of the following is NOT one of the major controls of the climate of any place?

Question ID : 16794319737

Ans  1. Pressure and wind system

2. Ocean currents

3. Longitudes

4. Continentality

Q.8 With regard to the value of latitudes of important places, which of the followings is matched correctly?

Question ID : 16794319732

- |                        |             |
|------------------------|-------------|
| 1. Equator             | 1. Zero     |
| 2. Tropic of Cancer    | 2. 23° 30'N |
| 3. Tropic of Capricorn | 3. 23° 30'S |
| 4. Arctic Circle       | 4. 66° 30'S |
| 5. Antarctic Circle    | 5. 66° 30'N |

Ans  1. 1, 2 and 3 only

2. 1, 2 and 5 only

3. 1, 4 and 5 only

4. 1, 3 and 4 only

Q.9 Chronologically arrange the soil availability according to their total reporting area (from highest to lowest).

Question ID : 16794319745

Ans  1.

Red and Black soil, Laterite Soil, Mountain soil, Desert soil

2.

Black Soil, Desert soil, Laterite soil, Grey and brown soil

3.

Mountain Soil, Desert Soil, Red and Black Soil, Laterite Soil

4.

Red soil, Black soil, Mountain soil, Desert soil

Q.10 With regard to greenhouse gases, which of the following statements is true?

Question ID : 16794319739

1. The primary Green House Gases of concern today are carbon dioxide, chlorofluorocarbons, methane, nitrous oxide and ozone.
2. Ozone which absorbs ultra violet radiation in the stratosphere is very effective in absorbing terrestrial radiation when it is present in the upper troposphere.

Ans  1. 1 only

2. 2 only

3. 1 and 2 both

4. None of the given options

Q.11 With regard to the El-Nino, which of the following statements is true?

Question ID : 16794319747

1. El-Nino means Child Christ.
2. It is a warm ocean current appearing along the Peru coast, generally in December.
3. The Indian monsoon is also influenced by El-Nino.

Ans  1. 1 and 2

2. 1 and 3

3. All of the given options

4. 2 and 3

Q.12 From which of the following has the word 'Monsoon' been derived?

Question ID : 16794319746

Ans  1. Arabic

2. Latin

3. Spanish

4. German

Q.13 Which of the following bodies has the highest salinity?

Question ID : 16794319742

Ans  1. Lake Van

2. Great salt lake

3. Dead Sea

4. Red Sea

Q.14 Which of the following is NOT true about Rocks?

Question ID : 16794319736

Ans  1.



Igneous rocks form out of magma and lava from the interior of earth.

2.

The earth's crust is composed of rocks, which is an aggregate of one or more minerals.

3.

Sedimentary rocks are also known as primary rocks.

4.

Rocks (igneous, sedimentary and metamorphic) of the earth's surface are exposed to denudational agents and are broken up into various sizes of fragments.

Q.15 The Sun was formed by moving cloud of gases, known as:

Question ID : 16794319731

Ans  1. Nebula

2. Gedid

3. While dwarfs

4. Eratosthenes

Q.16 Which of the given options is the highest peak of Himalaya in India?

Question ID : 16794319743

Ans  1. Makalu

2. Nanga Parbat

3. Mt. Everest

4. Dhaulagiri

Q.17 The word 'Sedimentary' is derived from the Latin word:

Question ID : 16794319734

Ans  1. Sedimentum

2. Sedimentium

3. Sedimentanuim

4. Sedimentaranuim

Q.18 The circulation of water within the earth's hydrosphere in different form, is known as:

Question ID : 16794319740

Ans  1. Weather cycle

2. Natural cycle

3. Climate cycle

4. Hydrological cycle

Q.19 धरती से आगे बढ़ते समय निम्नलिखित आरोही क्रम में रखें।

Question ID : 16794319735

1. आयनमंडल 2. समताप मंडल 3. क्षोभ मंडल

Ans  1. 2, 1, 3

2. 2, 3, 1

3. 1, 2, 3

4. 3, 2, 1

Q.20

Question ID : 16794319733

Which of the following statements is INCORRECT about Continental drift theory?

1. Alfred Wegener propounded his concept on continental drift in the year 1912.
2. All the continents formed a single continental mass and a mega ocean surrounded the same.
3. The super continent was called 'Pangaea' and mega – ocean was called 'Panthalassa'.

Ans  1. None of the given options

2. 2 only

3. 1 only

4. 1 and 3 both

Section : Subject Related

Q.1 Self-Employment and Talent Utilization (SETU) has established under which of the following?

Question ID : 16794319756

Ans  1. Ministry of Labour and Employment

2. Ministry of Commerce and Industry

3.

Ministry of micro, small and medium enterprises

4. Niti Aayog

Q.2 Which of the following statements is correct about 'Merchandise Export from India Scheme'?

Question ID : 16794319758

1. It was introduced in 1st April, 2015.
2. It is a major export scheme that seeks to promote export of notified goods manufactured/produced in India.
3. Due to high consumption, agricultural products are not covered under the scheme.

Ans  1. All of the given options

2. 2 and 3 only

3. 1 and 2 only

4. 1 only

Q.3 Representation to states in the Rajya Sabha is given:

Question ID : 16794319767

Ans  1. as an equal number of seats to each state

2. in proportion to their size

3. in proportion to their population

4. in accordance to their resource

Q.4 The first Constitution of India framed and given to themselves by the people of India was adopted by the Constituent Assembly on \_\_\_\_\_.

Question ID : 16794319765

Ans  1. 26<sup>th</sup> January, 1949

2. 15<sup>th</sup> August, 1947

3. 26<sup>th</sup> January, 1950

4. 26<sup>th</sup> November, 1949

Q.5 Which of the following statements is correct about Tsunami?

Question ID : 16794319754

1. The term Tsunami comes from Korean word "tsu" meaning Harbour and "nami" meaning wave.
2. Tsunami has much smaller amplitude (wave length) offshore and a very strong wavelength at sea.

Ans  1. 2 only

2. 1 only

3. None of the given options

4. 1 and 2 both

Q.6 Self Help Groups:

Question ID : 16794319760

Ans  1. provide funds to start small scale industries

2. encourage members to open bank accounts

3. provide financial support to poors

4. promote small savings among its members

Q.7 Hindustan Flourocarbons Ltd (HFL) is subsidiary company of \_\_\_\_\_.

Question ID : 16794319752

Ans  1. Hindustan Petro-chemicals Ltd

2. Hindustan Oil Ltd

3. Hindustan Organic Chemicals Ltd

4. Hindustan Insecticides Ltd

Q.8 Who addresses the Houses together at the commencement of the first session of each year?

Question ID : 16794319761

Ans  1. The President

2. The Pro tem Speaker

3. The Speaker

4. The Prime Minister

Q.9 The 44<sup>th</sup> amendment deals with which of the following options?

Question ID : 16794319763

Ans  1. Curbing the jurisdiction of high courts

2.

Extension on reservation of seats in Parliament

3. Curbing the fundamental rights

4.

Abolition of right to property as fundamental right

Q.10 The term 'Parliamentary' refers specifically to a kind of democratic polity wherein the supreme power vests in the:

Question ID : 16794319770

Ans  1. President

2. Parliament

3. Union

4. Rajya Sabha

Q.11 In India, the gap between one session of Parliament and the next CANNOT be more than:

Question ID : 16794319768

Ans  1. twelve months

2. nine months

3. three months

4. six months

Q.12 The President of India is elected by an electoral college consisting of:

Question ID : 16794319762

Ans  1.

the members of Lok Sabha, Rajya Sabha, members of legislatures and council

2.

all the members of Lok Sabha and Rajya Sabha

3.

elected members of Lok Sabha and Rajya Sabha

4.

elected members of Lok Sabha, Rajya Sabha and the state legislature

Q.13 The New Health Policy was/has been launched in which of the following years?

Question ID : 16794319755

Ans  1. 2015

2. 2018

3. 2017

4. 2016

Q.14 New Mangalore Port was declared as the \_\_\_\_\_ Port.

Question ID : 16794319753

Ans  1. 10<sup>th</sup>

2. 11<sup>th</sup>

3. 8<sup>th</sup>

4. 9<sup>th</sup>

Q.15 The original Constitution contained how many articles?

Question ID : 16794319769

Ans  1. 350

2. 380

3. 395

4. 390

Q.16 Which of the following options is INCORRECT?

Question ID : 16794319759

Ans  1.

Fixed Rate is a rate of interest that varies for the entire term of the loan or deposit.

2.

Bank Rate at which RBI lends to commercial banks.

3.

Reverse Repo at which RBI sells government securities to banks in order to absorb excess liquid from market.

4.

Statutory Liquidity Ratio (SLR) is the ratio of total deposits of a bank which it has to maintain with itself in a liquid form at any given point of time.

Q.17 The judge of a High Court in a state is appointed by the President in consultation with:

Question ID : 16794319766

Ans  1. the Chief Justice of India

2. the Governor of the state only

3.

the Chief Justice of India and the Governor of the state

4.

the Chief Justice of India and the Governor and the former Chief Justice of the High Court.

Q.18 Which of the following statements regarding Judiciary in India are correct?

Question ID : 16794319764

1. Article 122 provided the establishment of the Supreme Court with a chief justice and seven other judges.
2. In case of appointment of a judge other than chief justice, the chief justice shall be consulted.
3. Every judge of Supreme Court holds office until the age of 65 years.
4. The Supreme Court of India is free from the control and influence of legislature and executive.

Ans  1. 1 and 2

2. 2, 3 and 4

3. 1 and 3

4. 1 and 4

Q.19 With regard to the commission for Agricultural Costs and Prices (CACP), which of the given statements is FALSE?

Question ID : 16794319751

1. CACP was established with a view to evolve a balanced and integrated price structure and is mandated to advise on the price policy (MSP) of 23 crops.
2. CACP submits its recommendation in the form of Price policy reports every year.

Ans  1. None of the given options

2. Only 1

3. Only 2

4. 1 and 2 both

Q.20 In the recently released Global Hunger Index report, out 119 countries, India's rank is:

Question ID : 16794319757

Ans  1. 100<sup>th</sup>

2. 97<sup>th</sup>

3. 98<sup>th</sup>

4. 84<sup>th</sup>

Section : Subject Related

Q.1 Which of the following is INCORRECT about the Constituent Assembly?

Question ID : 16794319774

Ans  1.

The first Constituent Assembly meeting was held on 9<sup>th</sup> December, 1946.

2.

On 9<sup>th</sup> December, 1946, Dr. Rajendra Prasad was elected as the president of the Constituent Assembly

3.

Dr. Sachhidanand Sinha was the oldest member of the Constituent Assembly

4.

24<sup>th</sup> January, 1950 was the last day of the Constituent Assembly

Q.2 Which of the followings is NOT a feature of the federal system?

Question ID : 16794319775

Ans  1. Authority of courts

2. Distribution of Powers

3. Supremacy of Parliament

4. Dual Government

Q.3

Which of the following statements is correct about the Election Commission?

Question ID : 16794319778

1. In the beginning, the Election Commission consisted of the Chief Election Commissioner and four election commissioners.
2. The Election Commission shall have the power of superintendence, direction and conduct of all elections to Parliament and the state legislatures and of elections to the offices of the President and Vice-President.
3. Regional Commissioners may also be appointed by the President, in consultation with the Election Commission for assisting the election commission in general election or state legislature.

- Ans
- 1. 2 and 3 both
  - 2. 1 only
  - 3. 1 and 2 both
  - 4. 2 only

Q.4 In which of the following Articles is it mentioned that "there shall be a High Court in each State"?

Question ID : 16794319771

- Ans
- 1. 218
  - 2. 217
  - 3. 214
  - 4. 227

Q.5 After the death of DP Khaitan, who became the member of the Drafting Committee?

Question ID : 16794319773

- Ans
- 1. TT Krishnamachari
  - 2. Annie Besant
  - 3. Dada Bhai Naoroji
  - 4. Madhav Rao

Q.6 Which of the following articles of the Constitution provides the election commission as an Independent body?

Question ID : 16794319777

- Ans
- 1. Article 323
  - 2. Article 329 (b)
  - 3. Article 324
  - 4. Article 329

Q.7 In the Indian federal system, exercise of which of the following powers is limited by the fundamental rights?

Question ID : 16794319776

- Ans
- 1. Legislative
  - 2. Administrative
  - 3. Executive
  - 4. Financial

Q.8 The Constitution (52<sup>nd</sup> amendment) Act which added the Tenth Schedule, is commonly known as:

Question ID : 16794319780

- Ans
- 1. Protection of Civil Rights Act
  - 2. Schedule Castes and the Scheduled Tribes (Prevention of Atrocities) Act
  - 3. National Commission for Scheduled Castes
  - 4. Anti-Defection Law

Q.9 The Constitution as originally adopted had how many Parts and Schedules?

Question ID : 16794319772

- Ans
- 1. 10 parts and 22 schedules
  - 2. 22 parts and 8 schedules

3. 18 parts and 10 schedules

4. 12 parts and 20 schedules

Q.10 With regard to political parties and groups, which of the following statements is correct?

1. In Lok Sabha, those with a minimum strength enough to keep the quorum, i.e. 1/10<sup>th</sup> of the total membership, are recognised as Parliamentary Parties.
2. In Rajya Sabha, those with a minimum of 30 members are recognised as Parliamentary Groups.

Question ID : 16794319779

Ans  1. 1 and 2 both

2. None of the given options

3. 2 only

4. 1 only

Q.11 Electronic learning comes under

Question ID : 16794319783

Ans  1. Traditional learning

2. E-learning

3. IT learning

4. Distance learning

Q.12 Clinical and support staff are integral members of:

Question ID : 16794319790

Ans  1. Inclusive schools

2. Special schools

3. Corporate schools

4. Integrated schools

Q.13 Constant change in society is expected by:

Question ID : 16794319782

Ans  1. strangers

2. anonymous people

3. children

4. citizens

Q.14 Eradicating pay gaps and increasing the chances of women's work force is possible only through:

Question ID : 16794319785

Ans  1. special syllabus to girls

2. girls' education

3. government policies

4. None of the given options

Q.15 Integrated text books for Language, Maths and Environmental Studies, as part of integration of arts, were developed for the first time in:

Question ID : 16794319787

Ans  1. Arunachal Pradesh

2. Kerala

3. Assam

4. Uttar Pradesh

Q.16 Teaching about solar power comes under

Question ID : 16794319789

- Ans
- 1. Social Studies
  - 2. Power saving techniques
  - 3. Environmental awareness
  - 4. Practical education

Q.17 Speech and language skills are a part of:

Question ID : 16794319781

- Ans
- 1. practice sessions
  - 2. psycho motor skills
  - 3. early childhood learning
  - 4. cognitive learning

Q.18 Picnics to parks comes under:

Question ID : 16794319788

- Ans
- 1. Formal Education
  - 2. Environmental knowledge
  - 3. Non Formal Education
  - 4. Foundations of education

Q.19 Notations, symbols, graphs are a part of:

Question ID : 16794319784

- Ans
- 1. All the given options
  - 2. Scientific terminology
  - 3. Mathematical terminology
  - 4. Technical education

Q.20 Learning and education are:

Question ID : 16794319786

- Ans
- 1. not comparable
  - 2. similar terms
  - 3. parallel ways
  - 4. distinct terms