

## KVS TGT 2017 Question Paper

### PART – I (1) GENERAL ENGLISH

**Directions (1-2) :** In each group of words given below only one word is spelt correctly. Choose the one.

1. A. Nutritous B. Nutrishus  
C. Nutritius D. Nutritious
2. A. Mangificent B. Magnificent  
C. Magneficient D. Megnifecient

**Directions (3 - 5) :** Each of the following sentences has been divided into four parts. There is an error in one of the parts. Identify the part which has the error.

3. No sooner did / the thief see /  
(1) (2)  
the policeman when / he ran away.  
(3) (4)
4. Ram is / anxious to see / you for the /  
(1) (2) (3)  
last one week.  
(4)
5. I asked / my father / if I can / take his pen  
(1) (2) (3) (4)

**Directions (6 - 7) :** Each of the following idioms is followed by four meanings of which only one is correct. Choose the correct one.

6. to take away one's breath  
A. to surprise one  
B. to hit one badly  
C. to kill one  
D. to take away one's money
7. a dead letter  
A. one which has not been posted  
B. one of rejection  
C. no longer in use  
D. one that has not reached its destination

**Directions (8-9):** Choose the correct alternative to complete each of the following sentences :

8. You \_\_\_\_\_ be mad if you think I am going to lend you more money.  
A. might B. ought to  
C. should D. must

9. Eating sweets \_\_\_\_\_ be bad for your teeth.

- A. should B. would  
C. ought to D. may

**Directions (10 - 11) :** In each of the following items choose the words opposite in meaning to the given word.

10. SACRED  
A. Unholy B. Open  
C. False D. Inauspicious
11. SOBER  
A. Crooked B. Drunk  
C. Unwise D. Cruel

**Directions (12 - 13) :** Out of the given alternatives, choose the word which most closely fits each definition.

12. One who has vowed not to marry  
A. Spinster B. Bachelor  
C. Celibate D. Callous
13. A self-centred person  
A. Arrogant B. Profane  
C. Egoist D. Clever

**Directions (14 - 15) :** Choose the word from the given options which best expresses the meaning of the given word :

14. RADIANT  
A. Famous B. Bright  
C. Just D. Timely
15. STRICTURE  
A. Criticism B. Harshness  
C. Despot D. Passion

### भाग - I

#### (2) सामान्य हिन्दी

16. निम्नलिखित में से कौन सा शब्द सर्वनाम है?  
A. राधा B. वह  
C. सुन्दर D. विभीषण
17. 'उन्मूलन' का विपरीतार्थक शब्द निम्नलिखित विकल्पों में से छांटिए :  
A. रोपण B. विलोमन  
C. अनुकूलन D. विनाशन

18. निम्नलिखित वाक्यों में से अशुद्ध वाक्य का चयन कीजिए :
- A. लड़की दौड़ती है | B. शहर अच्छा है |  
C. बादशाह खांसती है | D. होटल ठीक है |
19. 'दोपहर का समय' - के लिए निम्नलिखित शब्दों में से कौन सा उपयुक्त है? चिह्नित कीजिए |
- A. रात B. संध्या  
C. अपराह्न D. मध्याह्न
20. 'आँखें चार होना' - मुहावरे के अर्थ का दिए गए विकल्पों में से चयन कीजिए |
- A. प्रेम होना B. द्रष्टि गिनना  
C. रतौधी होना D. परेशान होना
21. 'अकल पर पत्थर पड़ना' - मुहावरे के अर्थ का निम्नांकित विकल्पों में से चयन कीजिए :
- A. चोट लगना B. बुद्धि भ्रष्ट होना  
C. कठिन वाक्य D. मुसीबत
22. 'शीला आई और अंधे को सहारा दिया |' यह वाक्य किस वाक्य-भेद का उदाहरण है? सही विकल्प बताइए |
- A. संयुक्त वाक्य B. मिश्र वाक्य  
C. नकारात्मक वाक्य D. प्रश्नवाचक वाक्य
23. निम्नलिखित विकल्पों में से 'देवालय' शब्द का सन्धि-विच्छेद चिह्नित कीजिए :
- A. देवा + लय B. देवा: + लय  
C. देव + आलय D. दे + वालय
24. 'फ' वर्ण का उच्चारण स्थान बताइए |
- A. मूर्धा B. तालु  
C. कंठ D. ओष्ठ
25. सही विकल्प को चुनकर निम्नलिखित वाक्य के रिक्त स्थान की पूर्ति कीजिए :
- नाच न आवे \_\_\_\_\_ टेढ़ा
- A. उँगली B. पैर  
C. आँगन D. घड़ा
26. निम्नलिखित में से किस शब्द में 'अ' उपसर्ग है? सही विकल्प बताइए |
- A. अनेक B. अमर  
C. अतिशय D. अधिभार
27. 'छात्रावास' में कौन सी सन्धि है? सही विकल्प बताइए |
- A. दीर्घ B. गुण  
C. वृद्धि D. अयादि
28. 'ने' किस कारक की विभक्ति है? सही विकल्प चुनिए |
- A. कर्म B. सम्बन्ध  
C. कर्ता D. अधिकरण
29. निम्नलिखित शब्दों में से अशुद्ध वर्तनी वाले शब्द का चयन कीजिए :
- A. महीना B. अनुगृह  
C. क्रिया D. सप्ताह
30. 'शक्ति की उपासना करने वाले' को क्या कहते हैं? सही विकल्प बताइए |
- A. शैव B. वैष्णव  
C. शाक्त D. नाथपन्थी

**PART – II**

**(1) CURRENT AFFAIRS**

31. Where among the following is the current headquarters of UNESCO located?
- A. New York B. Geneva  
C. Switzerland D. Paris
32. Where among the following is the International Court of Justice located?
- A. Berlin B. The Hague  
C. Barcelona D. New York
33. Which among the following country won the Women's Rugby World Cup held in 2017?
- A. England B. New Zealand  
C. Canada D. Australia
34. Which of the following is the correct match of books and authors of 2017?
- |                                   |                        |
|-----------------------------------|------------------------|
| a. First Love                     | i. Sara Baume          |
| b. A Line Made by Walking         | ii. Gwendoline Riley   |
| c. The Heart's Inverisible Furies | iii. Viet-Thanh Nguyen |
| d. The Refugees                   | iv. John Boyne         |
- |    |    |     |     |     |
|----|----|-----|-----|-----|
|    | a  | b   | c   | d   |
| A. | iv | iii | ii  | i   |
| B. | ii | iii | i   | iv  |
| C. | ii | i   | iv  | iii |
| D. | i  | ii  | iii | iv  |

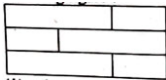
35. Where is the headquarters of World health Organisation located?  
A. Geneva B. Madrid  
C. New York D. Germany
36. Which of the following option is correct with reference to the tally of gold medals won in Asian Athletics Championship, 2017?  
A. China, India, Kazakhstan, Iran  
B. India, Kazakhstan, China, Iran  
C. Iran, India, China, Kazakhstan  
D. India, China, Kazakhstan, Iran
37. Which of the following Act was amended by the U.S. house of representatives to facilitate defence co-operation in India recently/  
A. National Defence Act, 2017  
B. National Defence Authorisation Act, 2018  
C. National Defence Act, 1980  
D. National Defence Authority Act, 2020
38. Which of the following refers to the maiden search and rescue exercise scheduled in November 2017 in Bay of Bengal?  
A. IMMESAREX B. IMSAAREX  
C. IMMASAREX D. TIMASAREX
39. What was the mascots for the 2017 FIFA Under 17 World Cup Football Tournament played in India?  
A. SHERA B. BHOLU  
C. KHELEO D. APPU
40. Where is the headquarters of International Union for Conservation of Nature located?  
A. Paris, France  
B. Gland, Switzerland  
C. Vienna, Austria  
D. New York, U.S.A.
41. Which of the following city hosted 'A festival of India' in 2017?  
A. Delhi B. Amsterdam  
C. Rotterdam D. Hague
42. Under which Article of the Constitution of India did the Union Government setup a Commission to examine the sub-categorization of the other Backward Classes in August 2017?  
A. Article 338 B. Article 338A  
C. Article 340 D. Article 341
43. Which of the following city hosted the 2017 Asian Athletics Championship?  
A. Delhi B. Bengaluru  
C. Bhubaneshwar D. Chandigarh
44. Who among the following won the gold medal in 10,000 metres race in Asian Athletics Championship, 2017?  
A. Govindan Lakshmanan  
B. Adilet Kyshtabekow  
C. Gopi Thonakal  
D. Chen Chich
45. Which of the following country won the men's gold medal in Javelin throw event of the Asian Athletics Championship in 2017?  
A. Qatar B. India  
C. China D. Thailand
46. Which of the following day was observed as 'World Teachers Day' in 2017?  
A. June, 24 B. May, 24  
C. September, 5 D. October, 5
47. Which among the following refers to the National Electric Mobility Mission Plan, 2020?  
A. To achieve national fuel security by promoting hybrid and electric vehicles in the country.  
B. To replace diesel engines with electric engines and achieve fuel security.  
C. To replace coal engines with electric engines and achieve fuel security.  
D. To replace petrol engines by diesel engines and achieve fuel security.
48. Which of the following day was observed as the 'World Cancer Day' this year?  
A. February, 1 B. January, 26  
C. February, 4 D. February, 14
49. Which of the following day was observed on March 1<sup>st</sup> this year?  
A. Self Injury Awareness Day  
B. Blood Cancer Awareness Day  
C. Anti-terrorism Day  
D. National Youth Day
50. Which of the following day was observed as the International Day of Happiness in 2017?  
A. March, 25 B. February, 14  
C. January, 1 D. March, 20
51. Which of the following day was observed as the 'World Nature Conservation Day' this year?  
A. 15, August B. 28, July  
C. 27, June D. 25, March
52. Who among the following has recently authored the book named, 'The Ministry of Utmost Happiness'?  
A. C. M. Pokhriyal  
B. Arundhati Roy  
C. David Grossman  
D. Michael Clarke

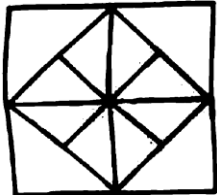
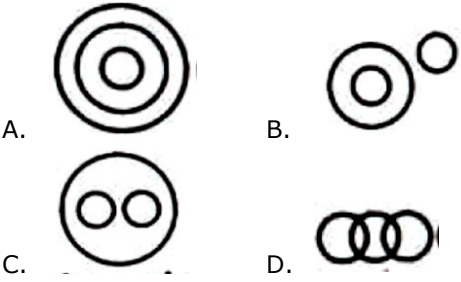
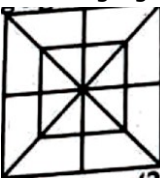
53. Which of the legendary poet was conferred with 4<sup>th</sup> Kalinga Literary Award in 2017?  
A. Hemant Mohapatra  
B. Anil Chavda  
C. Haraprasad Das  
D. Tapan Kumar Pradhan
54. Who is the author of 'Indira Gandhi : A Life in Nature', published recently?  
A. Jai Ram Ramesh  
B. M. Veerappa Moily  
C. D. G. Tendulkar  
D. Kiren Rijiju
55. Which of the following book has been authored by Ashwini Kumar in 2017?  
A. The Rise of Sivagami  
B. Gandhi in Champaran  
C. Hope in a Challenged Democracy : An Indian Narrative  
D. The Flaming Tresses of Draupadi
56. With reference to the books published in 2017 and its authors, which among the following is the correct match?  
a. Istanbul : A Tale of Three Cities  
b. Age of Anger : A History of The Present  
c. 4321 : A Novel  
d. We come Apart  
i. Pankaj Mishra  
ii. Paul Auster  
iii. Sarah Crossan and Brian Conaghan  
iv. Bettany Hughes
57. Which is the correct statement with reference to the recently launched e-RAKAM portal/  
A. A digital platform for exchanging currencies.  
B. A digital platform for buying and selling agricultural products.  
C. A digital platform for paying taxes.  
D. A digital platform for imports and exports.
58. Which of the following statement is correct about the recently launched mobile app called 'Aarambh' by the Government of India?  
A. An app for performance based maintenance of roads.  
B. An app for performance based maintenance of buildings.  
C. An app for performance based maintenance of reservoirs.  
D. An app for performance based maintenance of cleanliness.
59. Which of the following institution has recently launched the 'Mentor India' initiative?  
A. SHRAM Aayog  
B. NITI Aayog  
C. NAMO GANGE Aayog  
D. Make in India Campaign
60. Which of the following State Government has recently launched the India's first student startup and innovation policy?  
A. Gujarat Government  
B. Delhi Government  
C. Haryana Government  
D. Tamil Nadu Government
61. Which of the following is the correct statement regarding the 'Navika Sagar Parikrama Project', 2017?  
A. First Indian Circumnavigation of the globe by an all women crew.  
B. First global navigation of oceans by Indian men.  
C. First navigation of seas and oceans by Indians.  
D. First international circumnavigation.
62. What is the theme of the 2017 National Girl Child Day?  
A. Child Marriage Prohibition  
B. Girl Child Safety  
C. Beti Bachao, Beti Padhao  
D. Beti Bachao, Beti Badhao
63. Which of the following is the correct statement regarding the new Open Acreage Licensing Policy for Oil and Gas Exploration?  
A. It prohibits licensing policy for oil exploration.  
B. It allows bidders to carve out areas where they want to drill.  
C. It prohibits licensing policy for gas exploration.  
D. It allows oil and gas exportation.
64. Which of the following country is hosting the G7 Interior Minister's Summit on security in 2017?  
A. Canada  
B. Italy  
C. France  
D. Japan

65. Which of the following day was observed as International Literacy Day in 2017?  
A. August, 15      B. January, 26  
C. September, 8      D. April, 24
66. Where is the headquarters of the North Atlantic Treaty Organisation (NATO) located?  
A. Brussels, Belgium  
B. Berlin, Germany  
C. Kathmandu, Nepal  
D. Paris, France
67. Which of the following day was observed as the National Girl Child Day in 2017?  
A. August, 15      B. August, 24  
C. January, 26      D. January, 24
68. In which country was the Women's Rugby World Cup held in 2017?  
A. Ireland      B. England  
C. Canada      D. France
69. Who among the following won the UEFA Men's Player of the year award for the 2016/17 session?  
A. Paulo Dybala      B. Cristiano Ronaldo  
C. Lionel Messi      D. Casemiro
70. Which of the following country is still showing records of polio according to WHO?  
A. Somalia      B. India  
C. Pakistan      D. Bangladesh
75. If the 3<sup>rd</sup> of a month is Sunday and the month has 5 Sundays, then the month consists of how many days?  
A. 31 days      B. 30 days  
C. 29 days      D. 28 days
76. If 253 is coded as 352 and 475 is coded as 574, then 2317 would be coded as  
A. 7321      B. 7231  
C. 7123      D. 7132
77. If the 25<sup>th</sup> of July in a year is Thursday, the number of Tuesdays in that month will be \_\_\_\_\_.  
A. 3      B. 4  
C. 5      D. 6
78. Which of the following is the next term of the series given below?  
ACX, BDU, CER, DFO, ?  
A. FHN      B. EGL  
C. DHN      D. DGM
79. Which of the following is the missing term of the series given below?  
1, 8, ?, 64, 25, 216  
A. 4      B. 9  
C. 27      D. 49
80. From the given alternatives, select the word which cannot be formed using the letters of the given word.  
MANUFACTURER  
A. CURRENT      B. NATURE  
C. FRACTURE      D. MANNER

**PART – II**

**(2) REASONING ABILITY**

71. If first and the last day of the month are Sundays and the month has 5 Sundays, then the number of days in the month are  
A. 28      B. 29  
C. 30      D. 31
72. Find the missing term in the series given below :  
0, 4, 18, 48, ?, 180, 294  
A. 72      B. 90  
C. 100      D. 142
73. Which number does not belong to the class?  
125, 343, 512, 476, 216  
A. 476      B. 343  
C. 216      D. 125
74. Which of the numbers does not belong to the group?  
325, 473, 246, 583, 684  
A. 684      B. 583  
C. 473      D. 325
81. The word RACE is coded as 3124 and LEARN is coded as 54136, then CLEAR would be coded as  
A. 25413      B. 21354  
C. 25431      D. 24135
82. A student ranks 9<sup>th</sup> from top and 24<sup>th</sup> from the bottom in his class. The total number of children in the class is  
A. 30      B. 31  
C. 32      D. 33
83. Which of the following words appears last of all the other three in the English dictionary?  
A. Opportune      B. Opponent  
C. Oppress      D. Opposite
84. How many rectangles are there in the following figure?  
  
A. 6      B. 9  
C. 12      D. 15

85. If 'new school' is coded as '23', 'school and teacher' as '304' and 'good teacher' is coded as 14, then 'good new teacher and school' would be coded as  
 A. 12403                      B. 21034  
 C. 20431                      D. 14320
86. Some equations are solved on the basis of a certain system. On the same basis, find out the correct answer from amongst the four alternatives for the unsolved equation.  
 $4 \Delta 5 = 29, 6 \Delta 7 = 55, 7 \Delta 8 = ?$   
 A. 35                              B. 44  
 C. 63                              D. 71
87. Which of the following fills the gap in the series?  
 11, 31, 41, ?, 71, 91  
 A. 43                              B. 47  
 C. 51                              D. 61
88. If 121 : 1331 and 169 : 2197, then 289 : ?  
 A. 2057                          B. 2873  
 C. 4913                          D. 6859
89. In a certain code language PARK is coded as RCTM and SPARE is coded as URCTG, then BUCKET would be coded as  
 A. CVDLFU                      B. FXEMGZ  
 C. EXFNHW                      D. DWEMGV
90. A man walks 6 m towards south and then turns right. After walking 4 m, he again turns right and walks 6 m. In which direction is he now from the starting point?  
 A. West                            B. East  
 C. North                          D. South
91. What will be the order of appearance of following words in English dictionary?  
 i. Breath  
 ii. Breast  
 iii. Breadth  
 iv. Breach  
 A. i, ii, iii, iv                    B. iv, ii, i, iii  
 C. iv, iii, ii, I                    D. iii, i, iv, ii
92. What is the number of triangles in the following figure?  
  
 A. 12                                B. 16  
 C. 20                                D. 24
93. Five students are sitting in a row. Tushant is on the right of Ravi. Manoj is on the left of Ravi but on the right of Lokesh. Tushant is on the left of Kunal. Who is sitting in the middle?  
 A. Ravi                            B. Tushant  
 C. Lokesh                        D. Manoj
94. Identify the diagram that best represents the relationship among classes given below:  
 Liquids, Milk, Oil  
  
 A.                                    B.  
 C.                                    D.
95. Find the number which does not fit in the series :  
 2, 3, 5, 7, 9, 11, 13  
 A. 5                                B. 7  
 C. 9                                D. 13
96. Which two numbers do not fit in the series?  
 13, 23, 33, 43, 53, 63, 73  
 A. (23, 43)                        B. (33, 63)  
 C. (13, 53)                        D. (53, 73)
97. The sum of ages of three brothers born at intervals of 5 years, is 36 years. The difference between the ages of eldest and the youngest brother is  
 A. 5 years                        B. 10 years  
 C. 12 years                        D. 15 years
98. How many triangles are there in the following figure?  
  
 A. 12                                B. 20  
 C. 28                                D. 32
99. CAPE is coded as 1243 and HOLD is coded as 5867, then HEAD would be coded as  
 A. 7632                          B. 5327  
 C. 8247                          D. 5627
100. If 312 is written as 6 and 654 is written as 15, then 978 would be written as  
 A. 17                                B. 19  
 C. 24                                D. 27



101. A man walks 3 km towards north of his house and turns left and walks 2 km. Then he turns right and walks 1 km. Then he again turns right and walks 5 km. How far is he now from his house?  
 A. 4 km                      B. 5 km  
 C. 8 km                      D. 11 km
102. Mukesh is the brother of Satish, Deepti is the sister of Saurabh. Satish is the son of Deepti. How is Mukesh related to Deepti?  
 A. Nephew                  B. Son  
 C. Brother                  D. Father
103. Which of the following is the next term in the series?  
 ABZ, CDX, EFV, GHT, \_\_\_\_\_  
 A. JLT                      B. IKS  
 C. JKR                      D. IJR
104. STOP : POTS and RATS : STAR, then START : \_\_\_?\_\_\_  
 A. TRATS                  B. RATTs  
 C. STRTA                  D. TRTSA
105. What is related to 'Hockey' in the same way as 'Umpire' is related to 'Cricket'?  
 A. Captain                  B. Player  
 C. Spectator                D. Referee
106. Find the missing number '?'
- |    |    |   |
|----|----|---|
| 7  | 9  | 8 |
| 12 | 2  | ? |
| 5  | 13 | 6 |
- A. 14                      B. 12  
 C. 10                      D. 9
107. Find the missing term in the series given below :  
 5374261, 537426, 37426, ?, 742, 74  
 A. 5374                      B. 4261  
 C. 3742                      D. 7426
108. Find the missing terms in the given series in their natural order :  
 2, 4, 3, ?, 5, 25, ?, 49, 11, ?  
 A. 9, 7, 121                B. 9, 6, 144  
 C. 6, 36, 121              D. 5, 125, 144
109. Which of the following numbers continues the series given below?  
 0, 7, 26, 63, 124, ?  
 A. 192                      B. 200  
 C. 208                      D. 215
110. Which number does not belong to the class of other three?  
 A. 5202                      B. 3411  
 C. 2431                      D. 1413

**PART – II**

**(3) TEACHING METHODOLOGY**

111. If it is said that students of class VII are not able to read and write, what could be the most important reason for this situation?  
 A. Less intelligent children  
 B. Carelessness of parents  
 C. No detention policy  
 D. Insensitive implementation of CCE
112. In Educational technology, application of psychology is known as \_\_\_\_\_.  
 A. Software approach  
 B. Hardware approach  
 C. Pedagogic approach  
 D. System analysis
113. Moral values can be best included amongst students by  
 A. arranging lectures of eminent persons  
 B. co-curricular activities  
 C. relevant literature  
 D. teacher as a role model
114. Operation Black Board was initiated as a follow up of recommendations of  
 A. NPE 1986  
 B. CABE  
 C. Kothari Commission (1964-66)  
 D. National curriculum for Elementary and Secondary Education – A Framework 1988
115. In the modern era of fast technological advancement, what could be its most serious side effect?  
 A. Role of teachers would vanish  
 B. Class-rooms would become smart  
 C. Learning would become easier  
 D. Moral values would get eroded
116. Teacher should begin a new topic or lesson with  
 A. teacher's own experiences  
 B. some interests already possessed by students  
 C. an overview of the subject  
 D. explaining the importance of the subject
117. Which measure of central tendency represents a point and not a value?  
 A. Mean                      B. Median  
 C. Mode                      D. Average

118. If the students are classified on the basis of intelligence level, the average group will comprise of middle \_\_\_\_\_.
- A. 33.33 percent  
B. 40.00 percent  
C. 50.00 percent  
D. 68.26 percent
119. A good 'Head of School' is one who
- A. understands educational administration and applies its principles in toto  
B. does not compromise with misconduct  
C. is flexible in approach and works co-operatively with human touch  
D. allows freedom to teachers and students in their affairs
120. Best way to monitor progress is
- A. monitoring by superiors  
B. self monitoring  
C. monitoring by peers  
D. societal monitoring
121. As per RTE Act 2009, preparation of the school development plan is the responsibility of
- A. School Head Teacher  
B. School Management Committee  
C. Block Education Officer  
D. Cluster Resource Person
122. As per RTE Act 2009, a full time head-teacher is provided in a school having classes sixth to eighth where admission of children is above
- A. 80  
B. 100  
C. 120  
D. 130
123. Continuous and Comprehensive Evaluation (CCE) in the school context, implies
- A. continuous monitoring of teachers' performance  
B. assessment not to be spread over the total instructional time  
C. assessment of both scholastic and co-scholastic aspects of children's learning  
D. making teacher accountable to both parents and school
124. The corporal punishment in schools has been prohibited by the
- A. Child Labour Prohibition Act  
B. National Policy on Education 1986  
C. National Curriculum Framework 2005  
D. RTE Act, 2009
125. Critical pedagogy does not entail the following :
- A. acceptance of multiple views on social issues  
B. supremacy of role models to follow  
C. democracy as a way of life  
D. collective decision making through open discussion
126. Behaviour indications are used in the learning theory given by
- A. Kohler  
B. Hull  
C. Thorndike  
D. Skinner
127. Conditions of learning were given by
- A. Skinner  
B. Robert Gagne  
C. Watson  
D. Maslow
128. The concept of primary mental abilities was given by
- A. Guilford  
B. Thurstone  
C. Spearman  
D. Vernon
129. Children take more interest in classroom activities when
- A. teacher behaves in a friendly manner  
B. subject matter is very easy to comprehend  
C. teacher commands a good personality  
D. classroom activities closely relate to their own experiences
130. Which one of the following constitutes first step in the sequence of concept formation?
- A. Abstraction  
B. Experiencing  
C. Differentiation  
D. Generalization
131. Students respect their teacher primarily owing to his/her
- A. legal authority  
B. personal integrity and goodwill  
C. popularity and influence  
D. adult status
132. Social mobility does not promote
- A. higher positions to deserving persons  
B. welfare and happiness  
C. pride and snobbery  
D. remedy for maladjustment
133. Which of the following information about the child need not be emphasized in guidance?
- A. Child's previous experiences and examination results  
B. Child's interest, aspiration and other qualities  
C. Parents' religion, caste and Social status  
D. Parental aspirations



134. Which one of the following is not an element of creativity?  
A. Frequency            B. Conservation  
C. Flexibility            D. Elaboration
135. Which of the following was not the main consideration of Rabindranath Tagore while conceptualizing a World University – Viswa Bharti?  
A. Going beyond aggressive nationalism  
B. Building friendship with all nations  
C. Emphasize co-operation between east and west  
D. Emphasizing oriental philosophy
136. Kilpatrick's Project method is an outcome of  
A. Pragmatism alone  
B. Pragmatism and Realism  
C. Realism alone  
D. Realism and Idealism
137. In a good school time-table, which one of the following is not desirable?  
A. Assignment of subjects as per qualification of teachers  
B. Fixed provision of time and place for activities by teachers and students  
C. Opportunity for equipment utilization  
D. Provision for both longer and shorter periods
138. Which one of the following is not a projective test of personality?  
A. Personality inventories  
B. sentence completion test  
C. Rorscha Ink Block test  
D. Thematic
139. Minimum Levels of Learning (MLLs) (1991) were identified to  
A. combine quality with equity  
B. help every child pass the class  
C. make aware the parents about children's learning levels  
D. reduce the work load of teachers
140. Role of teacher in Front Line curriculum happens to be of a/an \_\_\_\_\_  
A. Academic Leader  
B. Pace Setter  
C. Neutral person  
D. Co-learner
141. Identify the correct sequence in the Taxonomy Affective Domain given by Bloom, Krathwohl and Masiz (1964) :  
A. Receiving, valuing, responding, characterization and organization  
B. Receiving, responding, valuing, organization and characterization  
C. Receiving, valuing, organization, characterization and responding  
D. Receiving, responding, organization, valuing and characterization
142. What is the main reason for programmes like Sarva Shiksha Abhiyan not being able to yield desired educational outcomes?  
A. Teachers are in short supply  
B. Inspection and supervision is weak  
C. Quality dimensions are not monitored properly  
D. Children come from impoverished backgrounds
143. Which one of the following is not an aim of Sarva Shiksha Abhiyan?  
A. All children to be in school  
B. Most of the children get vocational education  
C. Bridging all gender and social category gaps  
D. All children complete eight years of schooling
144. If the steps in an institutional planning are assigned codes as under :  
Formulation of objective - a  
Activities planned - b  
Situational analysis - c  
Monitoring mechanism - d  
Evaluation and feedback - e  
What is the correct sequence of events?  
A. b, a, c, e, d            B. c, a, b, d, e  
C. a, b, c, d, e            D. c, b, a, e, d
145. Action Research is done by  
A. scholars for a degree  
B. Social workers for implementing projects  
C. Practitioners for improving their practices  
D. Educational planners and administrators
146. Which one is not considered a theory of motivation?  
A. Self Actualization Theory  
B. Psychoanalytic Theory  
C. Interference Theory  
D. Achievement Motivation Theory

147. If one of your students complains of injustice that she/he has been awarded less marks, you would
- A. justify the evaluation done.
  - B. ask him/her to mid his/her business.
  - C. ask her to report to the principal as per rules.
  - D. allow comparison of her/his script with others.
148. How can reliability of a test be increased?
- A. By seeking expert's agreement
  - B. By increasing the test length
  - C. By shortening the test length
  - D. By arranging items in order of difficulty
149. A good Diagnostic test tells us about
- A. the level of accomplishment of children
  - B. the quality of classroom instruction
  - C. the areas of child's weakness and the plausable reasons
  - D. the effectiveness of the teacher
150. Which philosophy of education termed the role of a teacher as mere guide and observer?
- A. Naturalism
  - B. Idealism
  - C. Realism
  - D. Pragmatism